

Worksheet

02/05/2019

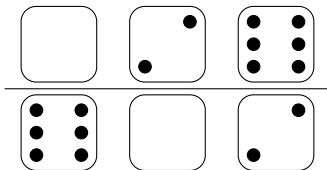
Free on dw-math.com

Problem quickname: 5491

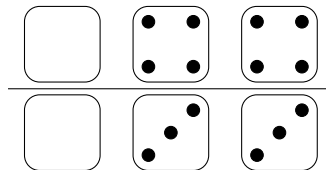
1)

Draw pips for the empty dice so that the sum indicated is correct.

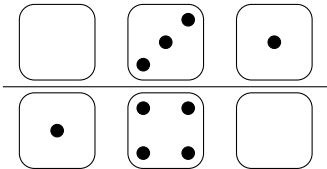
a) Sum of every row: 10



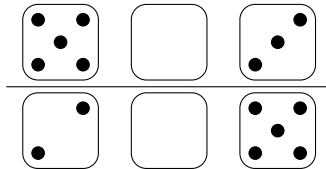
b) Sum of every row: 10



c) Sum of every row: 10




d) Sum of every row: 10




2)

Draw pips for the empty dice so that the sum indicated is correct.

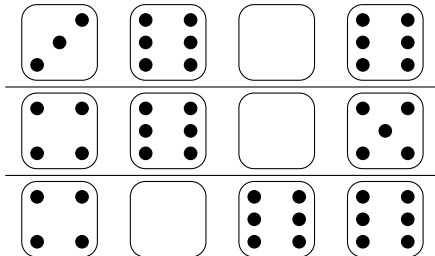
a) Sum of every row: 20




b) Sum of every row: 20



c) Sum of every row: 20



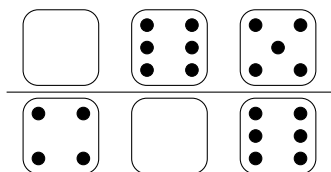
d) Sum of every row: 20



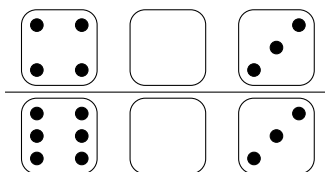
3)

Draw pips for the empty dice so that the sum indicated is correct.

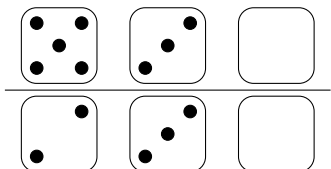
a) Sum of every row: 15



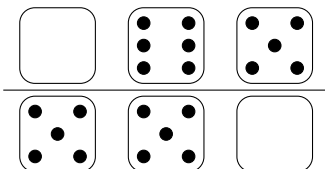
b) Sum of every row: 12



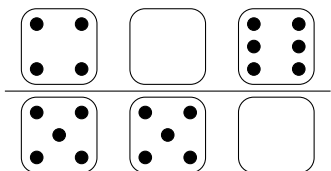
c) Sum of every row: 10



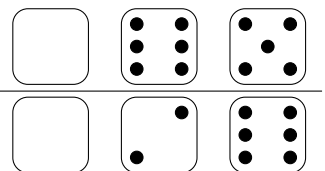
d) Sum of every row: 12



e) Sum of every row: 15



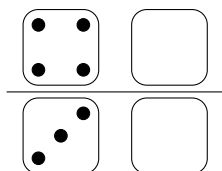
f) Sum of every row: 12



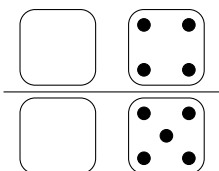
4)

Draw pips for the empty dice so that the sum indicated is correct.

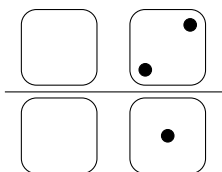
a) Sum of every row: 9



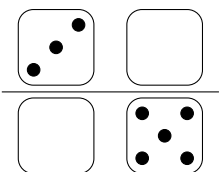
b) Sum of every row: 10



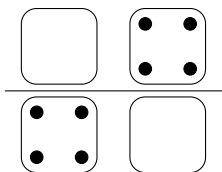
c) Sum of every row: 7



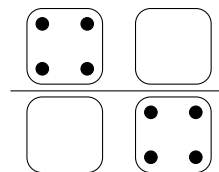
d) Sum of every row: 7



e) Sum of every row: 10



f) Sum of every row: 9



Good Luck!