

# Worksheet

05/04/2020

Free on dw-math.com

Problem quickname: 8490

1)

What subtraction problem is shown here? Continue as shown in the example a).

a)  $\begin{array}{cccccc} \bigcirc & \bigcirc & \bigcirc & \bigcirc & \bigcirc & \\ \cancel{\bigcirc} & \cancel{\bigcirc} & \cancel{\bigcirc} & & & \end{array}$

$$8 - 3 = 5$$

b)  $\begin{array}{cccccc} \bigcirc & \bigcirc & \cancel{\bigcirc} & \cancel{\bigcirc} & \cancel{\bigcirc} & \\ \cancel{\bigcirc} & & & & & \end{array}$

$$6 - 4 = \blacksquare$$

c)  $\begin{array}{cccccc} \bigcirc & \bigcirc & \cancel{\bigcirc} & \cancel{\bigcirc} & \cancel{\bigcirc} & \\ \cancel{\bigcirc} & \cancel{\bigcirc} & \cancel{\bigcirc} & & & \end{array}$

$$8 - 6 = \blacksquare$$

d)  $\begin{array}{cccc} \bigcirc & \bigcirc & \cancel{\bigcirc} & \cancel{\bigcirc} \\ & & & \end{array}$

$$\blacksquare - 2 = 2$$

e)  $\begin{array}{cccccc} \bigcirc & \bigcirc & \bigcirc & \bigcirc & \bigcirc & \cancel{\bigcirc} \\ & & & & & \end{array}$

$$\blacksquare - 1 = 4$$

2)

What subtraction problem is shown here?

a)  $\begin{array}{cccccc} \bigcirc & \bigcirc & \cancel{\bigcirc} & \cancel{\bigcirc} & \cancel{\bigcirc} & \\ \cancel{\bigcirc} & \cancel{\bigcirc} & \cancel{\bigcirc} & & & \end{array}$

$$8 - \blacksquare = 2$$

b)  $\begin{array}{cccccc} \bigcirc & \bigcirc & \cancel{\bigcirc} & \cancel{\bigcirc} & \cancel{\bigcirc} & \\ \cancel{\bigcirc} & \cancel{\bigcirc} & \cancel{\bigcirc} & \cancel{\bigcirc} & \cancel{\bigcirc} & \end{array}$

$$10 - \blacksquare = 2$$

c)  $\begin{array}{cccccc} \bigcirc & \bigcirc & \cancel{\bigcirc} & \cancel{\bigcirc} & \cancel{\bigcirc} & \\ \cancel{\bigcirc} & \cancel{\bigcirc} & & & & \end{array}$

$$7 - \blacksquare = 2$$

d)  $\begin{array}{cccccc} \bigcirc & \bigcirc & \bigcirc & \cancel{\bigcirc} & \cancel{\bigcirc} & \\ \cancel{\bigcirc} & & & & & \end{array}$

$$6 - \blacksquare = 3$$

e)  $\begin{array}{cccccc} \bigcirc & \bigcirc & \bigcirc & \cancel{\bigcirc} & \cancel{\bigcirc} & \\ & & & & & \end{array}$

$$5 - \blacksquare = 3$$

f)  $\begin{array}{cccccc} \bigcirc & \bigcirc & \bigcirc & \bigcirc & \bigcirc & \cancel{\bigcirc} \\ \cancel{\bigcirc} & & & & & \end{array}$

$$6 - \blacksquare = 4$$

g)  $\begin{array}{cccccc} \bigcirc & \bigcirc & \bigcirc & \bigcirc & \bigcirc & \\ \cancel{\bigcirc} & & & & & \end{array}$

$$6 - \blacksquare = 5$$

h)  $\begin{array}{cccccc} \bigcirc & \bigcirc & \cancel{\bigcirc} & \cancel{\bigcirc} & \cancel{\bigcirc} & \\ & & & & & \end{array}$

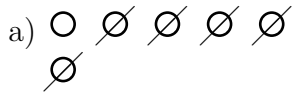
$$5 - \blacksquare = 2$$

i)  $\begin{array}{cccc} \bigcirc & \bigcirc & \cancel{\bigcirc} & \cancel{\bigcirc} \\ & & & \end{array}$


$$4 - \blacksquare = 2$$

3)

What subtraction problem is shown here? Continue as shown in the example a).



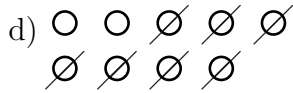
6 - 5 = 1



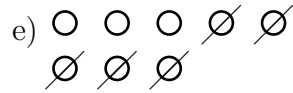
6 - 3 =



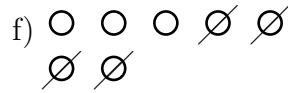
3 - 2 =



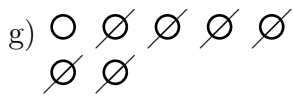
- 7 = 2




- 5 = 3



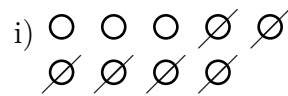
7 - 4 =



7 -  = 1



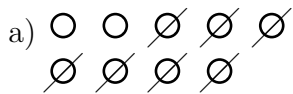
6 -  = 4



9 - 6 =

4)

What subtraction problem is shown here? Continue as shown in the example a).



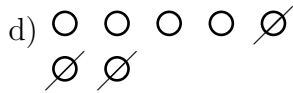
9 - 7 = 2




-  =



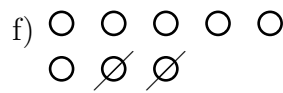
-  =




-  =



-  =



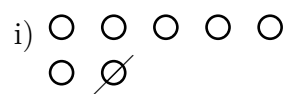
-  =



-  =



-  =



-  =

Good Luck!