

Worksheet

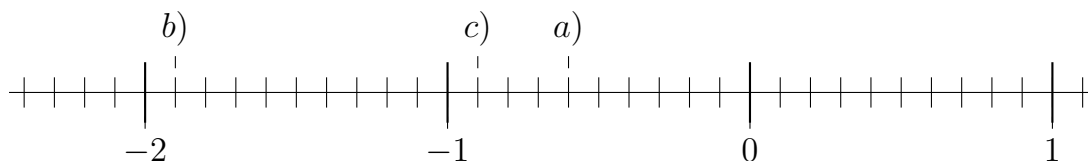
05/27/2018

Free on dw-math.com

Problem quickname: 7110

1)

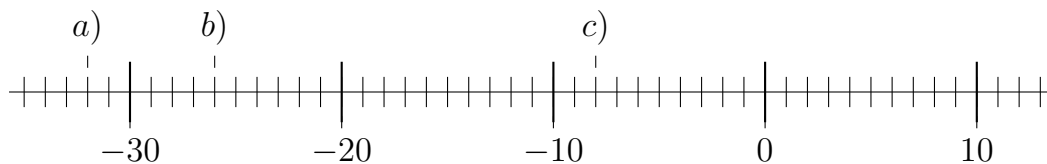
Draw a number line with appropriate scaling and mark the position of each number.

Quick:
7110

a) = -0.6 ; b) = -1.9 ; c) = -0.9

2)

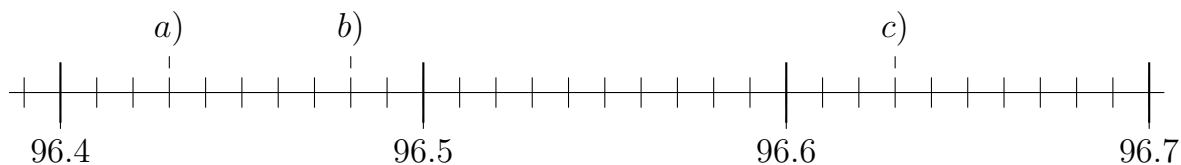
Draw a number line with appropriate scaling and mark the position of each number.

Quick:
7110

a) = -32 ; b) = -26 ; c) = -8

3)

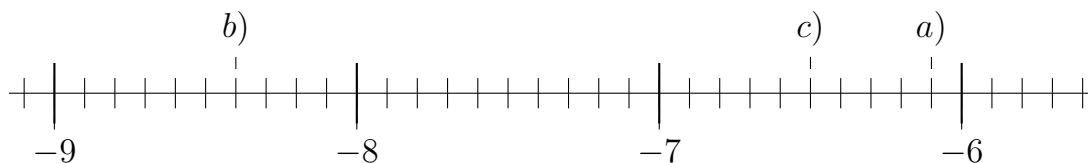
Draw a number line with appropriate scaling and mark the position of each number.

Quick:
7110

a) = 96.43 ; b) = 96.48 ; c) = 96.63

4)

Draw a number line with appropriate scaling and mark the position of each number.

Quick:
7110

$$a) = -6.1 ; b) = -8.4 ; c) = -6.5$$

Good Luck!