

Worksheet

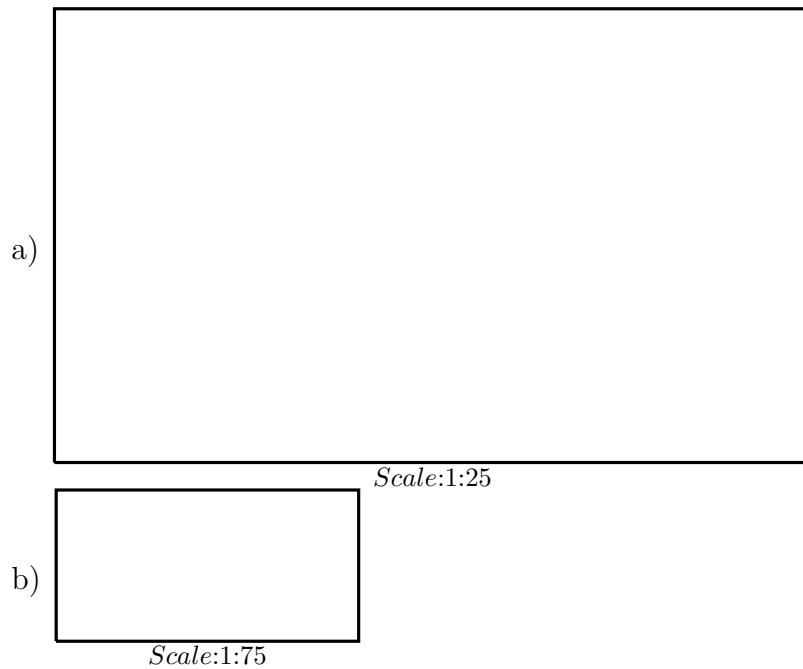
05/09/2020

Free on dw-math.com

Problem quickname: 9001

1)


The rectangle shown has been reduced by the scale factor indicated. What is the length and width of the original unscaled rectangle?



2)

The rectangle shown has been reduced by the scale factor indicated. What is its area in

this drawing? What is the length, width and area of the original unscaled rectangle?



Scale:1:125000



Scale:1:500000

3)

The rectangle shown has been reduced by the scale factor indicated. What is its area in this drawing? What is the length, width and area of the original unscaled rectangle?




Scale:1:25

4)

The rectangle shown has been reduced by the scale factor indicated. What is the

length and width of the original unscaled rectangle?



Scale:1:5

Scale:1:75

Good Luck!