

Worksheet

11/03/2019

Free on dw-math.com

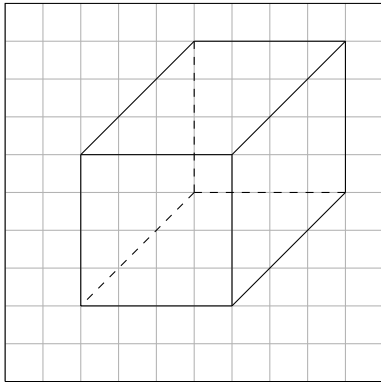
Problem quickname: 5978

1)

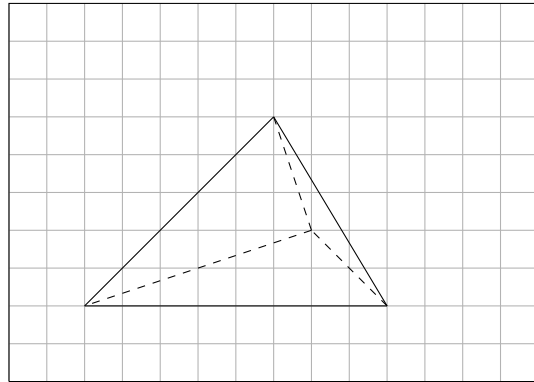
Name the geometric shape that is shown.

Quick:
5978

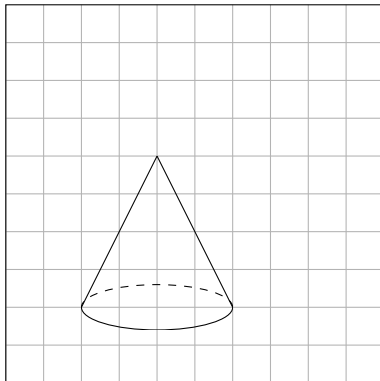
a) Shape: A cuboid



b) Shape: A tetrahedron



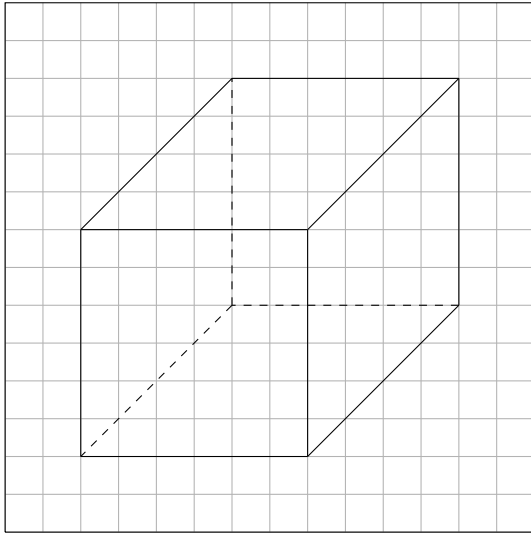
c) Shape: A cone



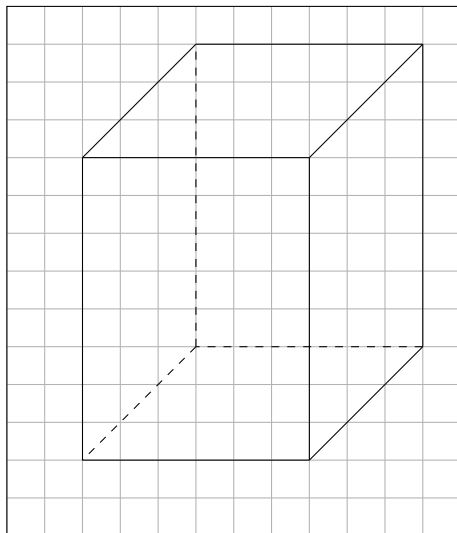
2)

Name the geometric shape that is shown.

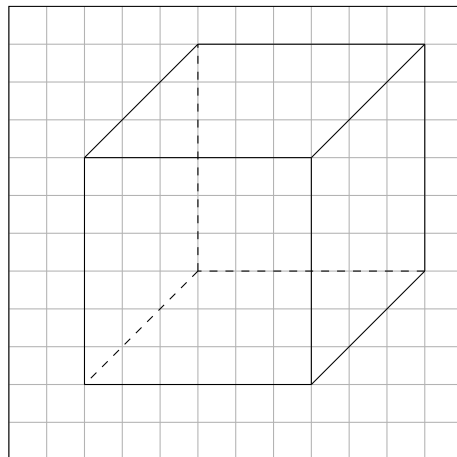
a) Shape: A cuboid



b) Shape: A cuboid



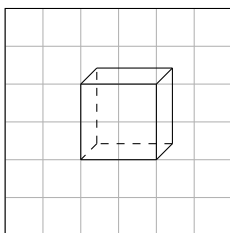
c) Shape: A cube, and a cuboid, too.



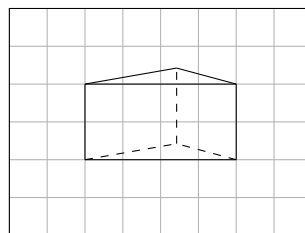
3)

Name the geometric shape that is shown.

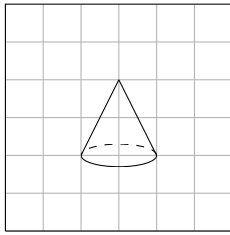
a) Shape: A cube, and a cuboid, too.



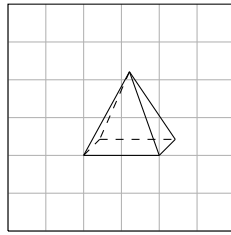
b) Shape: A prism



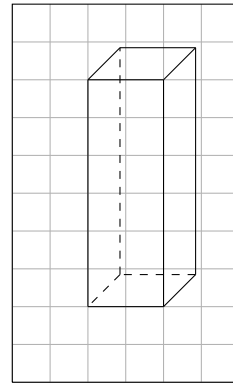
c) Shape: A cone



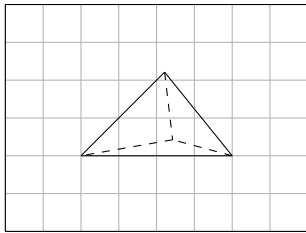
d) Shape: A pyramid



e) Shape: A cuboid



f) Shape: A tetrahedron

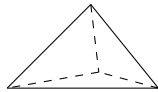


4)

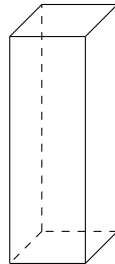
Name the geometric shape that is shown.

Quick:
5978

a) Shape: A tetrahedron



b) Shape: A cuboid



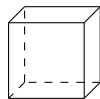
c) Shape: A cone



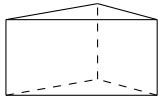
d) Shape: A pyramid



e) Shape: A cube, and a cuboid, too.



f) Shape: A prism



Good Luck!