

# Worksheet

05/11/2020

Free on dw-math.com

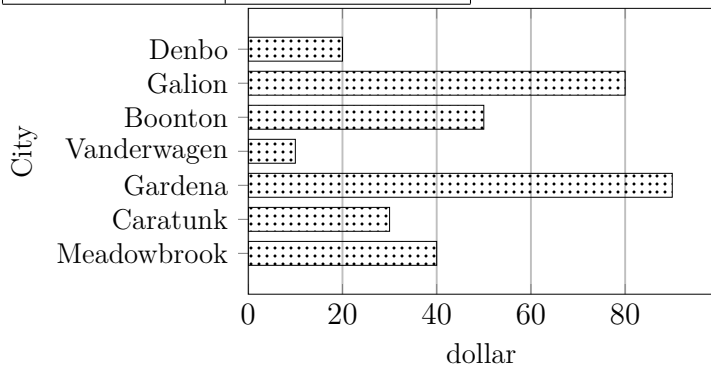
Problem quickname: 9901

1)

Complete the bar chart. Label the X axis with "Amount", the Y axis with "City".

Quick:  
9901

City	Amount(dollar)
Meadowbrook	40
Caratunk	30
Gardena	90
Vanderwagen	10
Boonton	50
Galion	80
Denbo	20

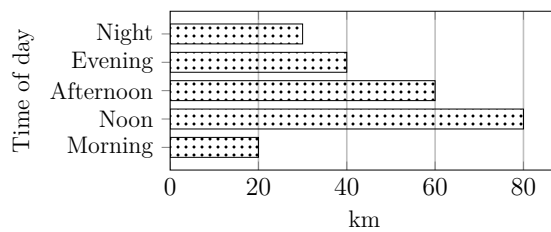


2)

Complete the bar chart.

Quick:  
9901

Time of day	Length(km)
Morning	20
Noon	80
Afternoon	60
Evening	40
Night	30

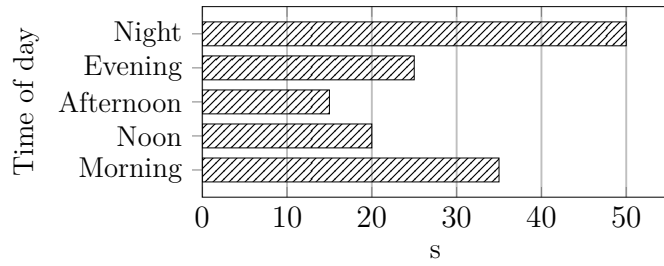


3)

Quick:  
9901

Complete the bar chart.

Time of day	Time(s)
Morning	35
Noon	20
Afternoon	15
Evening	25
Night	50

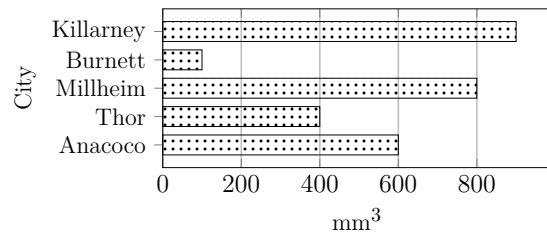


4)

Quick:  
9901

Complete the bar chart. Label the X axis with "Volume", the Y axis with "City".

City	Volume(mm <sup>3</sup> )
Anacoco	600
Thor	400
Millheim	800
Burnett	100
Killarney	900



Good Luck!