

Worksheet

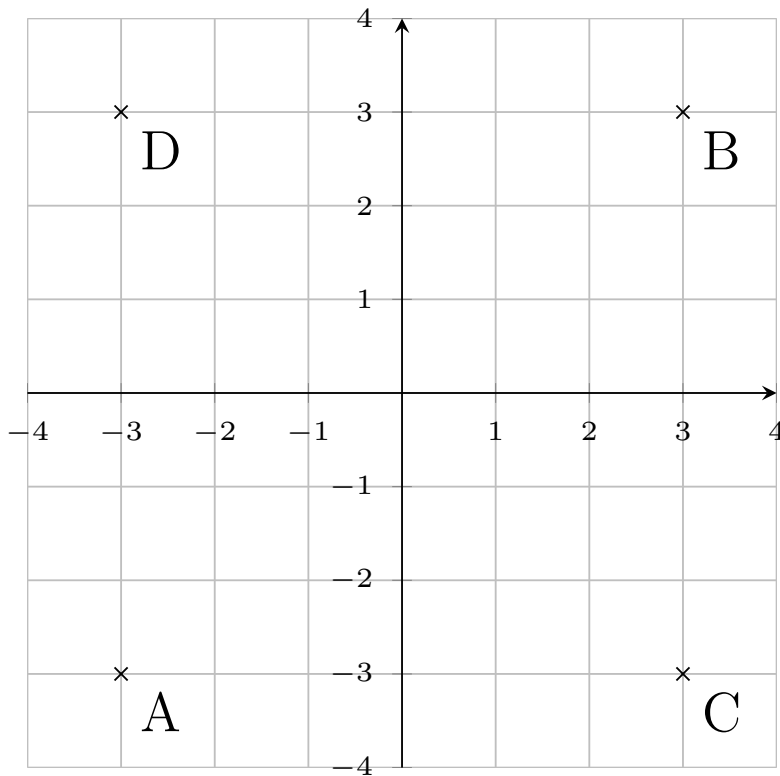
05/20/2020

Free on dw-math.com

Problem quickname: 2301

1)

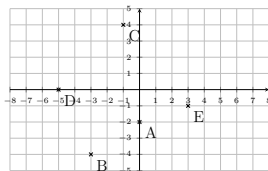
Specify the coordinates of the points marked on the coordinate plane.

Quick:
2301

A(-3|-3), B(3|3), C(3|-3), D(-3|3)

2)

Specify the coordinates of the points marked on the coordinate plane.

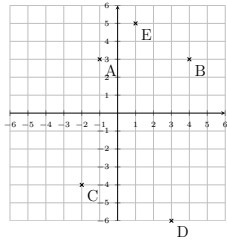
Quick:
2301

A(0|-2), B(-3|-4), C(-1|4), D(-5|0), E(3|-1)

3)

Quick:
2301

Specify the coordinates of the points marked on the coordinate plane.

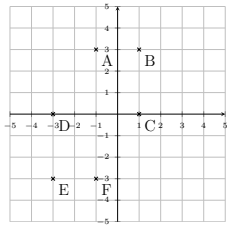


A(-1|3), B(4|3), C(-2|-4), D(3|-6), E(1|5)

4)

Quick:
2301

Specify the coordinates of the points marked on the coordinate plane.



A(-1|3), B(1|3), C(1|0), D(-3|0), E(-3|-3), F(-1|-3)

Good Luck!