

Worksheet

11/03/2019

Free on dw-math.com

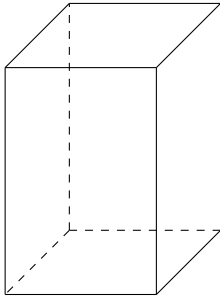
Problem quickname: 5978

1)

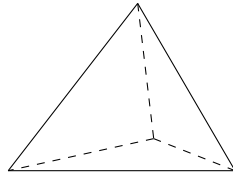
Name the geometric shape that is shown.

Quick:
5978

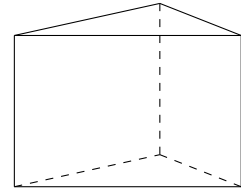
a) Shape: A cuboid



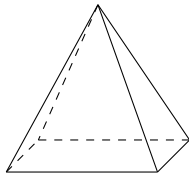
b) Shape: A tetrahedron



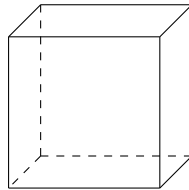
c) Shape: A prism



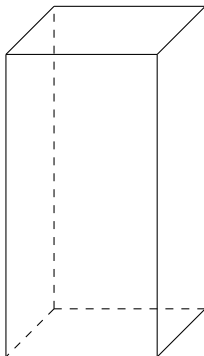
d) Shape: A pyramid



e) Shape: A cube, and a cuboid, too.



f) Shape: A cuboid

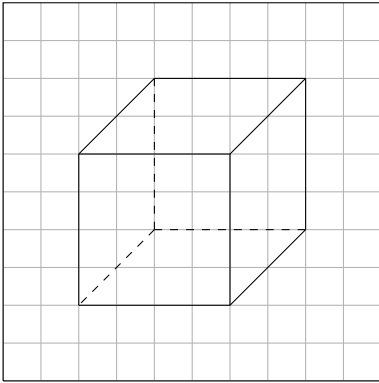


2)

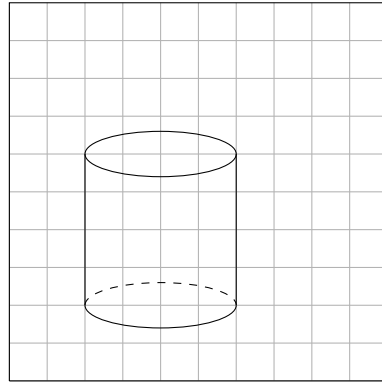
Quick:
5978

Name the geometric shape that is shown.

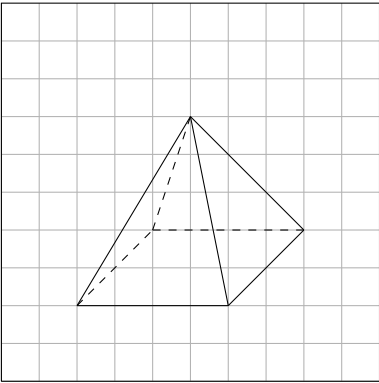
a) Shape: A cube, and a cuboid, too.



b) Shape: A cylinder



c) Shape: A pyramid

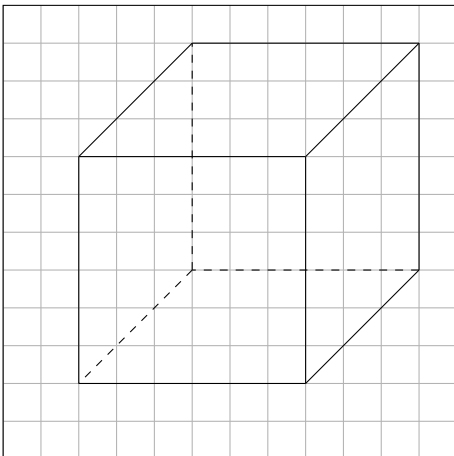


3)

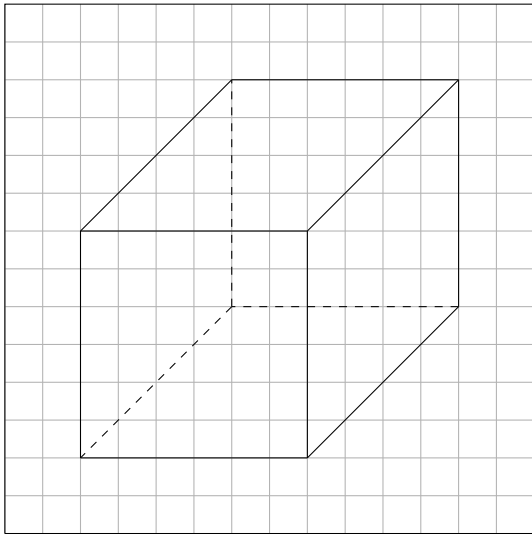
Quick:
5978

Name the geometric shape that is shown.

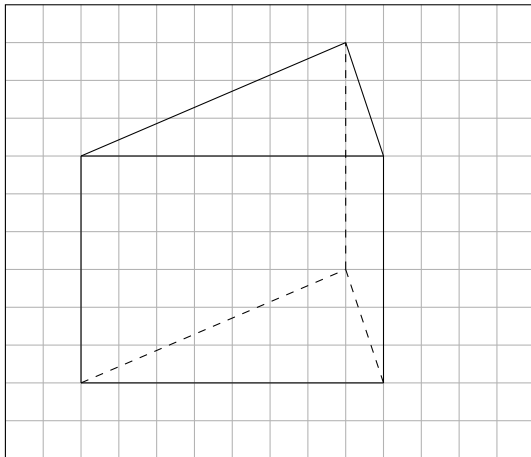
a) Shape: A cube, and a cuboid, too.



b) Shape: A cuboid



c) Shape: A prism

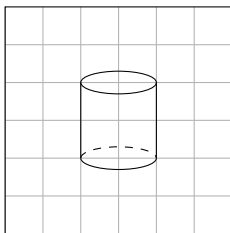


4)

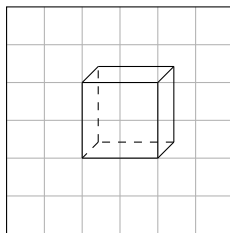
Name the geometric shape that is shown.

Quick:
5978

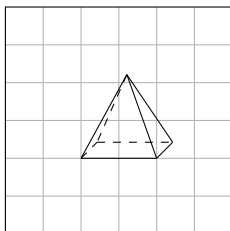
a) Shape: A cylinder



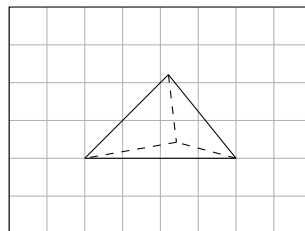
b) Shape: A cube, and a cuboid, too.



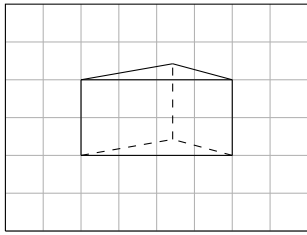
c) Shape: A pyramid



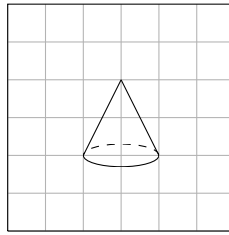
d) Shape: A tetrahedron



e) Shape: A prism



f) Shape: A cone



Good Luck!