

Worksheet

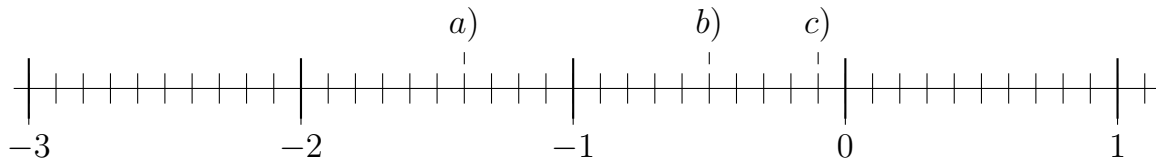
05/27/2018

Free on dw-math.com

Problem quickname: 7110

1)

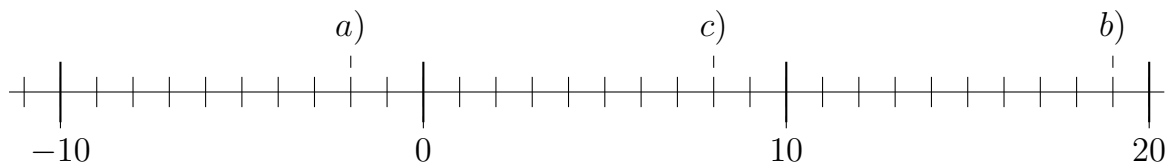
Draw a number line with appropriate scaling and mark the position of each number.

Quick:
7110

a) = -1.4 ; b) = -0.5 ; c) = -0.1

2)

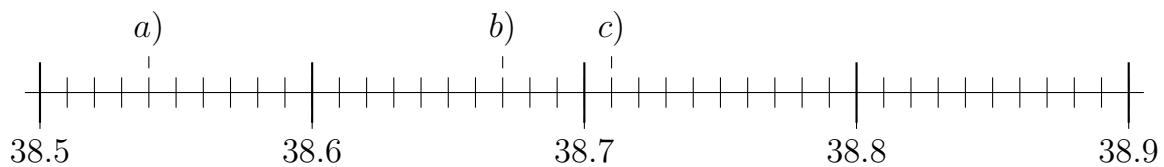
Draw a number line with appropriate scaling and mark the position of each number.

Quick:
7110

a) = -2 ; b) = 19 ; c) = 8

3)

Draw a number line with appropriate scaling and mark the position of each number.

Quick:
7110

a) = 38.54 ; b) = 38.67 ; c) = 38.71

4)

Draw a number line with appropriate scaling and mark the position of each number.

Quick:
7110

$$a) = -2.9 ; b) = -0.8 ; c) = -1.5$$

Good Luck!