

Worksheet

05/10/2020

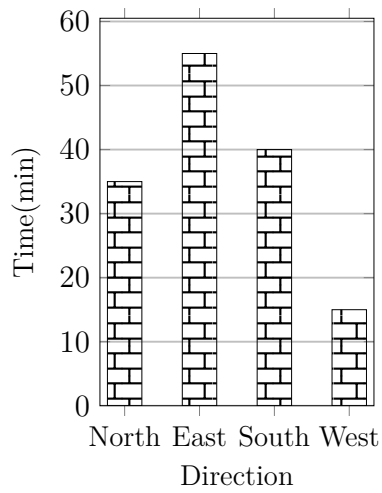
Free on dw-math.com

Problem quickname: 2701

1)

Read the numbers from the diagram to complete the table.

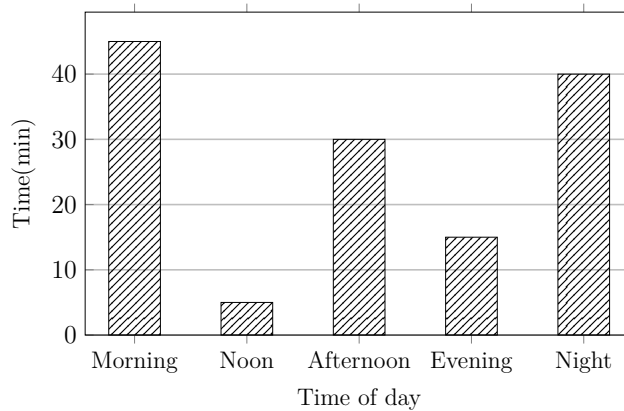
Direction	Time(min)
North	15
East	
South	
West	



2)

Read the numbers from the diagram to complete the table.

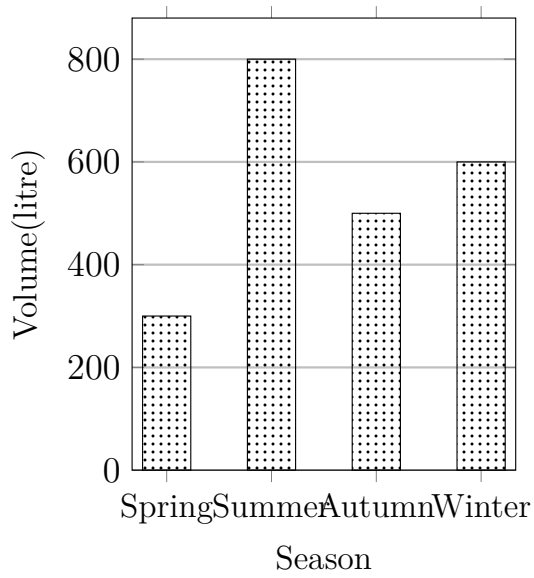
Time of day	Time(min)
Morning	5
Noon	
Afternoon	
Evening	
Night	



3)

Create a table with two columns and headings. then put the values from the bar chart

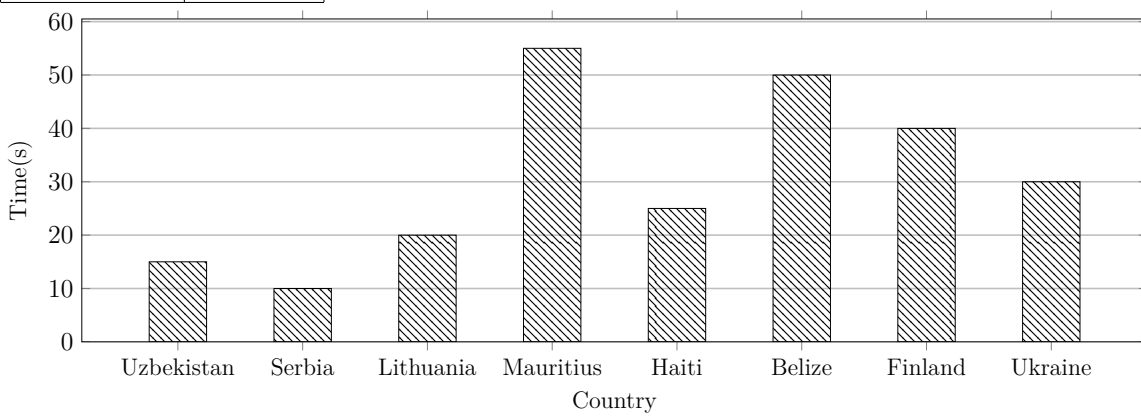
into the table.



4)

Read the numbers from the diagram to complete the table.

Country	Time(s)
Uzbekistan	
Serbia	
Lithuania	
Mauritius	
Haiti	
Belize	
Finland	
Ukraine	



Good Luck!