

Worksheet

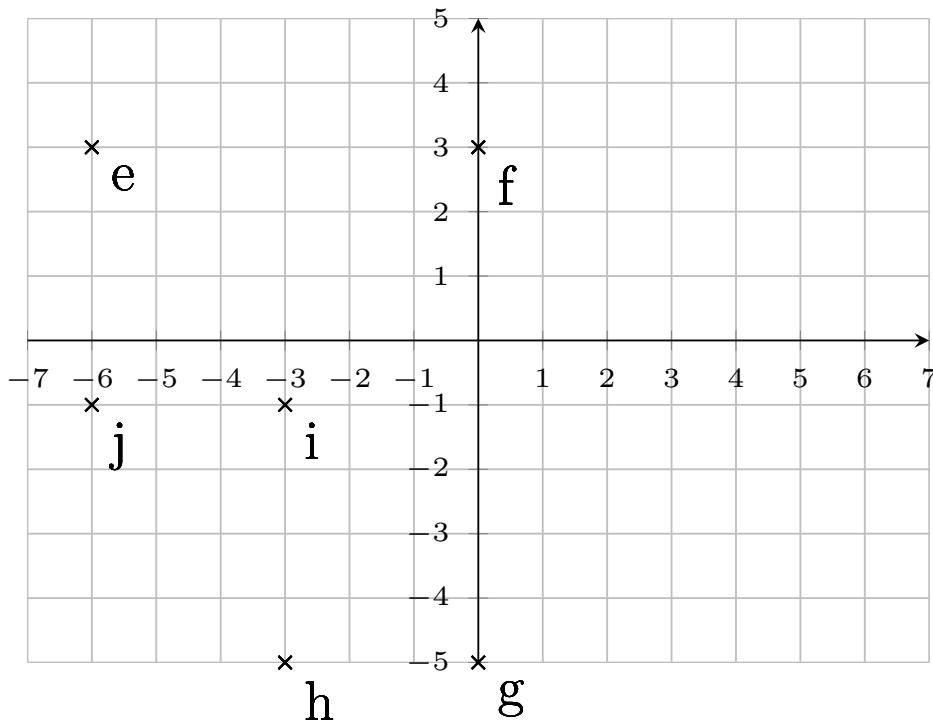
05/12/2019

Free on dw-math.com

Problem quickname: 7812

1)

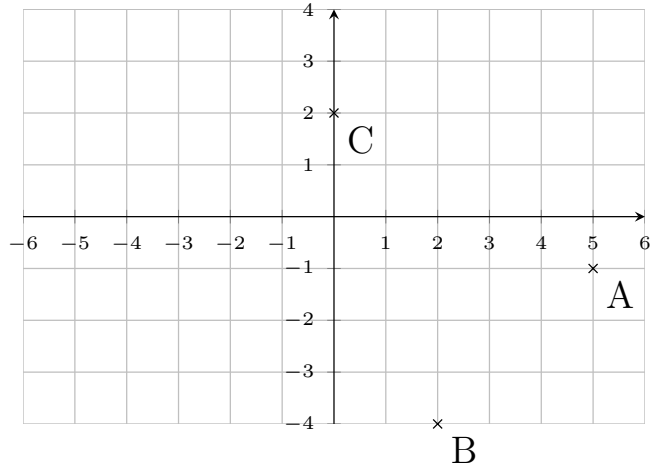
Draw a suitable coordinate plane and mark the points given.

Quick:
7812 $e(-6|3), f(0|3), g(0|-5), h(-3|-5), i(-3|-1), j(-6|-1)$

2)

Quick:
7812

Draw a suitable coordinate plane and mark the points given.

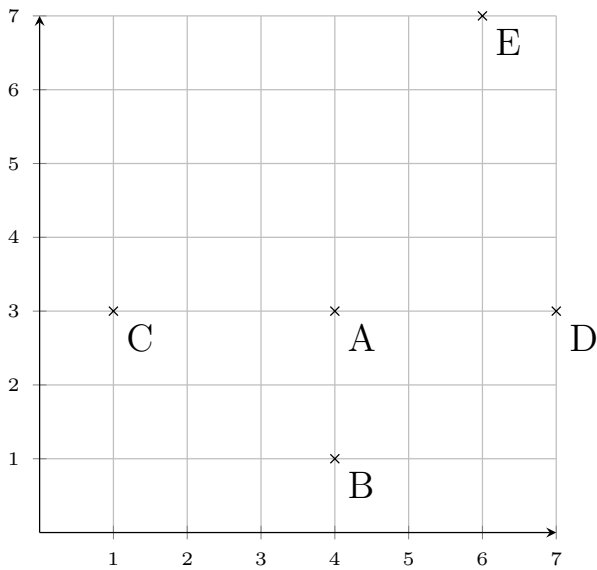


$A(5|-1)$, $B(2|-4)$, $C(0|2)$

3)

Quick:
7812

Draw a suitable coordinate plane and mark the points given.

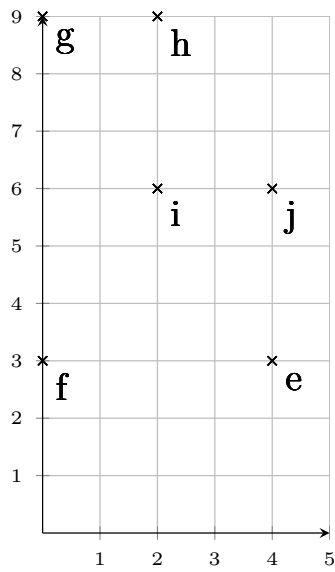


$A(4|3)$, $B(4|1)$, $C(1|3)$, $D(7|3)$, $E(6|7)$

4)

Quick:
7812

Mark the points on the coordinate plane.

 $e(4|3)$, $f(0|3)$, $g(0|9)$, $h(2|9)$, $i(2|6)$, $j(4|6)$

Good Luck!