

Worksheet

05/05/2020


Free on dw-math.com

Problem quickname: 9522


1)

Draw a picture of the three-dimensional geometric shape in perspective.


a) A tetrahedron.




b) A pyramid.



c) A cone.




d) A cuboid.




2)

Draw a picture of the three-dimensional geometric shape in perspective.


a) A cone.




b) A cylinder.



c) A cube.




d) A prism.




3)

Draw a picture of the three-dimensional geometric shape in perspective.

a) A prism.



b) A pyramid.



4)

Draw a picture of the three-dimensional geometric shape in perspective.

a) A prism.

b) A cone.

c) A pyramid.

d) A cuboid.

e) A cylinder.

f) A cube.

Good Luck!