

Worksheet

09/08/2018

Free on dw-math.com

Problem quickname: 9755

1)

Draw the triangle, construct the angle bisectors and draw the incircle.

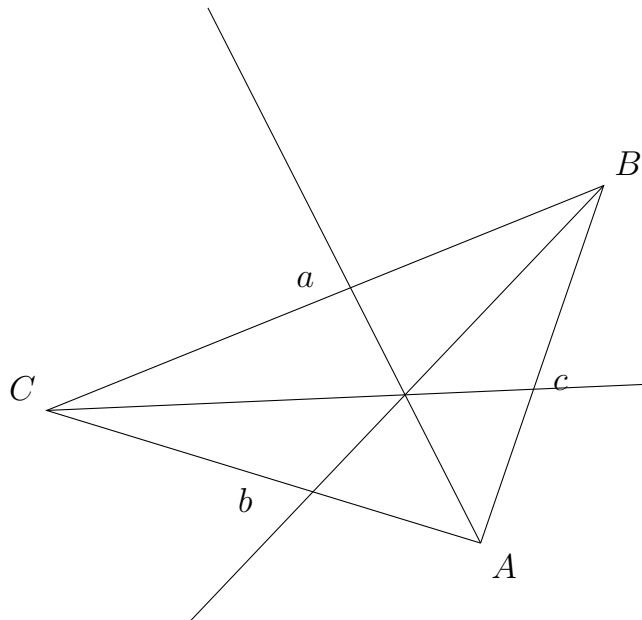
a) $\alpha = 67$ Grad, $c = 6$ cm, $\beta = 56$ Grad

b) $\beta = 70$ Grad, $a = 7$ cm, $\gamma = 55$ Grad

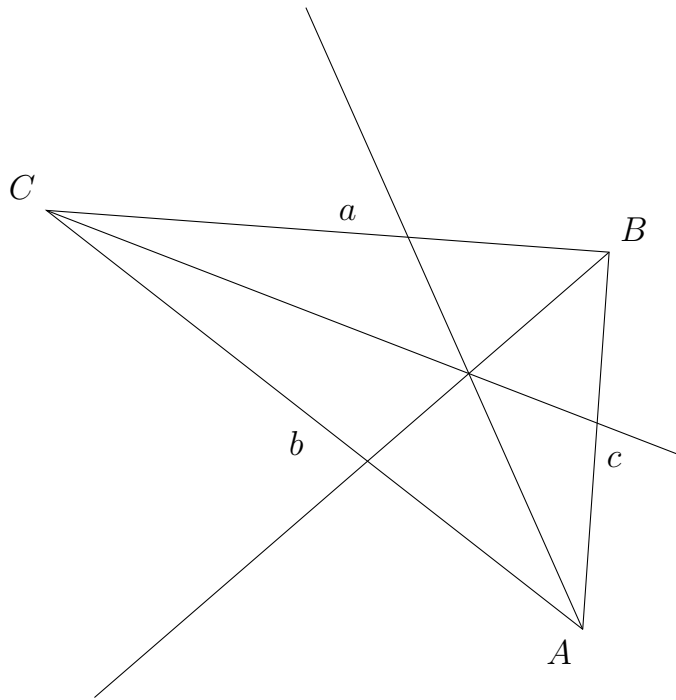
2)

Draw the incircle of this triangle.

a)



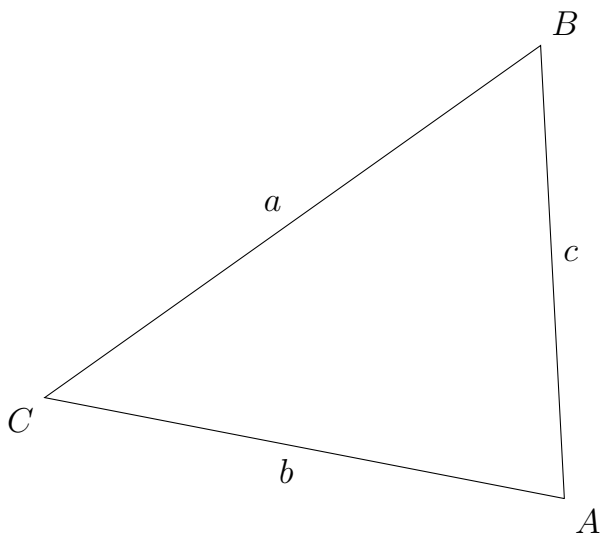
b)



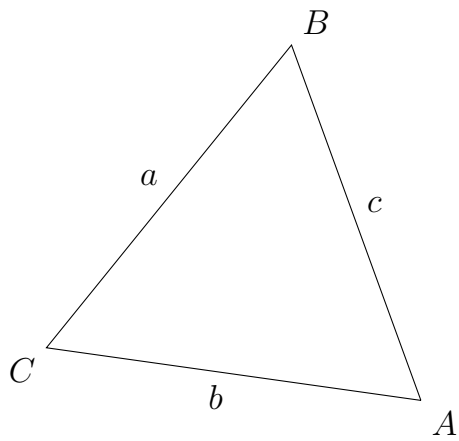
3)

Construct the angle bisectors and draw the incircle of this triangle.

a)



b)



4)

Draw the triangle, construct the angle bisectors and draw the incircle.

a) $\beta = 28$ Grad, $a = 9,9$ cm, $\gamma = 42$ Grad

b) $\beta = 46$ Grad, $a = 5$ cm, $\gamma = 88$ Grad

Good Luck!