

Worksheet

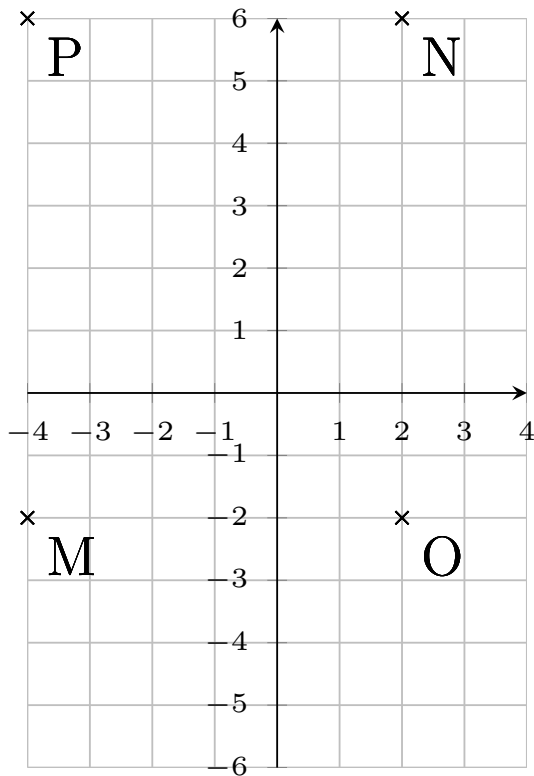
05/12/2019

Free on dw-math.com

Problem quickname: 7812

1)

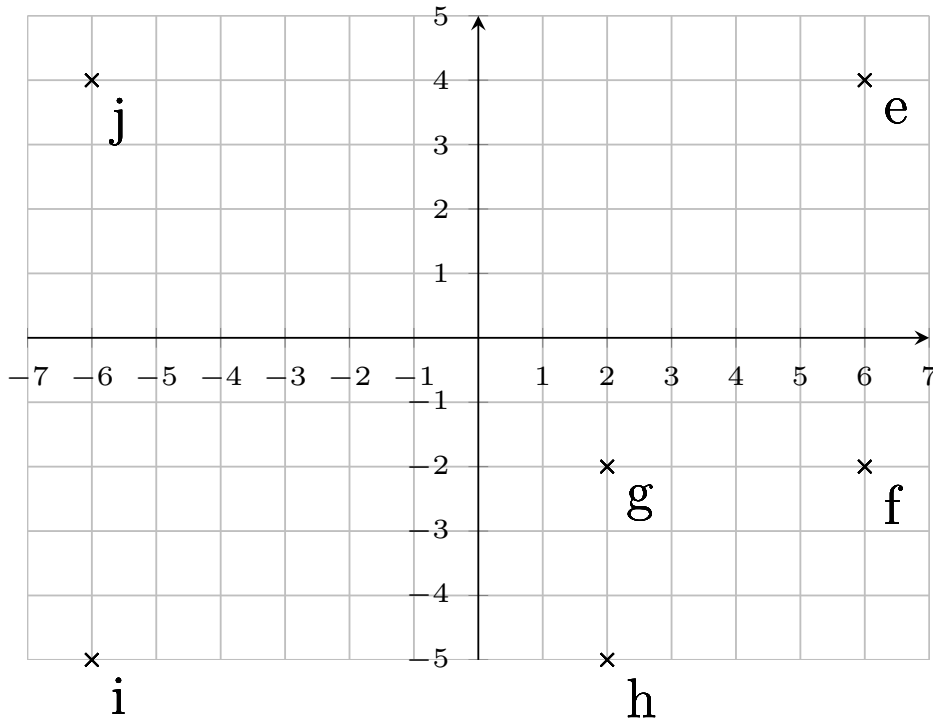
Mark the points on the coordinate plane.

Quick:
7812 $M(-4|-2)$, $N(2|6)$, $O(2|-2)$, $P(-4|6)$

2)

Quick:
7812

Draw a suitable coordinate plane and mark the points given.

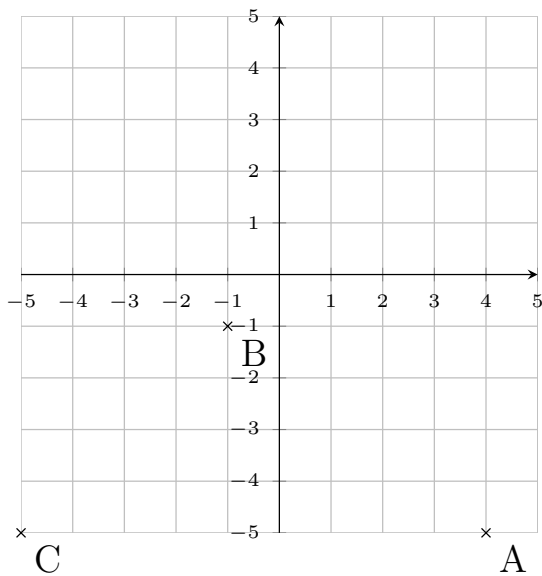


$e(6|4)$, $f(6|-2)$, $g(2|-2)$, $h(2|-5)$, $i(-6|-5)$, $j(-6|4)$

3)

Quick:
7812

Draw a suitable coordinate plane and mark the points given.

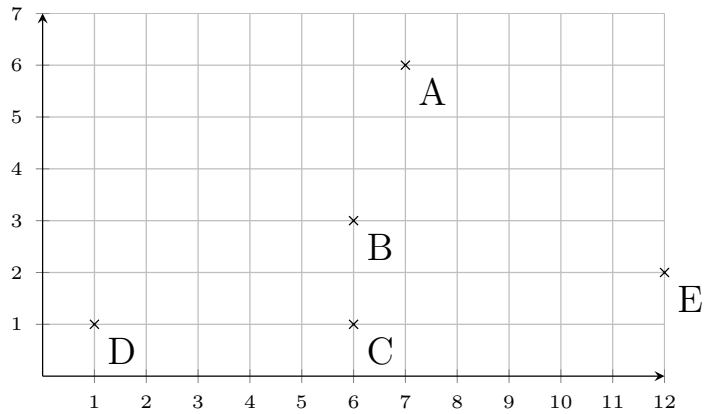


$A(4|-5)$, $B(-1|-1)$, $C(-5|-5)$

4)

Quick:
7812

Draw a suitable coordinate plane and mark the points given.

 $A(7|6)$, $B(6|3)$, $C(6|1)$, $D(1|1)$, $E(12|2)$

Good Luck!