

# Worksheet

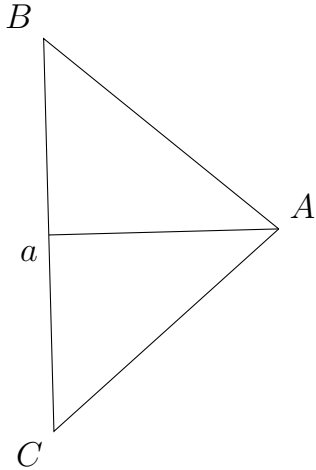
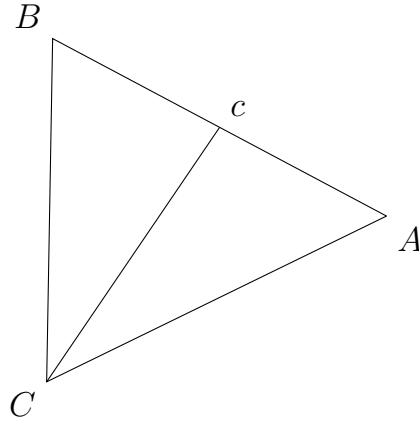
05/19/2020

Free on dw-math.com

Problem quickname: 8101

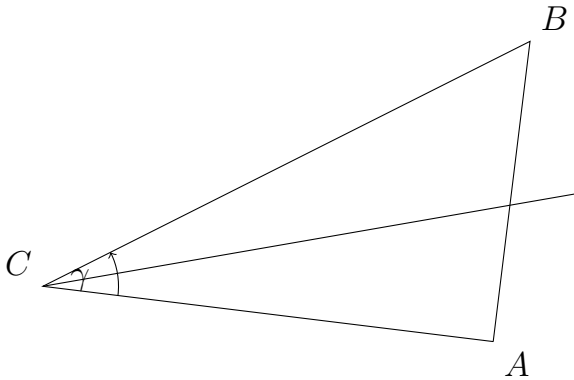
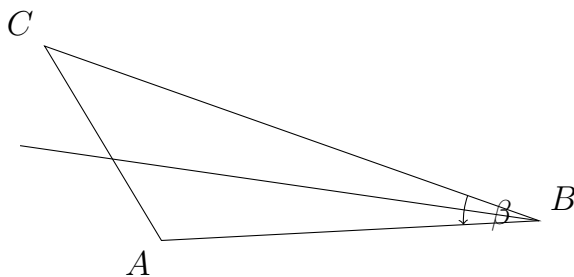
1)

Draw the indicated element of the triangle.

Quick:  
8101a) The median of  $s_a$ :b) The median of  $s_c$ :

2)

Draw the indicated element of the triangle.

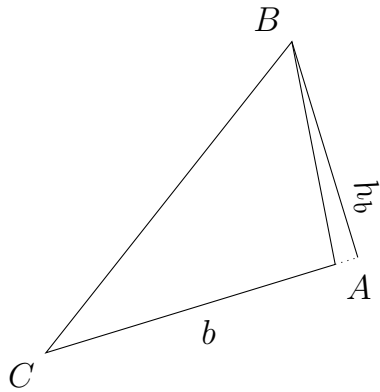
Quick:  
8101a) The angular bisector of  $\gamma$ :b) The angular bisector of  $\beta$ :

3)

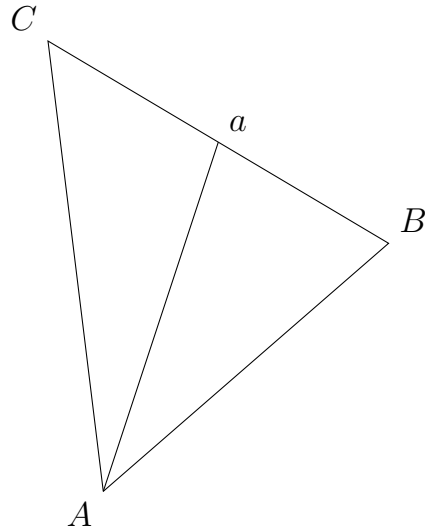
Quick:  
8101

Draw the indicated element of the triangle.

a) The height  $h_b$ :



b) The median of  $s_a$ :

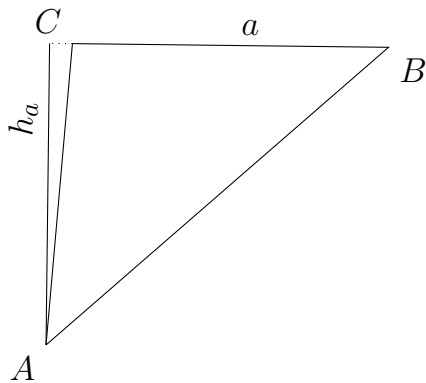


4)

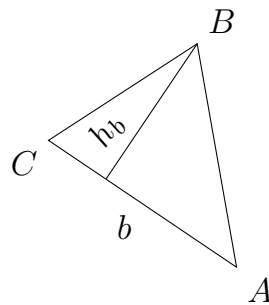
Quick:  
8101

Draw the indicated element of the triangle.

a) The height  $h_a$ :



b) The height  $h_b$ :



Good Luck!