

Worksheet

05/05/2020

Free on dw-math.com

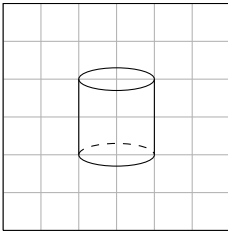
Problem quickname: 9522

1)

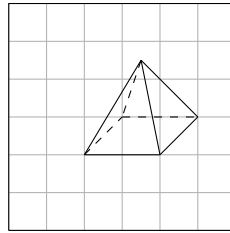
Draw a picture of the three-dimensional geometric shape in perspective.

Quick:
9522

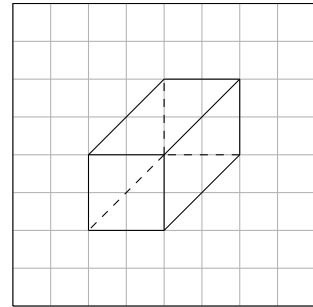
a) A cylinder.



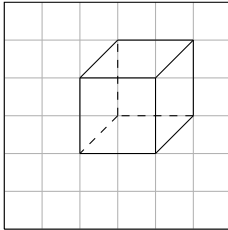
b) A pyramid.



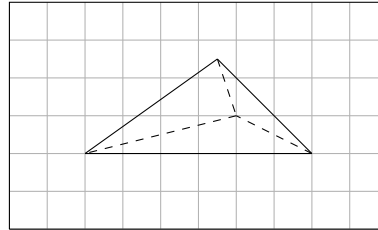
c) A cuboid.



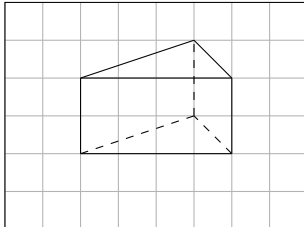
d) A cube.



e) A tetrahedron.



f) A prism.

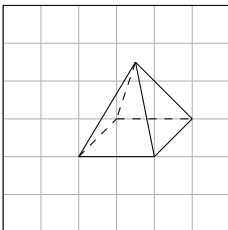


2)

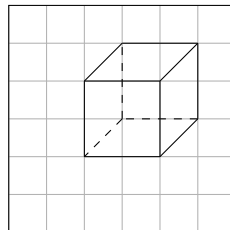
Draw a picture of the three-dimensional geometric shape in perspective.

Quick:
9522

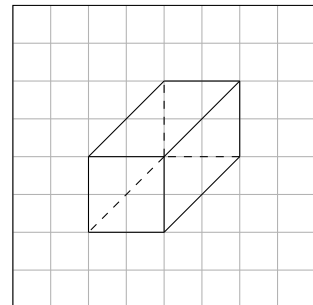
a) A pyramid.



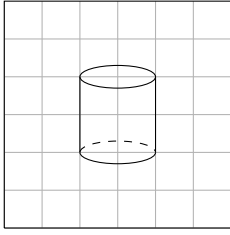
b) A cube.



c) A cuboid.



d) A cylinder.

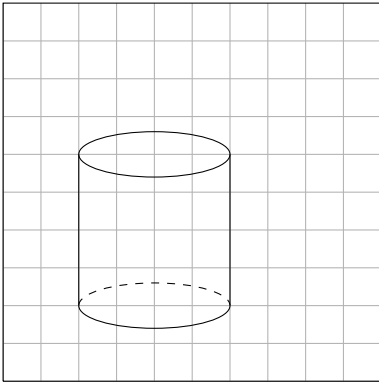


3)

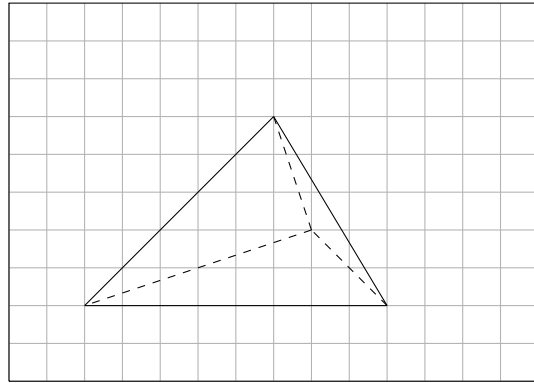
Draw a picture of the three-dimensional geometric shape in perspective.

Quick:
9522

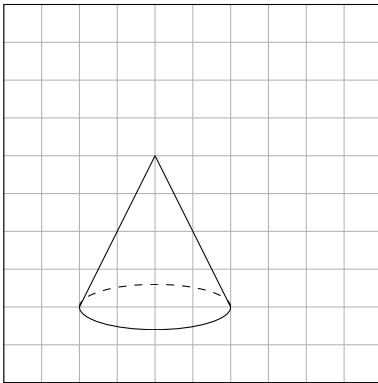
a) A cylinder.



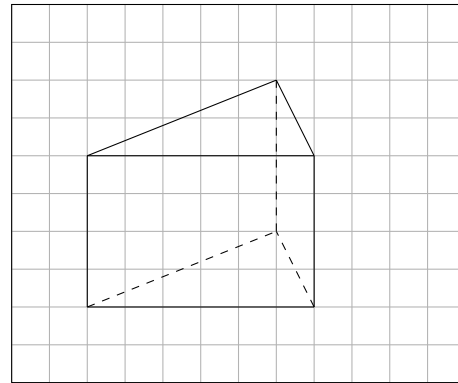
b) A tetrahedron.



c) A cone.



d) A prism.

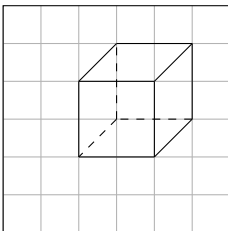


4)

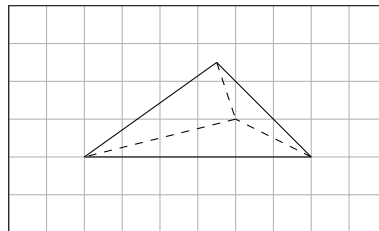
Draw a picture of the three-dimensional geometric shape in perspective.

Quick:
9522

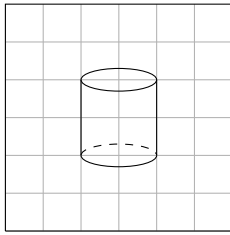
a) A cube.



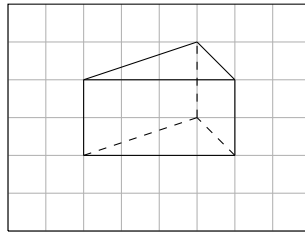
b) A tetrahedron.



c) A cylinder.



d) A prism.



Good Luck!