

Worksheet

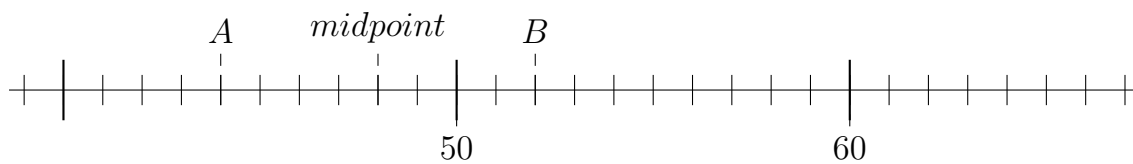
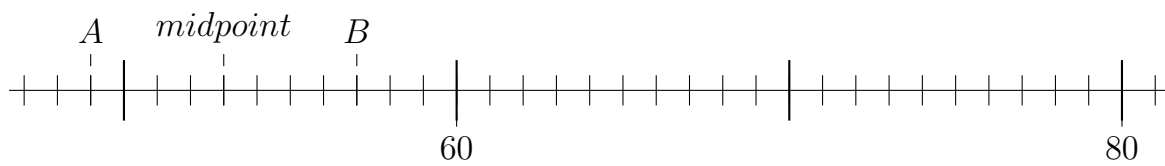
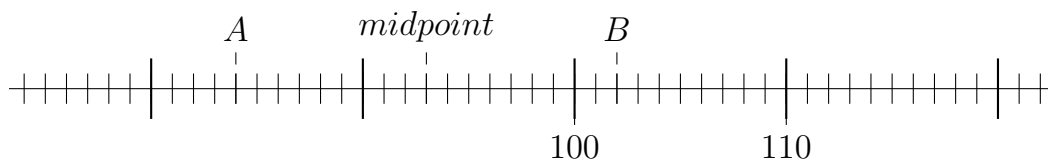
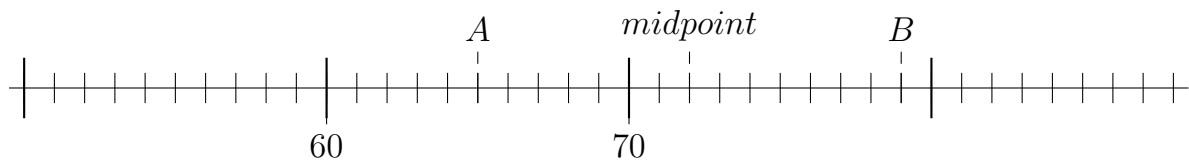
05/25/2018

Free on dw-math.com

Problem quickname: 1901

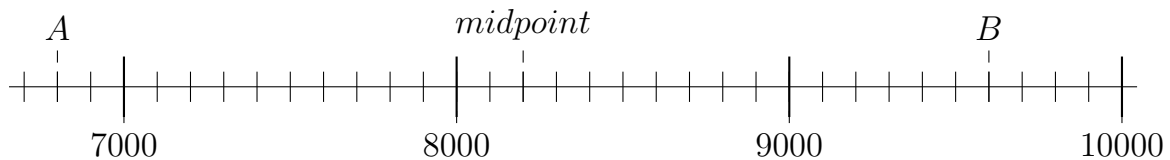
1)

Mark the midpoint of A und B!

Quick:
1901

2)

Mark the midpoint of A und B! Identify the number at positions A, B and the midpoint.

Quick:
1901

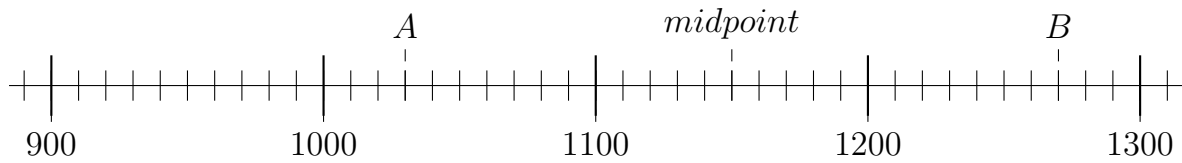
A= 6800; B= 9600; midpoint = 8200

3)

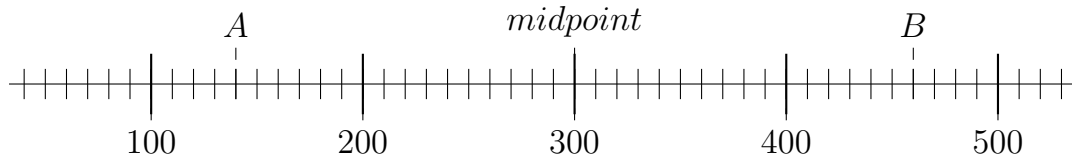
Mark the midpoint of A und B! Identify the number at positions A, B and the

Quick:
1901

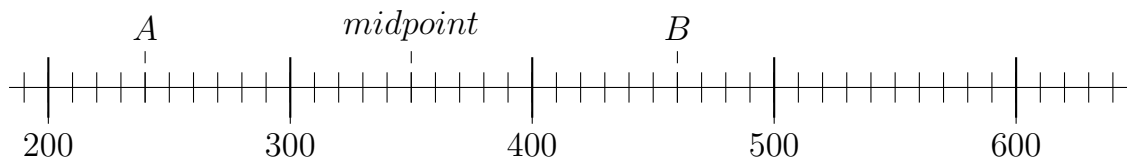
midpoint.



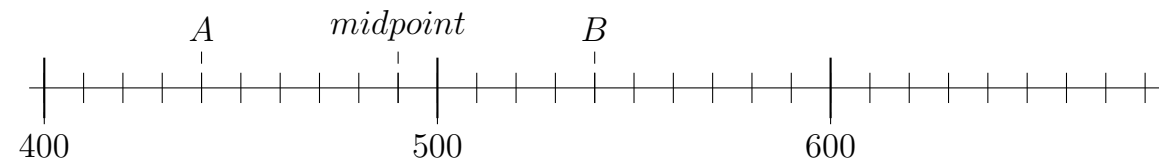
$A = 1030$; $B = 1270$; midpoint = 1150



$A = 140$; $B = 460$; midpoint = 300



$A = 240$; $B = 460$; midpoint = 350

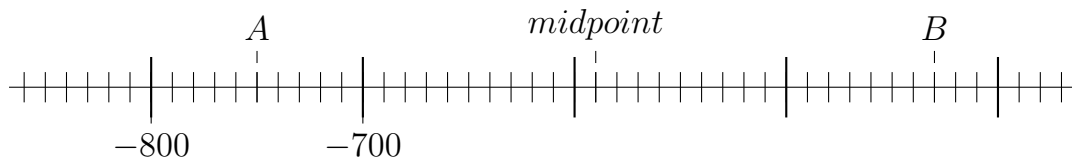


$A = 440$; $B = 540$; midpoint = 490

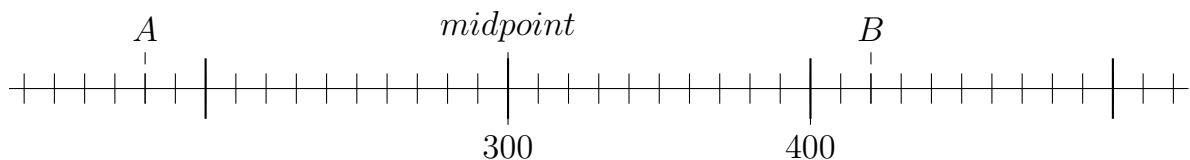
4)

Mark the midpoint of A und B! Identify the number at positions A, B and the midpoint.

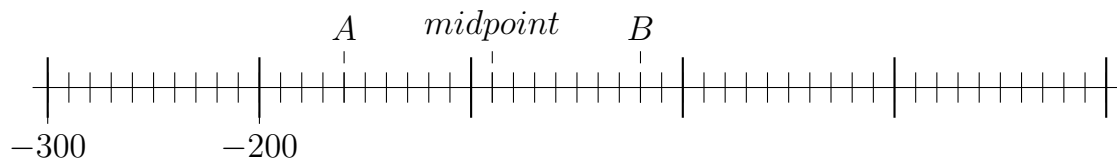
Quick:
1901



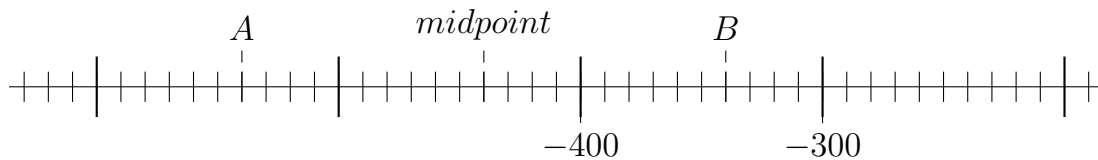
$A = -750$; $B = -430$; midpoint = -590



$A = 180$; $B = 420$; midpoint = 300



$A = -160$; $B = -20$; midpoint = -90



$A = -540$; $B = -340$; midpoint = -440

Good Luck!