

Worksheet

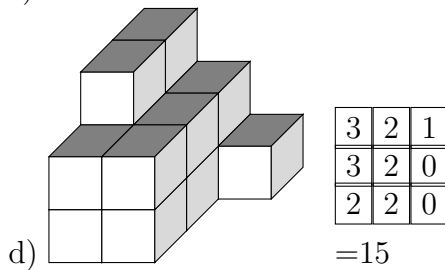
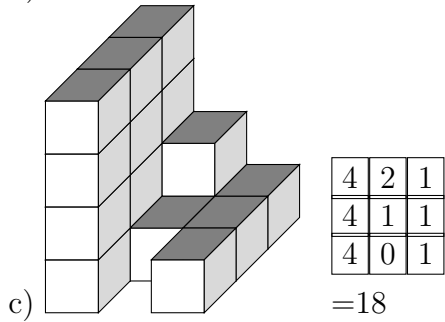
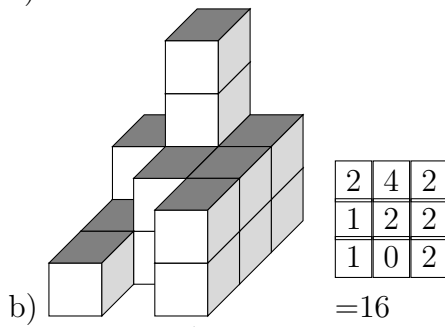
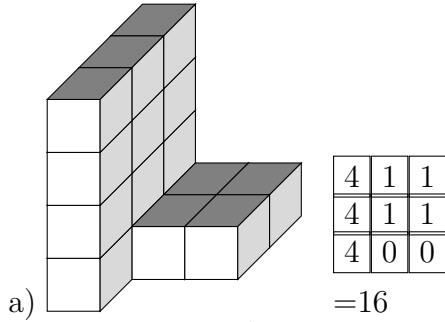
07/31/2018

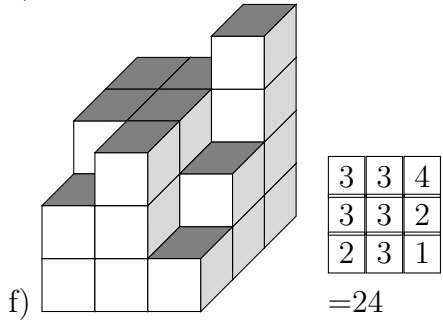
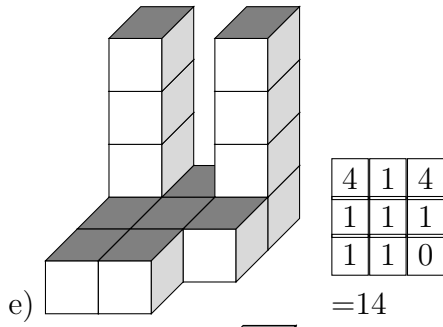
Free on dw-math.com

Problem quickname: 3555

1)

How many cubes is this building made of?

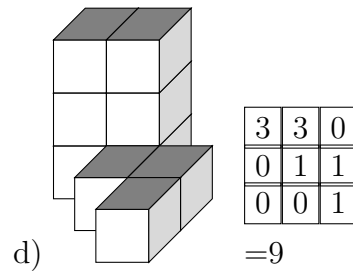
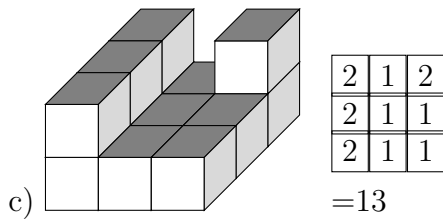
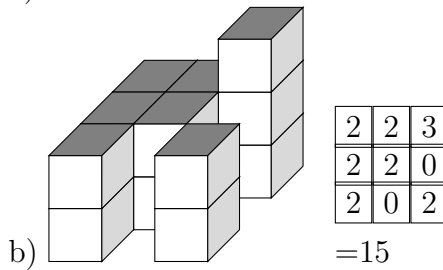
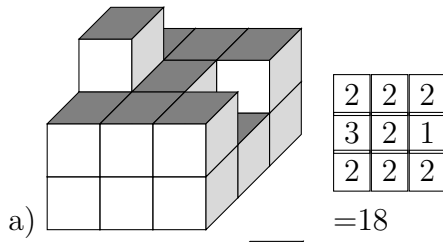
Quick:
3555



2)

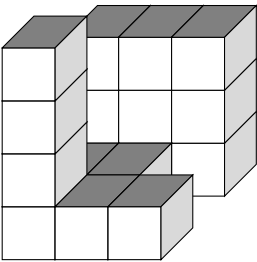
How many cubes is this building made of?

Quick:
3555



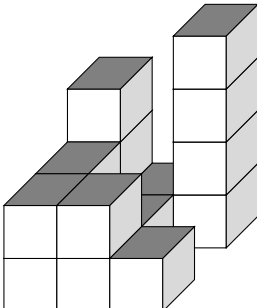
3)

How many cubes is this building made of?

a) 

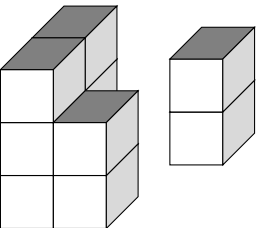
3	3	3
1	1	0
4	1	1

=17

b) 

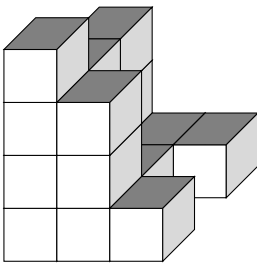
3	1	4
2	1	0
2	2	1

=16

c) 

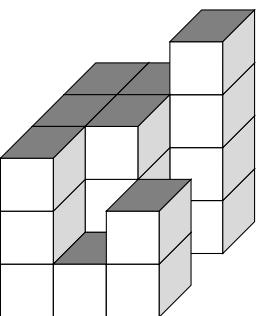
0	0	2
3	0	0
3	2	0

=10

d) 

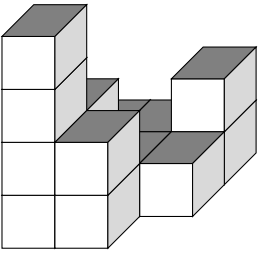
3	1	1
3	1	0
4	3	1

=17

e) 

3	3	4
3	3	0
3	1	2

=22

f) 

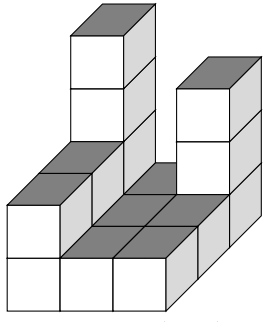
1	1	2
2	1	1
4	2	0

=14

4)

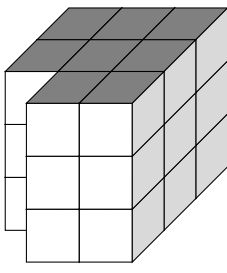
How many cubes is this building made of?

Quick:
3555

a) 

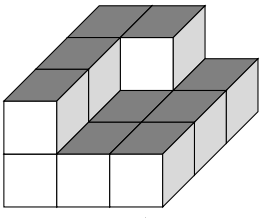
4	1	3
2	1	1
2	1	1

=16

b) 

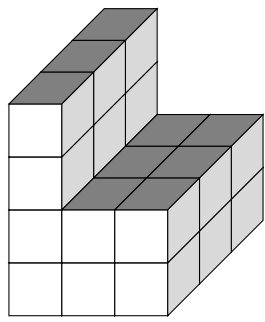
3	3	3
3	3	3
0	3	3

=24

c) 

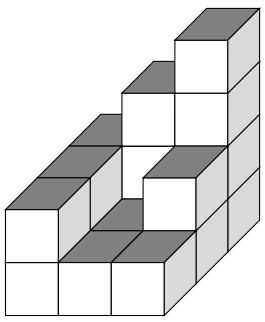
2	2	1
2	1	1
2	1	1

=13

d) 

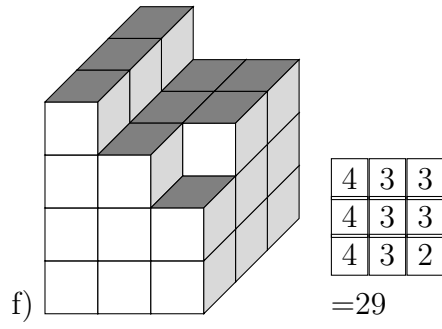
4	2	2
4	2	2
4	2	2

=24

e) 

2	3	4
2	1	2
2	1	1

=18



Good Luck!