

Worksheet

01/23/2019



Free on dw-math.com


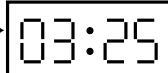
Problem quickname: 5977

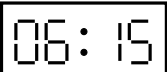
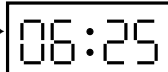
1)

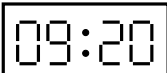
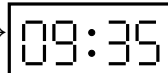
What time was shown on the display before the period of time indicated had passed?

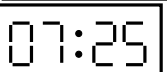
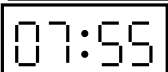
Quick:
5977

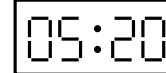
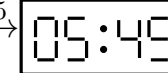
a)  $\xrightarrow{+0:20}$ 

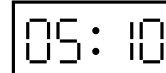
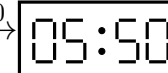
c)  $\xrightarrow{+0:10}$ 

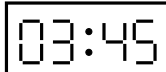
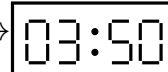
e)  $\xrightarrow{+0:10}$ 

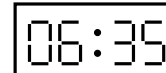
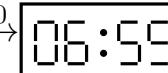
g)  $\xrightarrow{+0:15}$ 

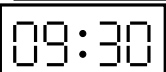
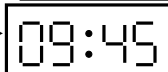
i)  $\xrightarrow{+0:30}$ 

b)  $\xrightarrow{+0:25}$ 

d)  $\xrightarrow{+0:40}$ 

f)  $\xrightarrow{+0:05}$ 

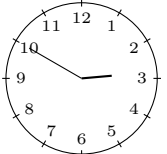
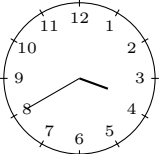
h)  $\xrightarrow{+0:20}$ 

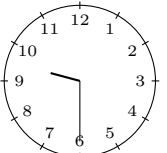
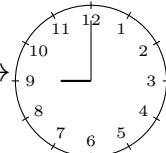
j)  $\xrightarrow{+0:15}$ 

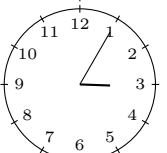
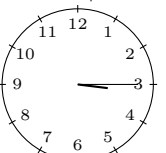
2)

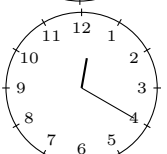
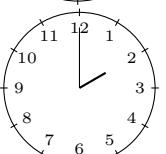
Draw the clock's hands to show the correct time before the period of time indicated had passed.

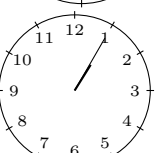
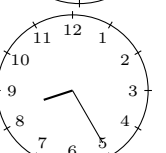
Quick:
5977

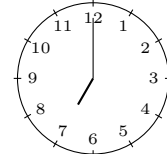
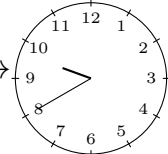
a)  $\xrightarrow{+0:50}$ 

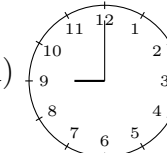
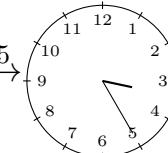
c)  $\xrightarrow{+11:30}$ 

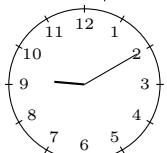
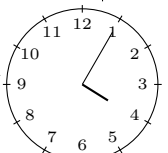
e)  $\xrightarrow{+0:10}$ 

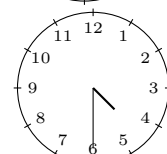
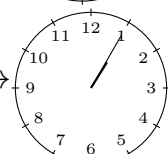
g)  $\xrightarrow{+1:40}$ 

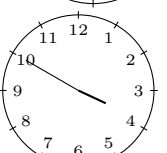
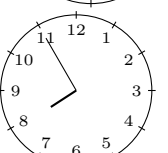
i)  $\xrightarrow{+7:20}$ 

b)  $\xrightarrow{+2:40}$ 

d)  $\xrightarrow{+6:25}$ 

f)  $\xrightarrow{+6:55}$ 

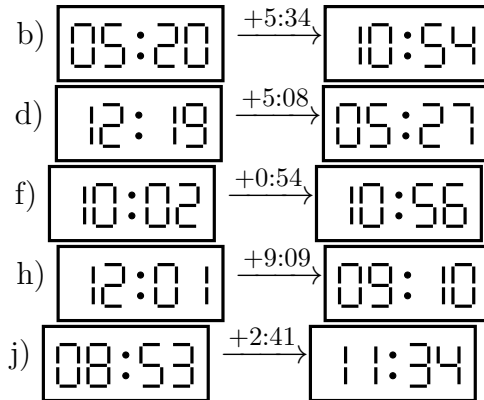
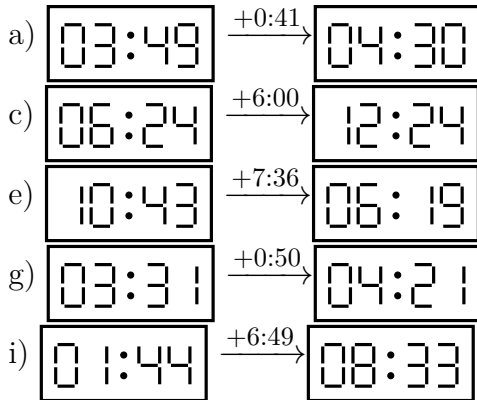
h)  $\xrightarrow{+8:35}$ 

j)  $\xrightarrow{+4:05}$ 

3)

Quick:
5977


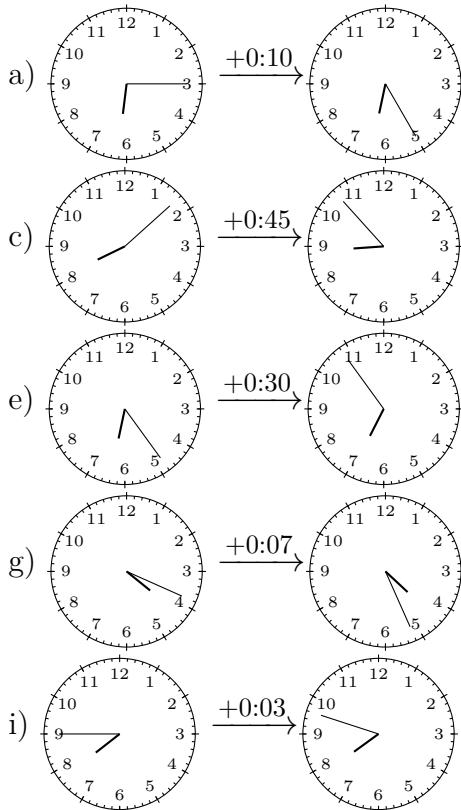
What time was shown on the display before the period of time indicated had passed?



4)

Quick:
5977

What time was shown on the display before the period of time indicated had passed?



Good Luck!