

Worksheet

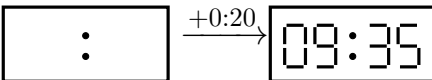
01/23/2019

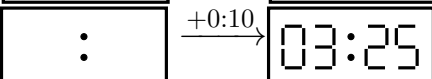
Free on dw-math.com

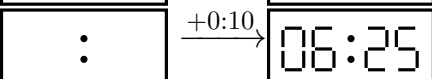
Problem quickname: 5977

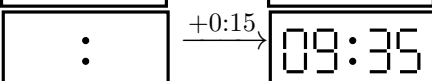
1)

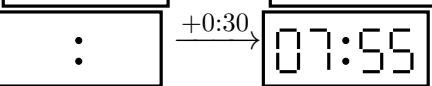
What time was shown on the display before the period of time indicated had passed?

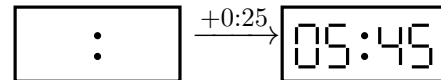
a) 

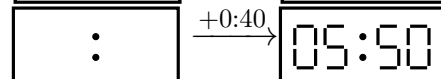
c) 

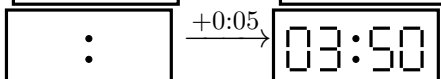
e) 

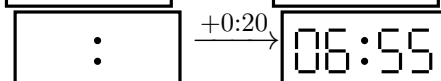
g) 

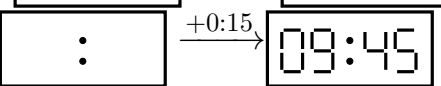
i) 

b) 

d) 

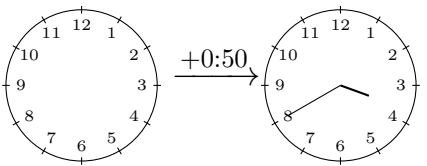
f) 

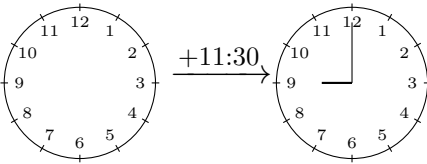
h) 

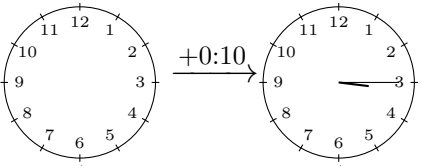
j) 

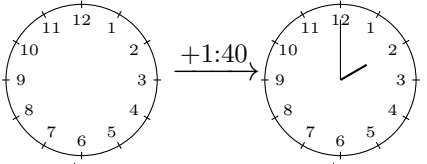
2)

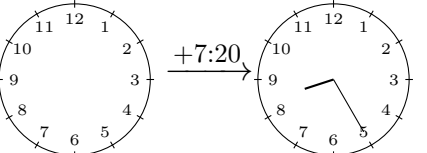
Draw the clock's hands to show the correct time before the period of time indicated had passed.

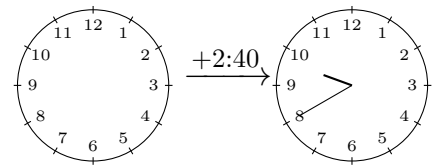
a) 

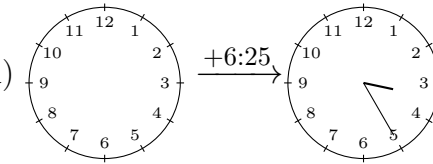
c) 

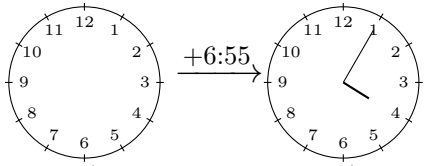
e) 

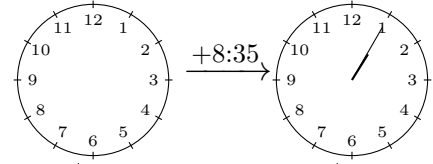
g) 

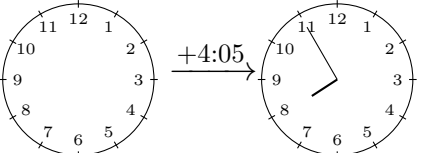
i) 

b) 

d) 

f) 

h) 

j) 

3)

What time was shown on the display before the period of time indicated had passed?

a) $\xrightarrow{+0:41}$

c) $\xrightarrow{+6:00}$

e) $\xrightarrow{+7:36}$

g) $\xrightarrow{+0:50}$

i) $\xrightarrow{+6:49}$

b) $\xrightarrow{+5:34}$

d) $\xrightarrow{+5:08}$

f) $\xrightarrow{+0:54}$

h) $\xrightarrow{+9:09}$

j) $\xrightarrow{+2:41}$

4)

What time was shown on the display before the period of time indicated had passed?

a) $\xrightarrow{+0:10}$

c) $\xrightarrow{+0:45}$

e) $\xrightarrow{+0:30}$

g) $\xrightarrow{+0:07}$

i) $\xrightarrow{+0:03}$

b) $\xrightarrow{+0:04}$

d) $\xrightarrow{+0:19}$

f) $\xrightarrow{+0:08}$

h) $\xrightarrow{+0:26}$

j) $\xrightarrow{+0:13}$

Good Luck!