

Worksheet

07/21/2019

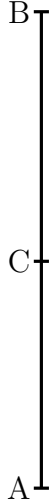
Free on dw-math.com

Problem quickname: 7246

1)

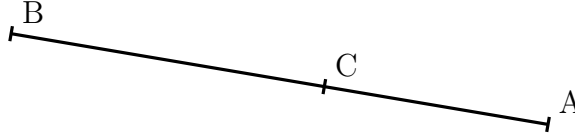
Measure the length of the line segment indicated exactly to the millimetre.

a)




Length of \overline{AC} :

b)



Length of \overline{AC} :

c)



Length of \overline{CB} :

d)




Length of \overline{AC} :

2)

Measure the length of the line segment indicated exactly to the millimetre.

a)

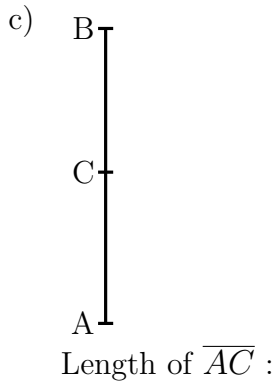


Length of \overline{CB} :

b)

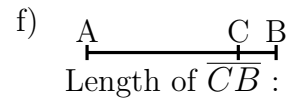
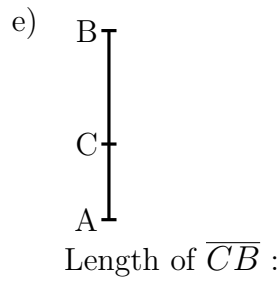
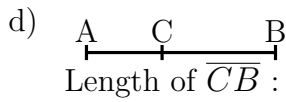
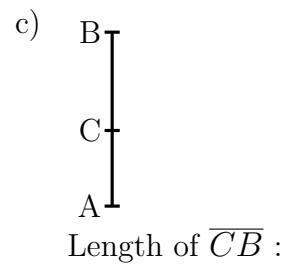
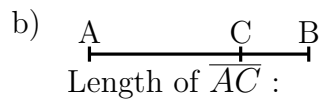
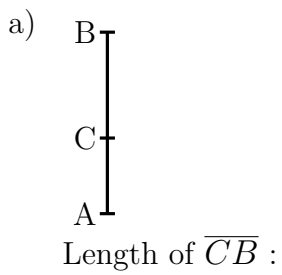


Length of \overline{AC} :



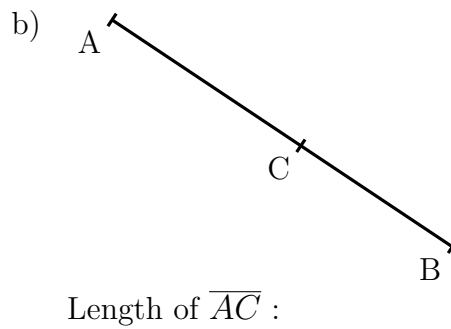
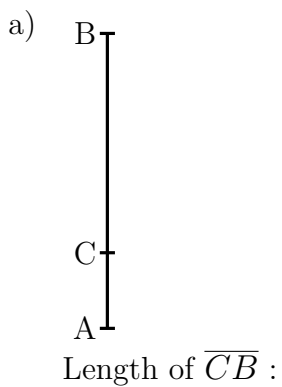
3)

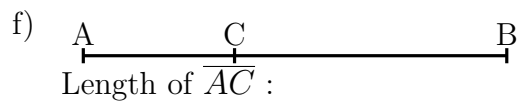
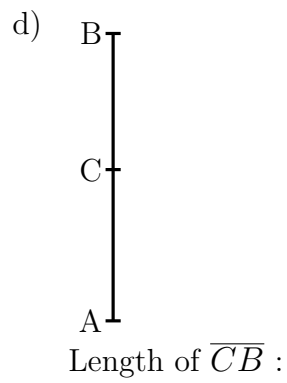
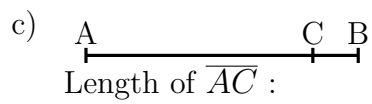
Measure the length of the line segment indicated exactly to the millimetre.



4)

Measure the length of the line segment indicated exactly to the millimetre.





Good Luck!