

Worksheet

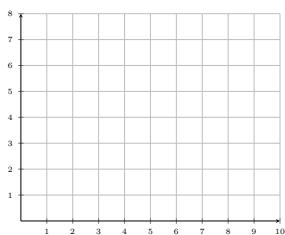
05/12/2019

Free on dw-math.com

Problem quickname: 7975

1)

Mark the points on the coordinate plane. Connect the points with straight lines so that they form a closed shape.



A(8|1), B(8|5), C(2|7), D(2|3)

2)

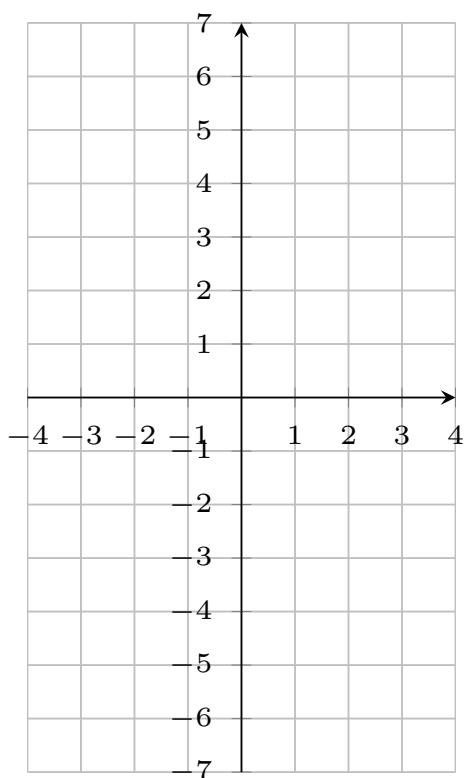
Draw a suitable coordinate plane and mark the points given. Connect the points with straight lines so that they form a closed shape.

A(7|6), B(1|6), C(1|2), D(3|4), E(5|4)

3)

Mark the points on the coordinate plane. Connect the points with straight lines so that

they form a closed shape.

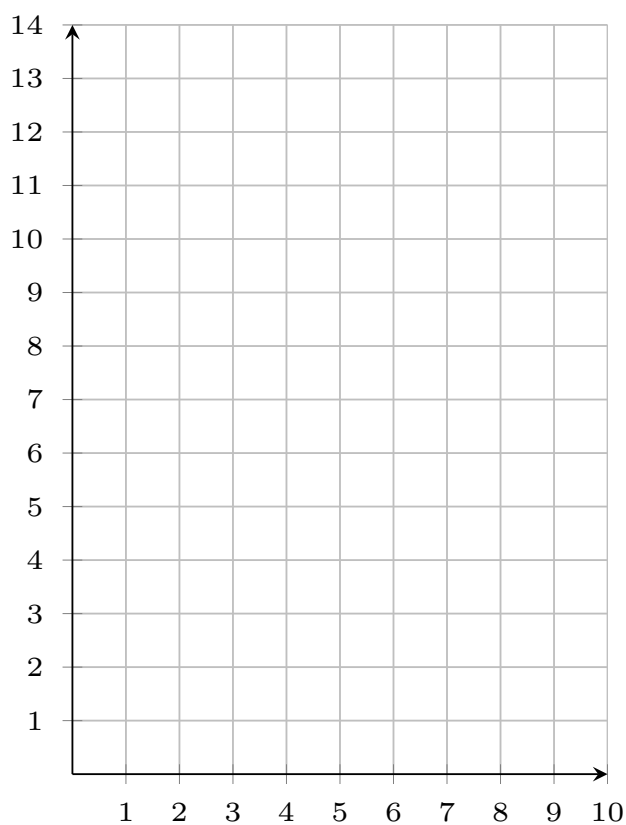


A(-2|2), B(2|2), C(2|0), D(4|0), E(4|-4), F(-2|-4)

4)

Mark the points on the coordinate plane. Connect the points with straight lines so that

they form a closed shape.



A(1|9), B(1|11), C(3|11), D(3|13), E(7|13), F(7|7), G(3|7), H(3|9)

Good Luck!