

# Worksheet

07/14/2019

Free on dw-math.com

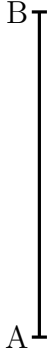
Problem quickname: 9230

1)

Measure the length of the line segment exactly to the millimetre.

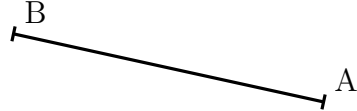
Quick:  
9230

a)



Length of line segment: 4.3cm

b)



Length of line segment: 4.2cm

c)



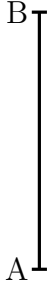
Length of line segment: 4.2cm

2)

Measure the length of the line segment exactly to the millimetre.


Quick:  
9230

a)




Length of line segment: 3.4cm

b)




Length of line segment: 4.8cm

c)

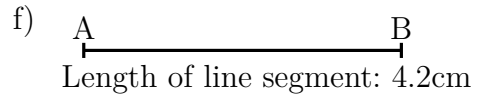
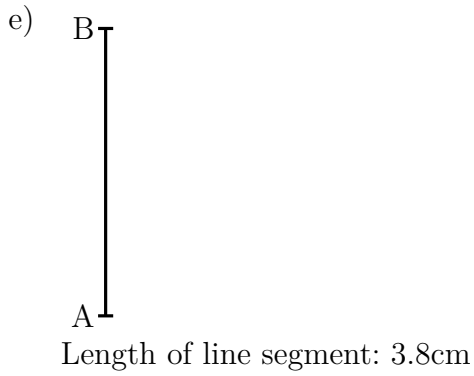


Length of line segment: 3.6cm

d)



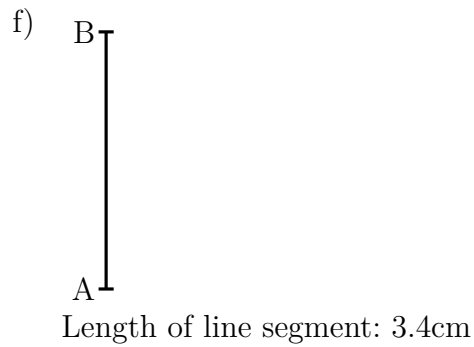
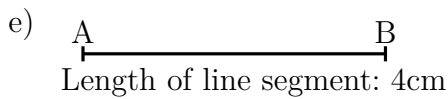
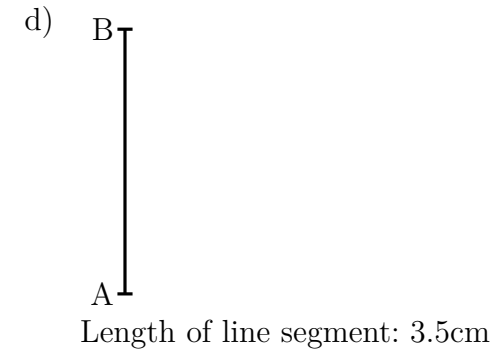
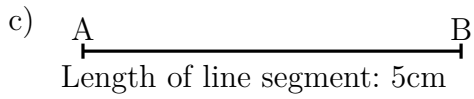
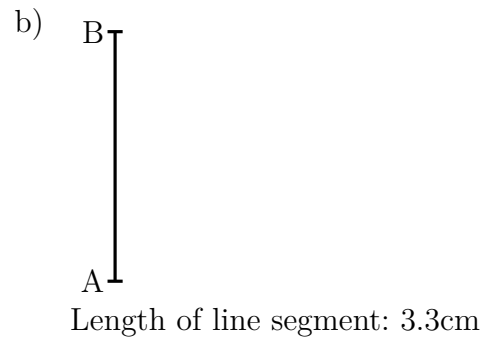
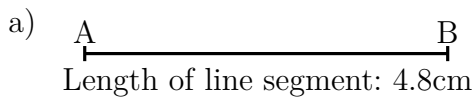
Length of line segment: 4.3cm



3)

Measure the length of the line segment exactly to the millimetre.

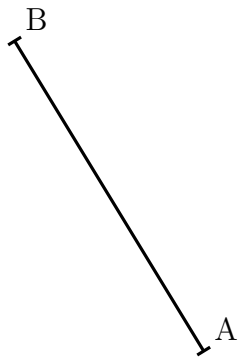
Quick:  
9230



4)

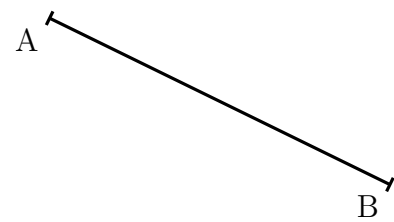
Measure the length of the line segment exactly to the millimetre.

a)



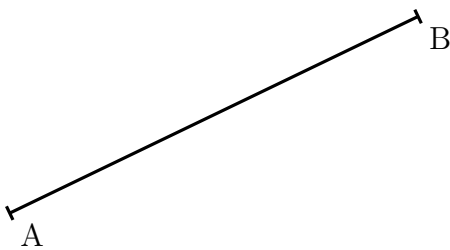
Length of line segment: 4.8cm

c)



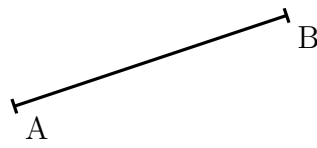
Length of line segment: 5cm

e)



Length of line segment: 6cm

b)



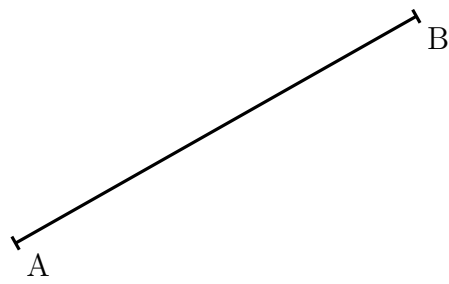
Length of line segment: 3.8cm

d)



Length of line segment: 5cm

f)



Length of line segment: 6.1cm

Good Luck!