

Worksheet

05/12/2020

Free on dw-math.com

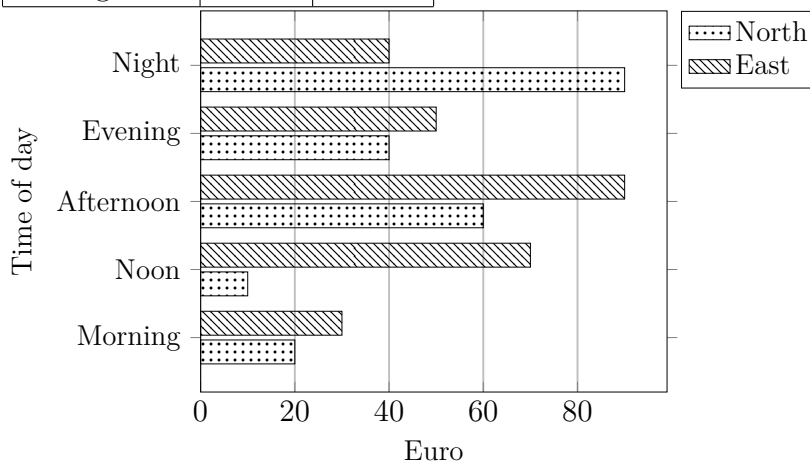
Problem quickname: 2802

1)

Read the numbers from the diagram to complete the table.

Quick:
2802

Time of day	Amount(Euro)	
	North	East
Morning	20	30
Noon	10	70
Afternoon	60	90
Evening	40	50
Night	90	40

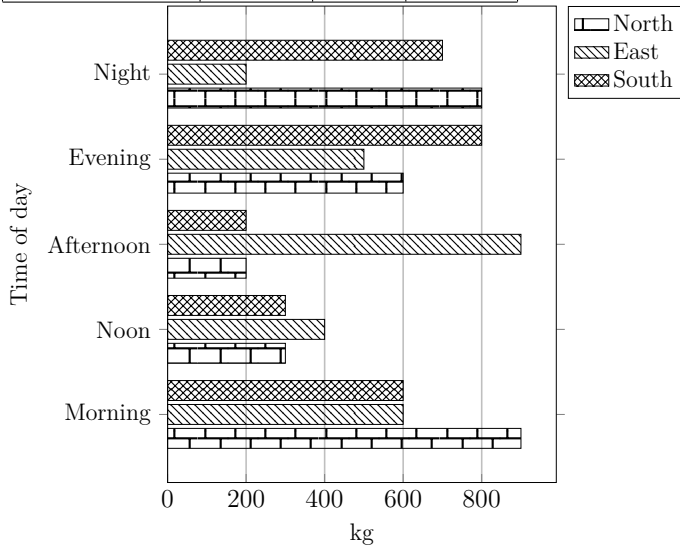


2)

Quick:
2802

Read the numbers from the diagram to complete the table.

Time of day	Weight (kg)		
	North	East	South
Morning	900	600	600
Noon	300	400	300
Afternoon	200	900	200
Evening	600	500	800
Night	800	200	700

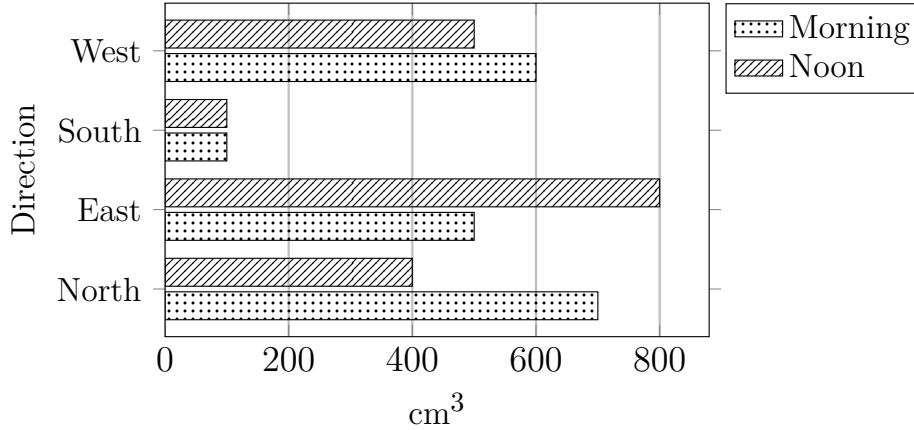


3)

Quick:
2802

Create a table with headings. then put the values from the bar chart into the table.

Direction	Volume(cm^3)	
	Morning	Noon
North	700	400
East	500	800
South	100	100
West	600	500

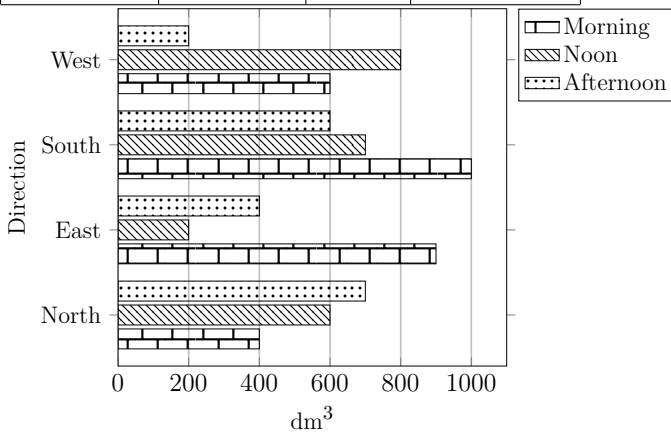


4)

Quick:
2802

Read the numbers from the diagram to complete the table.

Direction	Volume(dm^3)		
	Morning	Noon	Afternoon
North	400	600	700
East	900	200	400
South	1000	700	600
West	600	800	200



Good Luck!