

# Worksheet

11/16/2018

Free on dw-math.com

Problem quickname: 5329

1)

How much time has passed between the time shown on the left clock and the time shown on the right clock?

Quick:  
5329

a)  $\begin{array}{|c|} \hline 01:09 \\ \hline \end{array} \xrightarrow{+8:58} \begin{array}{|c|} \hline 10:07 \\ \hline \end{array}$

c)  $\begin{array}{|c|} \hline 04:34 \\ \hline \end{array} \xrightarrow{+4:40} \begin{array}{|c|} \hline 09:14 \\ \hline \end{array}$

e)  $\begin{array}{|c|} \hline 05:17 \\ \hline \end{array} \xrightarrow{+1:08} \begin{array}{|c|} \hline 06:25 \\ \hline \end{array}$

g)  $\begin{array}{|c|} \hline 04:55 \\ \hline \end{array} \xrightarrow{+9:28} \begin{array}{|c|} \hline 02:23 \\ \hline \end{array}$

i)  $\begin{array}{|c|} \hline 01:51 \\ \hline \end{array} \xrightarrow{+10:08} \begin{array}{|c|} \hline 11:59 \\ \hline \end{array}$

b)  $\begin{array}{|c|} \hline 05:24 \\ \hline \end{array} \xrightarrow{+2:35} \begin{array}{|c|} \hline 07:59 \\ \hline \end{array}$

d)  $\begin{array}{|c|} \hline 01:27 \\ \hline \end{array} \xrightarrow{+4:41} \begin{array}{|c|} \hline 06:08 \\ \hline \end{array}$

f)  $\begin{array}{|c|} \hline 08:27 \\ \hline \end{array} \xrightarrow{+7:51} \begin{array}{|c|} \hline 04:18 \\ \hline \end{array}$

h)  $\begin{array}{|c|} \hline 02:54 \\ \hline \end{array} \xrightarrow{+7:54} \begin{array}{|c|} \hline 10:48 \\ \hline \end{array}$

j)  $\begin{array}{|c|} \hline 04:57 \\ \hline \end{array} \xrightarrow{+9:11} \begin{array}{|c|} \hline 02:08 \\ \hline \end{array}$

2)

How much time has passed between the time shown on the left clock and the time shown on the right clock?

Quick:  
5329

a)  $\begin{array}{|c|} \hline 10:05 \\ \hline \end{array} \xrightarrow{+0:23} \begin{array}{|c|} \hline 10:28 \\ \hline \end{array}$

c)  $\begin{array}{|c|} \hline 05:40 \\ \hline \end{array} \xrightarrow{+0:11} \begin{array}{|c|} \hline 05:51 \\ \hline \end{array}$

e)  $\begin{array}{|c|} \hline 08:50 \\ \hline \end{array} \xrightarrow{+0:06} \begin{array}{|c|} \hline 08:56 \\ \hline \end{array}$

g)  $\begin{array}{|c|} \hline 01:03 \\ \hline \end{array} \xrightarrow{+0:43} \begin{array}{|c|} \hline 01:46 \\ \hline \end{array}$

i)  $\begin{array}{|c|} \hline 04:09 \\ \hline \end{array} \xrightarrow{+0:43} \begin{array}{|c|} \hline 04:52 \\ \hline \end{array}$

b)  $\begin{array}{|c|} \hline 11:55 \\ \hline \end{array} \xrightarrow{+0:03} \begin{array}{|c|} \hline 11:58 \\ \hline \end{array}$

d)  $\begin{array}{|c|} \hline 10:54 \\ \hline \end{array} \xrightarrow{+0:04} \begin{array}{|c|} \hline 10:58 \\ \hline \end{array}$

f)  $\begin{array}{|c|} \hline 03:34 \\ \hline \end{array} \xrightarrow{+0:18} \begin{array}{|c|} \hline 03:52 \\ \hline \end{array}$

h)  $\begin{array}{|c|} \hline 02:04 \\ \hline \end{array} \xrightarrow{+0:17} \begin{array}{|c|} \hline 02:21 \\ \hline \end{array}$

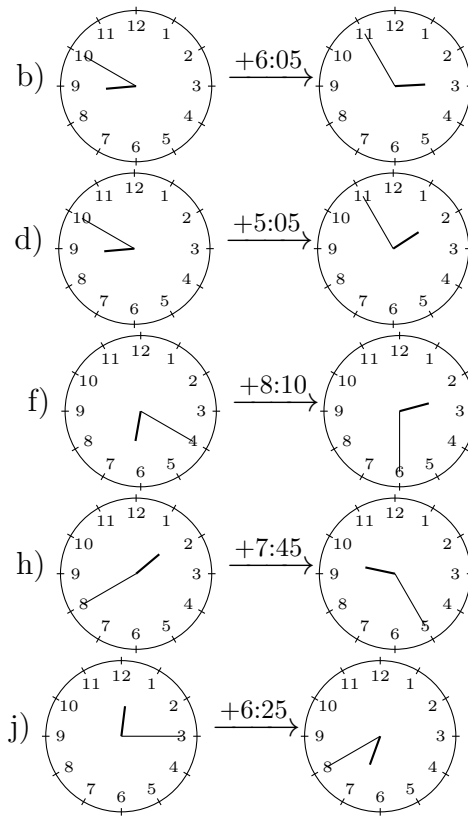
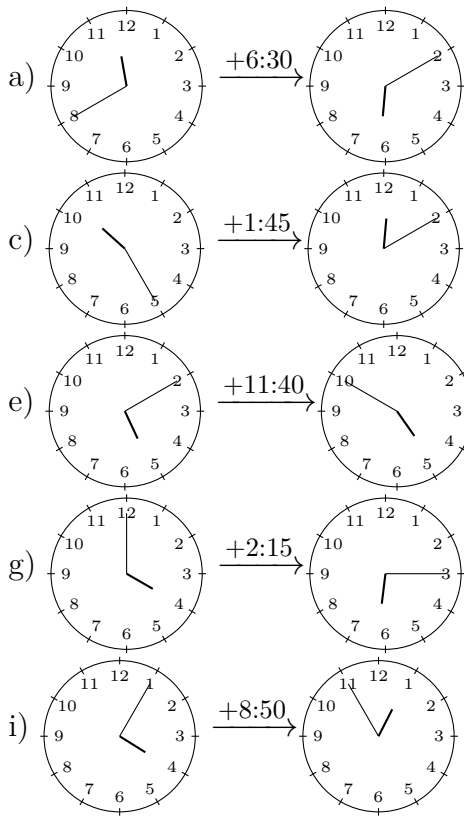
j)  $\begin{array}{|c|} \hline 03:03 \\ \hline \end{array} \xrightarrow{+0:11} \begin{array}{|c|} \hline 03:14 \\ \hline \end{array}$

3)

How much time has passed between the time shown on the left clock and the time

Quick:  
5329

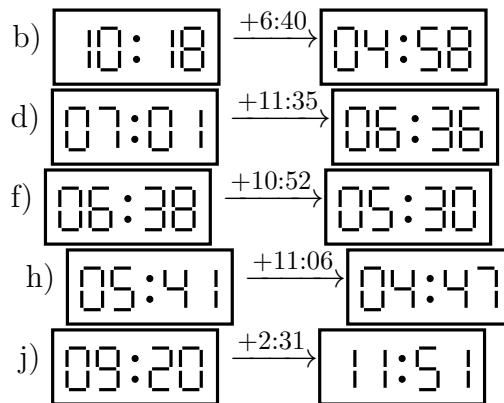
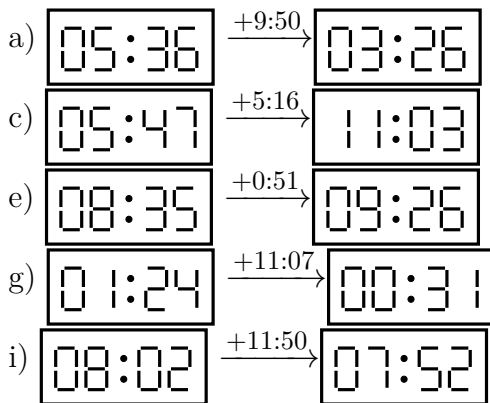
shown on the right clock?



4)

How much time has passed between the time shown on the left clock and the time shown on the right clock?

Quick:  
5329



Good Luck!