

Worksheet

01/23/2019

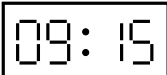
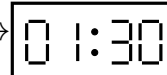
Free on dw-math.com

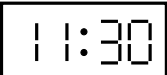
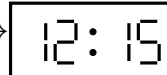
Problem quickname: 5977

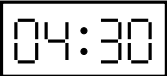
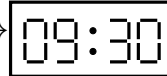
1)



What time was shown on the display before the period of time indicated had passed?



Quick:
5977

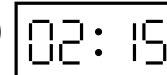
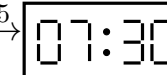
a)  $\xrightarrow{+4:15}$ 

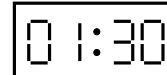

c)  $\xrightarrow{+0:45}$ 

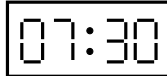
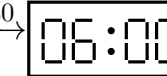
e)  $\xrightarrow{+5:00}$ 



g)  $\xrightarrow{+3:00}$ 



i)  $\xrightarrow{+4:30}$ 

b)  $\xrightarrow{+5:15}$ 

d)  $\xrightarrow{+8:45}$ 

f)  $\xrightarrow{+10:30}$ 

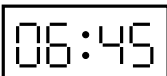
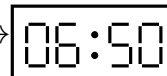
h)  $\xrightarrow{+4:45}$ 

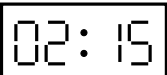
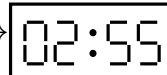
j)  $\xrightarrow{+6:00}$ 

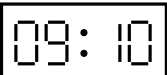
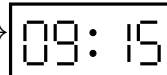
2)

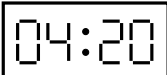
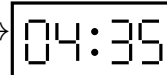
What time was shown on the display before the period of time indicated had passed?

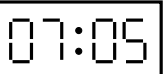
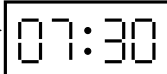
Quick:
5977

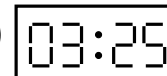
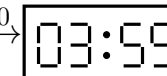
a)  $\xrightarrow{+0:05}$ 

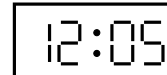
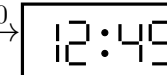
c)  $\xrightarrow{+0:40}$ 

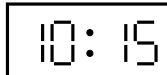
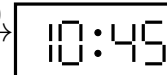
e)  $\xrightarrow{+0:05}$ 

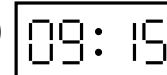
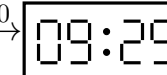
g)  $\xrightarrow{+0:15}$ 

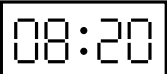
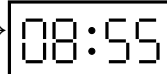
i)  $\xrightarrow{+0:25}$ 

b)  $\xrightarrow{+0:30}$ 

d)  $\xrightarrow{+0:40}$ 

f)  $\xrightarrow{+0:30}$ 

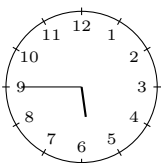
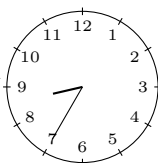
h)  $\xrightarrow{+0:10}$ 

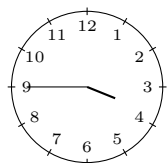
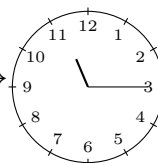
j)  $\xrightarrow{+0:35}$ 


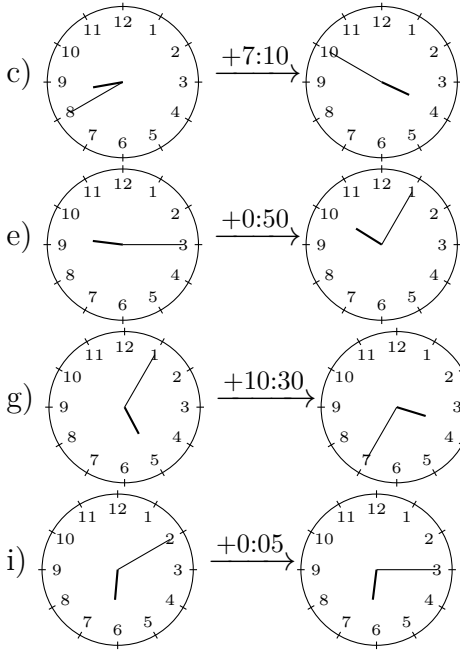
3)

Draw the clock's hands to show the correct time before the period of time indicated had passed.

Quick:
5977

a)  $\xrightarrow{+2:50}$ 

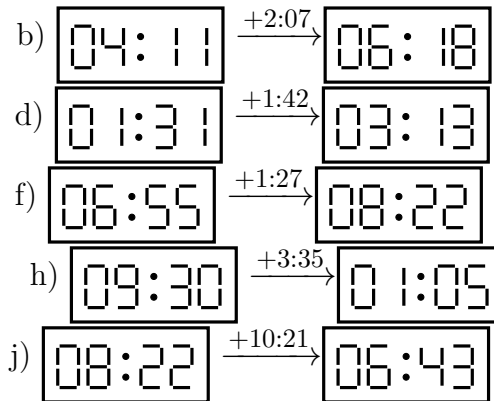
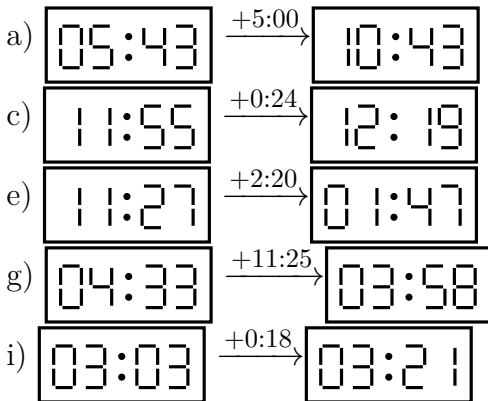
b)  $\xrightarrow{+7:30}$ 



4)

What time was shown on the display before the period of time indicated had passed?

Quick:
5977



Good Luck!