

# Worksheet

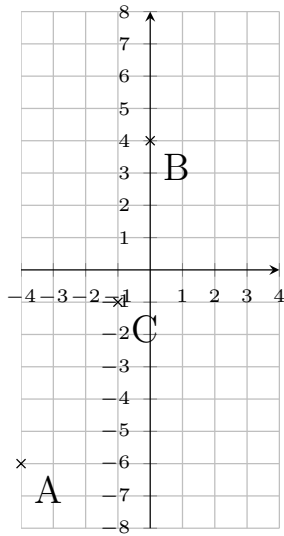
05/20/2020

Free on dw-math.com

Problem quickname: 2301

1)

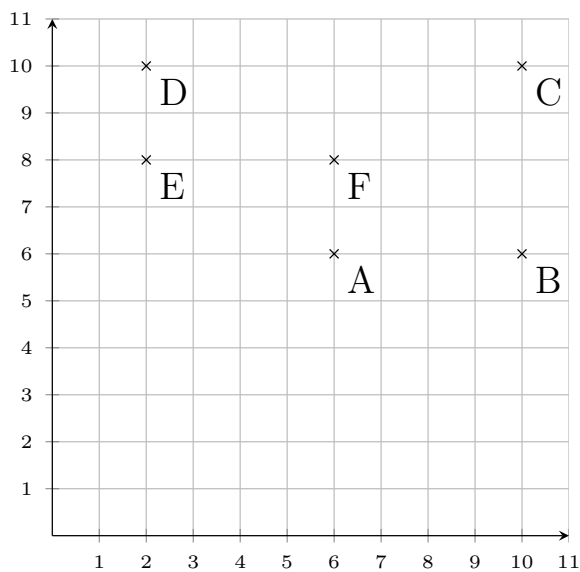
Specify the coordinates of the points marked on the coordinate plane.

Quick:  
2301

A(-4|-6), B(0|4), C(-1|-1)

2)

Specify the coordinates of the points marked on the coordinate plane.

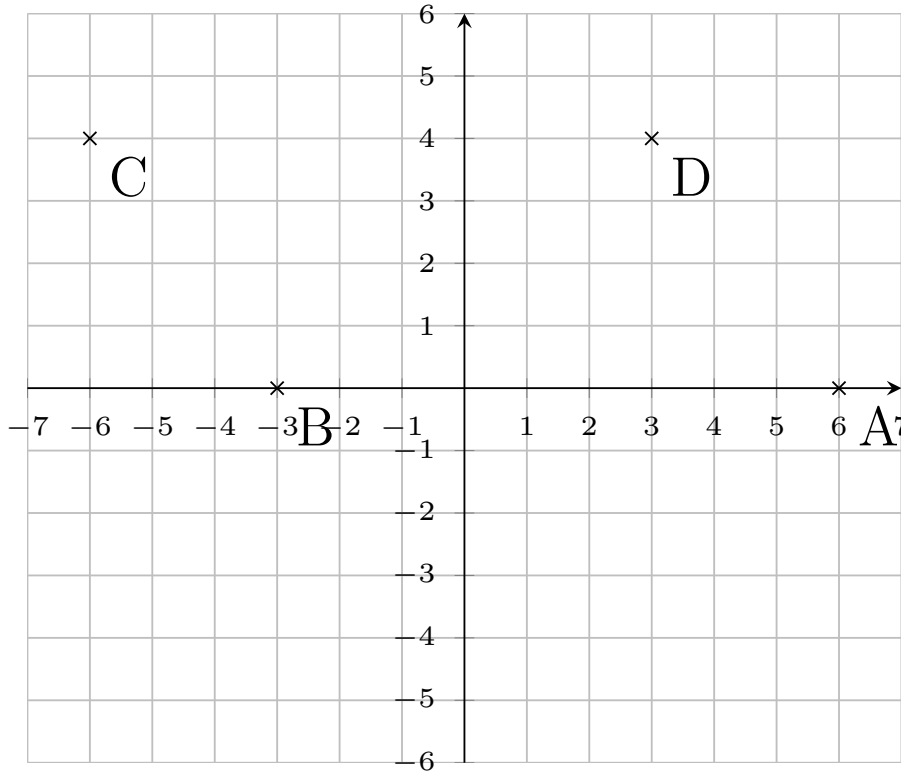
Quick:  
2301

A(6|6), B(10|6), C(10|10), D(2|10), E(2|8), F(6|8)

3)

Specify the coordinates of the points marked on the coordinate plane.

Quick:  
2301

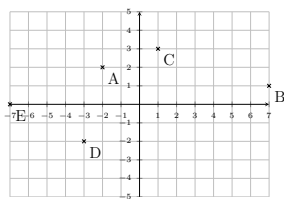


A(6|0), B(-3|0), C(-6|4), D(3|4)

4)

Specify the coordinates of the points marked on the coordinate plane.

Quick:  
2301



A(-2|2), B(7|1), C(1|3), D(-3|-2), E(-7|0)

Good Luck!