

# Worksheet

11/04/2018

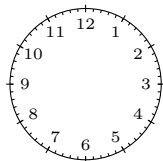
Free on dw-math.com

Problem quickname: 5436

1)

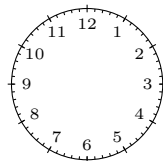
Draw the hands of the clock to show the time specified.

a) twenty-two past



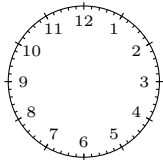
one

b) fourteen past

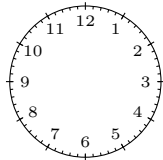


one

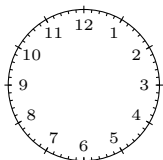
c) eleven past ten



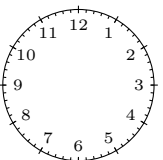
d) eleven to four



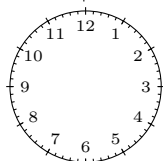
e) twenty-two past  
seven



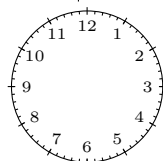
f) a quarter to two



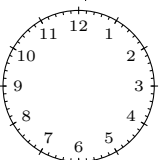
g) twenty-five past  
seven



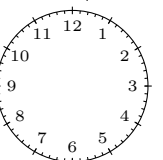
h) twenty-three  
past twelve



i) thirteen to  
eleven



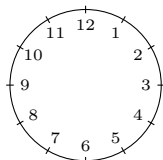
j) four past ten



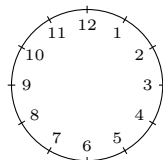
2)

Draw the hands of the clock to show the time specified.

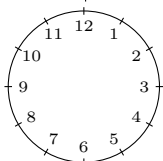
a) a quarter past  
six



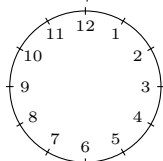
b) half past six



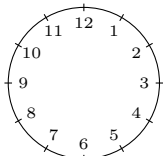
c) a quarter past  
seven



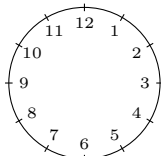
d) nine o'clock



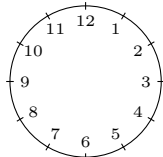
e) four o'clock



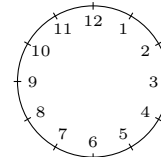
f) eleven o'clock



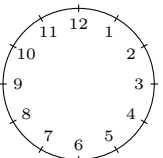
g) a quarter past eight



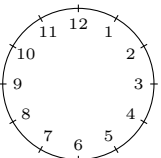
h) half past seven



i) half past ten



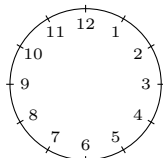
j) a quarter past nine



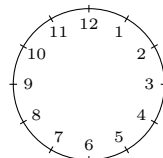
3)

Draw the hands of the clock to show the time specified.

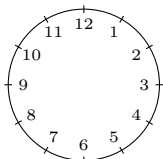
a) 7:20



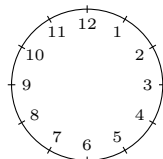
b) 7:30



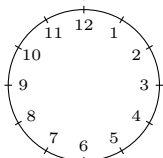
c) 5:45



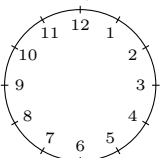
d) 4:10



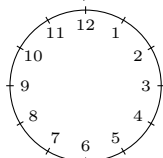
e) 9:15



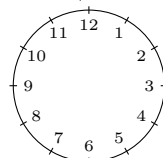
f) 2:30



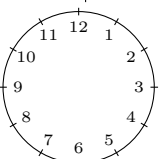
g) 5:40



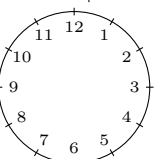
h) 8:40



i) 6:30



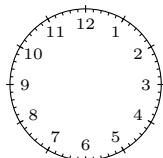
j) 3:55



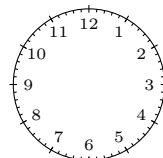
4)

Draw the hands of the clock to show the time specified.

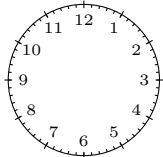
a) 5:14



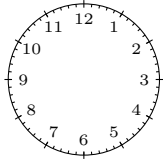
b) 10:17



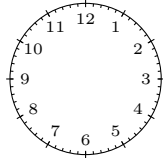
c) 3:27



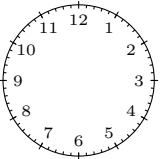
e) 11:17



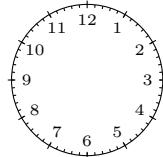
g) 7:16



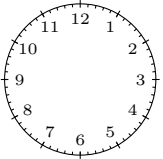
i) 10:58



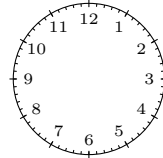
d) 9:56



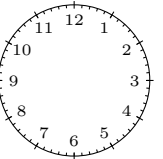
f) 4:03



h) 8:47



j) 10:03



Good Luck!