

# Worksheet

02/05/2019

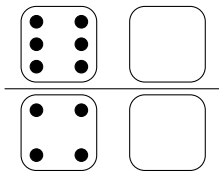
Free on dw-math.com

Problem quickname: 5491

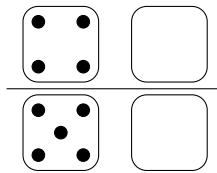
1)

Draw pips for the empty dice so that the sum indicated is correct.

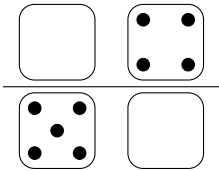
a) Sum of every row: 8



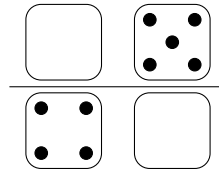
b) Sum of every row: 8



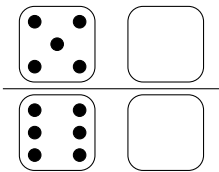
c) Sum of every row: 10



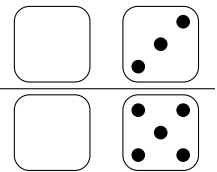
d) Sum of every row: 10



e) Sum of every row: 8




f) Sum of every row: 8



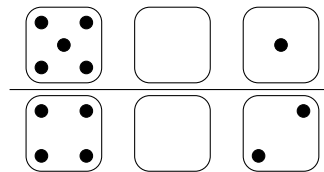
2)

Draw pips for the empty dice so that the sum indicated is correct.


a) Sum of every row: 20



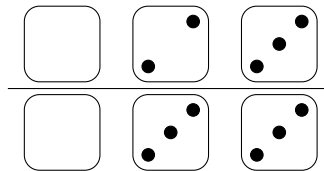
b) Sum of every row: 10




c) Sum of every row: 20




d) Sum of every row: 10



e) Sum of every row: 20



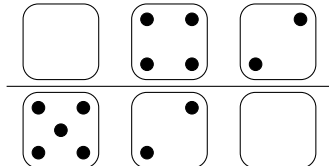
f) Sum of every row: 20



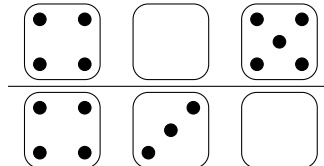
3)

Draw pips for the empty dice so that the sum indicated is correct.

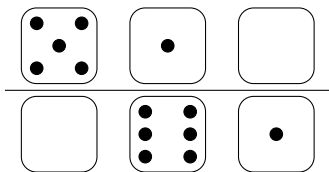
a) Sum of every row: 10



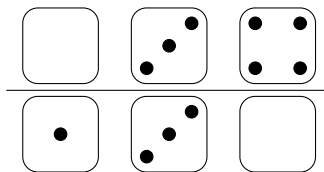
b) Sum of every row: 10



c) Sum of every row: 10




d) Sum of every row: 10




4)

Draw pips for the empty dice so that the sum indicated is correct.


a) Sum of every row: 20




b) Sum of every row: 20



c) Sum of every row: 20



d) Sum of every row: 20



Good Luck!