

# Worksheet

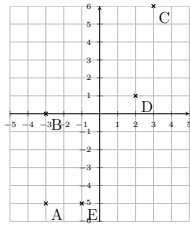
05/20/2020

Free on dw-math.com

Problem quickname: 2301

1)

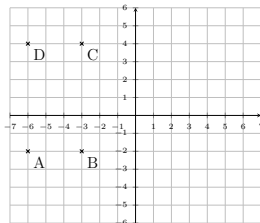
Specify the coordinates of the points marked on the coordinate plane.

Quick:  
2301

A(-3|-5), B(-3|0), C(3|6), D(2|1), E(-1|-5)

2)

Specify the coordinates of the points marked on the coordinate plane.

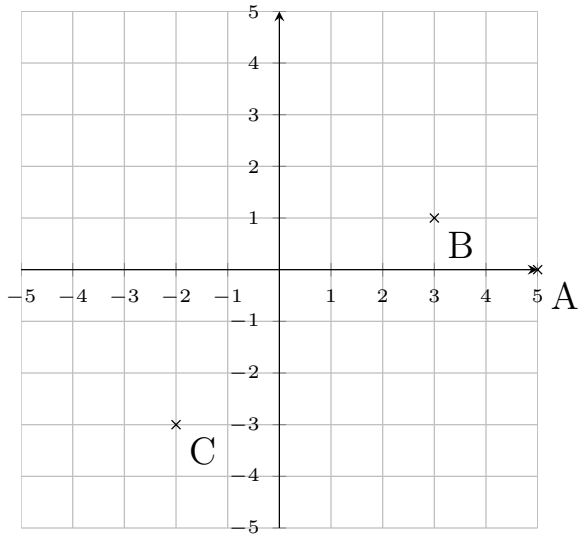
Quick:  
2301

A(-6|-2), B(-3|-2), C(-3|4), D(-6|4)

3)

Quick:  
2301

Specify the coordinates of the points marked on the coordinate plane.

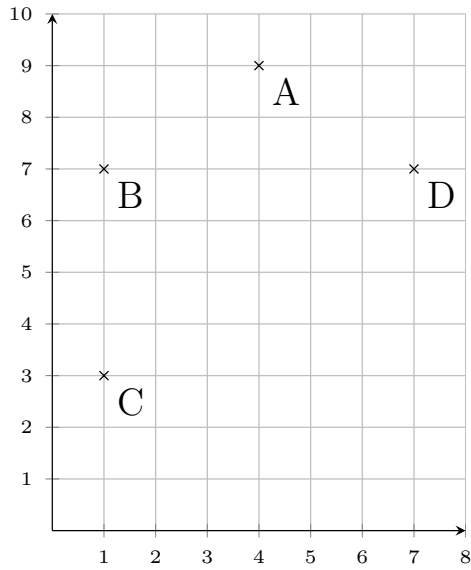


A(5|0), B(3|1), C(-2|-3)

4)

Quick:  
2301

Specify the coordinates of the points marked on the coordinate plane.



A(4|9), B(1|7), C(1|3), D(7|7)

Good Luck!