

Worksheet

01/21/2019

Free on dw-math.com

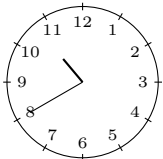
Problem quickname: 2783

1)

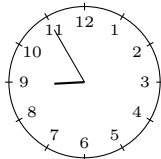
Tell the time shown by the clock, for example 08:15.

Quick:
2783

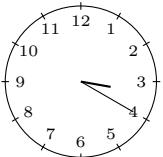
a) 10:40.



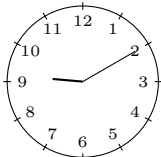
b) 8:55.




c) 3:20.



d) 9:10.



e) 1:10.

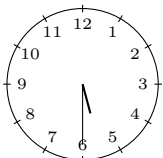


2)

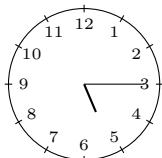
Tell the time shown by the clock, for example “quarter past eight”.

Quick:
2783

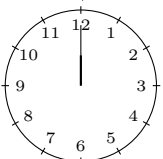
a) half past five



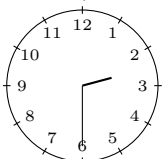
b) a quarter past five



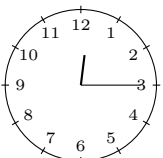
c) twelve o'clock



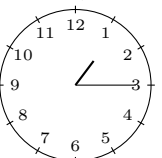
d) half past two



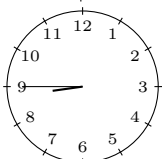
e) a quarter past twelve



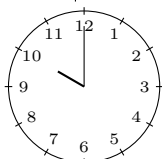
f) a quarter past one

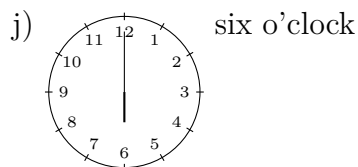
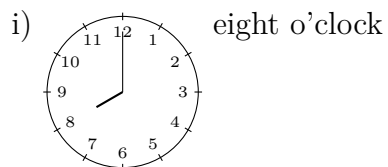


g) a quarter to nine



h) ten o'clock

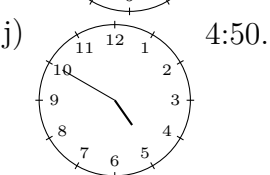
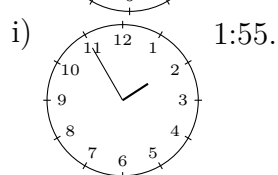
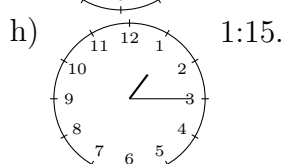
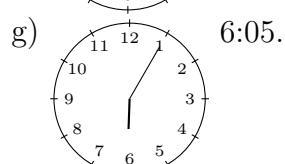
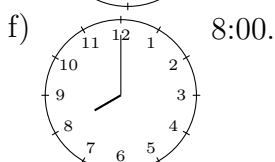
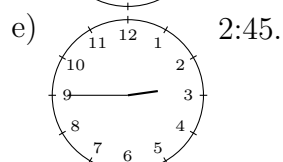
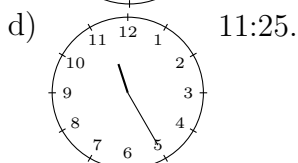
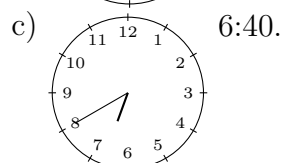
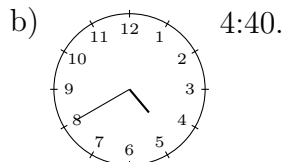
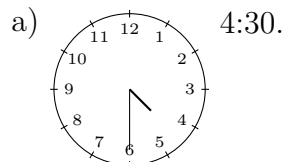




3)

Tell the time shown by the clock, for example 08:15.

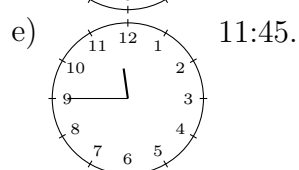
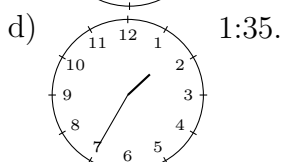
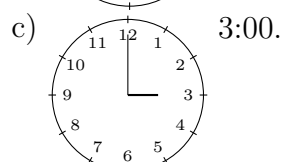
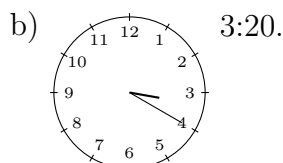
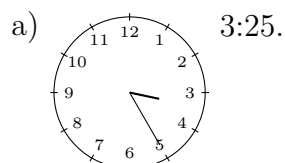
Quick:
2783



4)

Tell the time shown by the clock, for example 08:15.

Quick:
2783



Good Luck!