

Worksheet

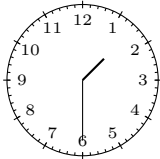
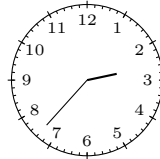
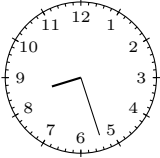



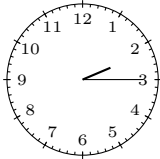
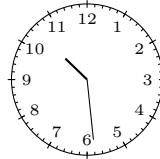
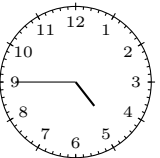

11/04/2018

Free on dw-math.com

Problem quickname: 5436

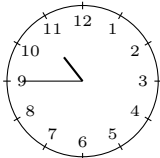
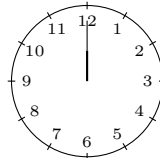
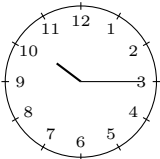
1)

Draw the hands of the clock to show the time specified.

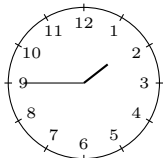
Quick:
5436a)  half past oneb)  twenty-three to threec)  twenty-seven past eightd)  nineteen past tene)  twenty-two to eightf)  eleven past seveng)  a quarter past twoh)  twenty-nine past teni)  a quarter to fivej)  nine to seven

2)

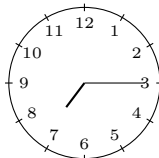
Draw the hands of the clock to show the time specified.

Quick:
5436a)  a quarter to elevenb)  twelve o'clockc)  a quarter past tend)  nine o'clock

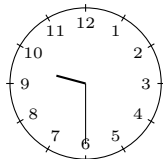
e) a quarter to two



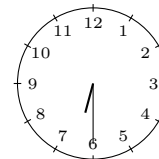
f) a quarter past seven



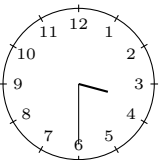
g) half past nine



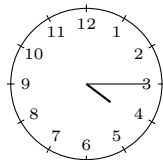
h) half past six



i) half past three



j) a quarter past four

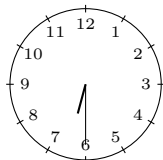


3)

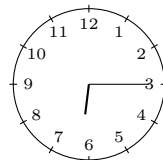
Draw the hands of the clock to show the time specified.

Quick:
5436

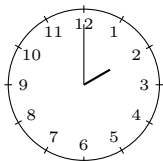
a) 6:30



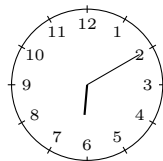
b) 6:15



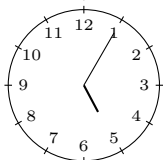
c) 2:00



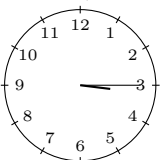
d) 6:10



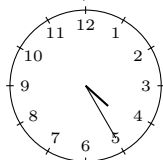
e) 5:05



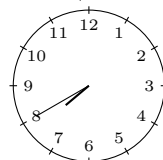
f) 3:15



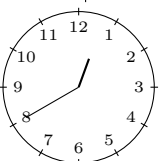
g) 4:25



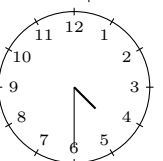
h) 7:40



i) 12:40



j) 4:30

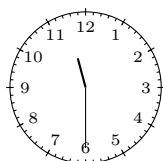


4)

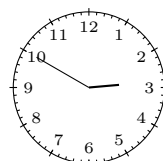
Draw the hands of the clock to show the time specified.

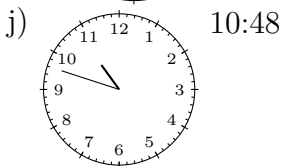
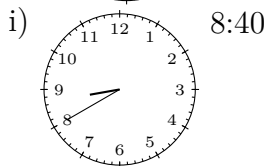
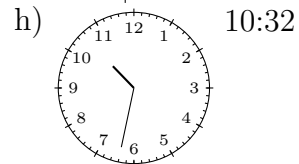
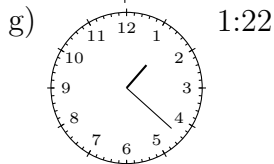
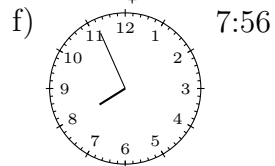
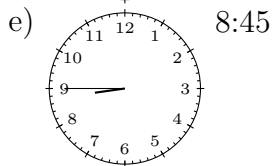
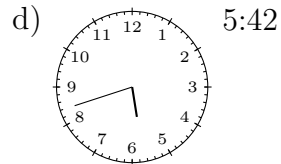
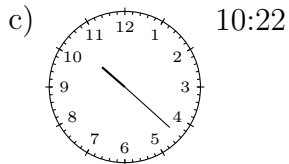
Quick:
5436

a) 11:30



b) 2:50





Good Luck!