

Worksheet

11/04/2018

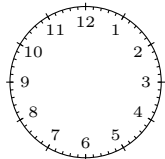
Free on dw-math.com

Problem quickname: 5436

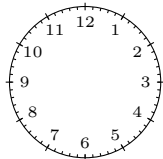
1)

Draw the hands of the clock to show the time specified.

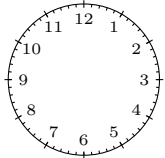
a) half past one



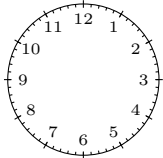
b) twenty-three to three



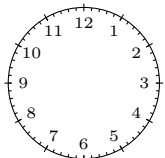
c) twenty-seven past eight



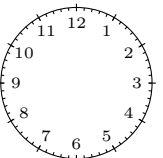
d) nineteen past ten



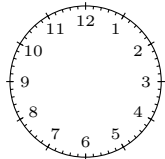
e) twenty-two to eight



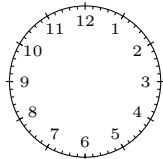
f) eleven past seven



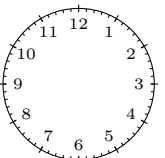
g) a quarter past two



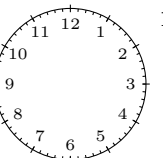
h) twenty-nine past ten



i) a quarter to five



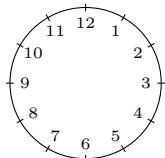
j) nine to seven



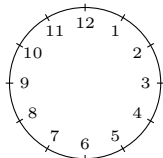
2)

Draw the hands of the clock to show the time specified.

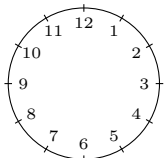
a) a quarter to eleven



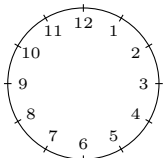
b) twelve o'clock



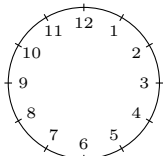
c) a quarter past ten



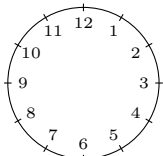
d) nine o'clock



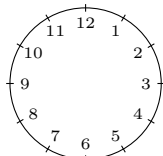
e) a quarter to two



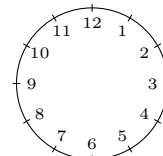
f) a quarter past seven



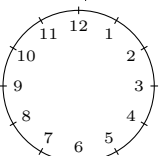
g) half past nine



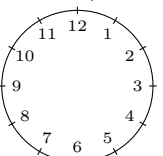
h) half past six



i) half past three



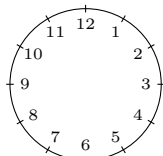
j) a quarter past four



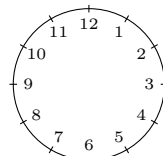
3)

Draw the hands of the clock to show the time specified.

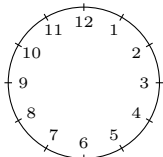
a) 6:30



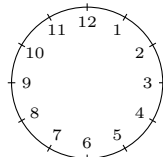
b) 6:15



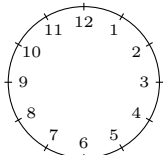
c) 2:00



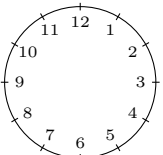
d) 6:10



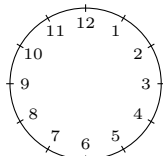
e) 5:05



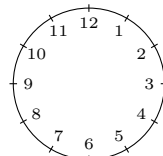
f) 3:15



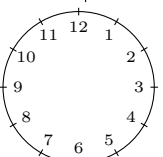
g) 4:25



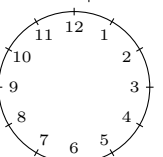
h) 7:40



i) 12:40



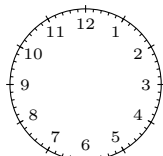
j) 4:30



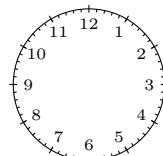
4)

Draw the hands of the clock to show the time specified.

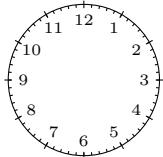
a) 11:30



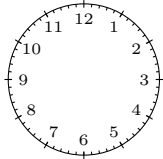
b) 2:50



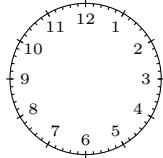
c) 10:22



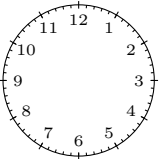
e) 8:45



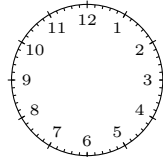
g) 1:22



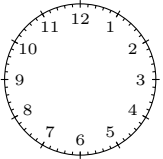
i) 8:40



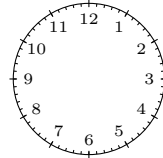
d) 5:42



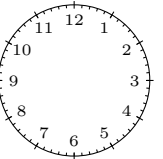
f) 7:56



h) 10:32



j) 10:48



Good Luck!