

# Worksheet

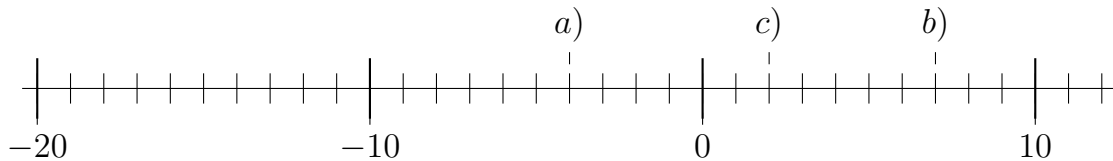
05/27/2018

Free on dw-math.com

Problem quickname: 7110

1)

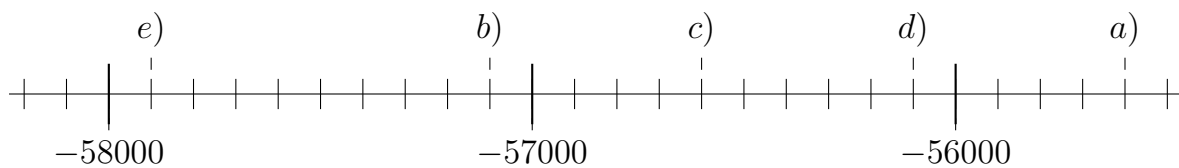
Draw a number line with appropriate scaling and mark the position of each number.

Quick:  
7110

a) = -4 ; b) = 7 ; c) = 2

2)

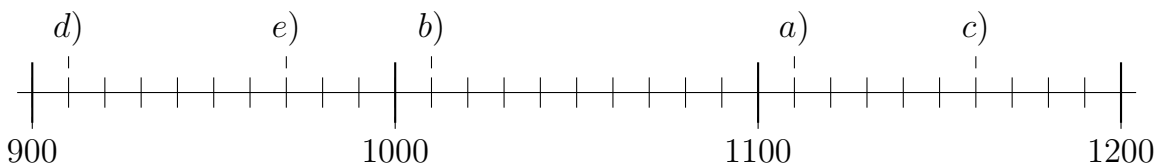
Draw a number line with appropriate scaling and mark the position of each number.

Quick:  
7110

a) = -55600 ; b) = -57100 ; c) = -56600 ; d) = -56100 ; e) = -57900

3)

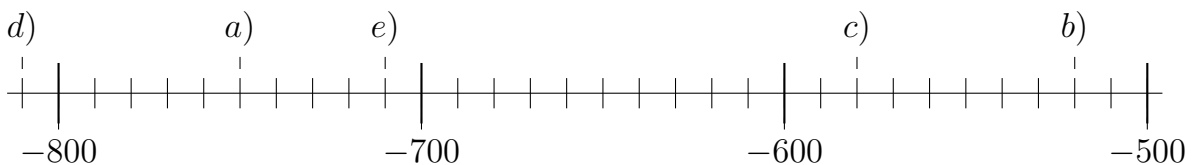
Draw a number line with appropriate scaling and mark the position of each number.

Quick:  
7110

a) = 1110 ; b) = 1010 ; c) = 1160 ; d) = 910 ; e) = 970

4)

Draw a number line with appropriate scaling and mark the position of each number.

Quick:  
7110

a) = -750 ; b) = -520 ; c) = -580 ; d) = -810 ; e) = -710

Good Luck!