

Worksheet

05/10/2020

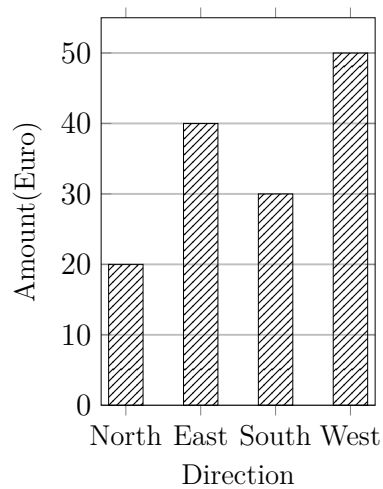
Free on dw-math.com

Problem quickname: 2701

1)

Read the numbers from the diagram to complete the table.

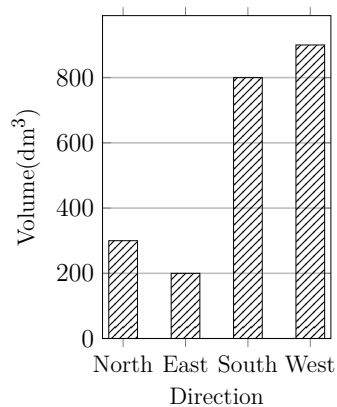
Direction	Amount(Euro)
North	
East	
South	
West	50



2)

Read the numbers from the diagram to complete the table.

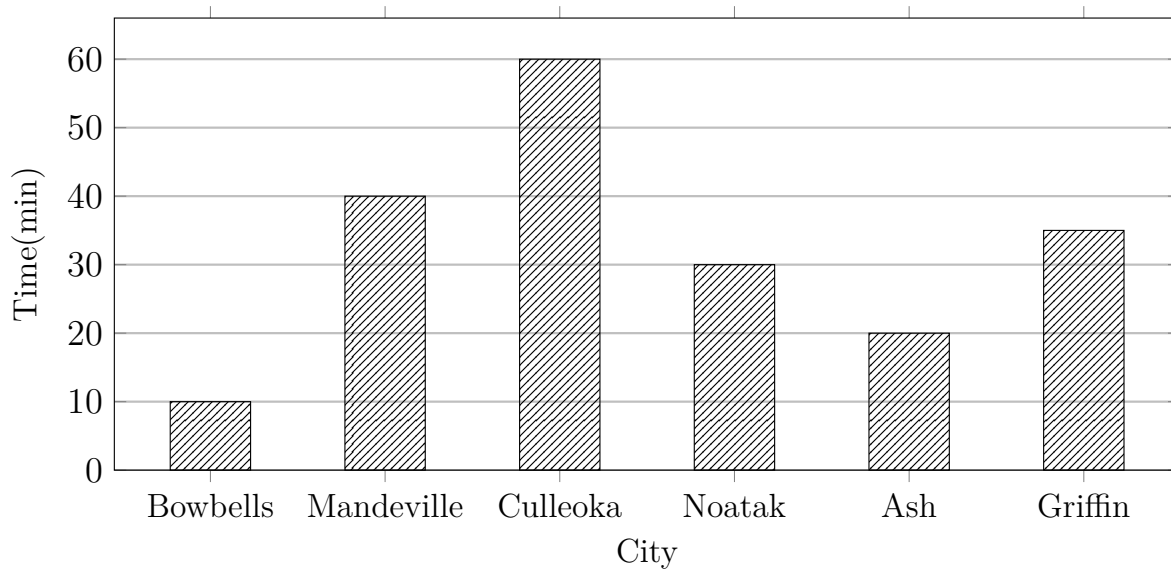
Direction	Volume(dm ³)
North	300
East	
South	
West	900



3)

Create a table with two columns and headings. then put the values from the bar chart

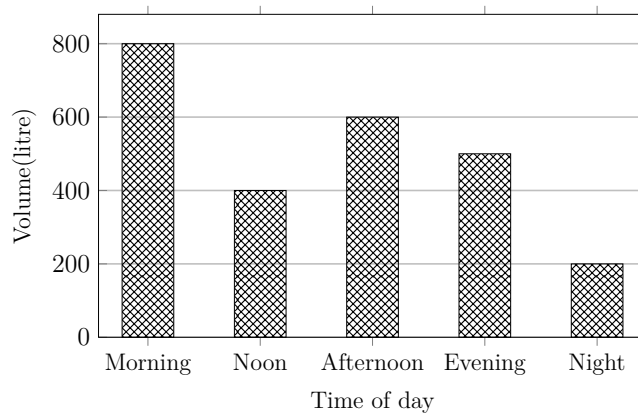
into the table.



4)

Read the numbers from the diagram to complete the table.

Time of day	Volume(litre)
Morning	
Noon	
Afternoon	
Evening	
Night	



Good Luck!