

Worksheet

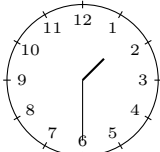
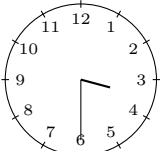
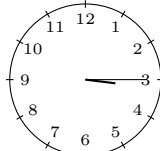
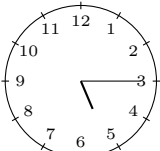
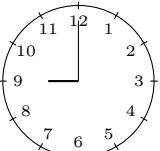
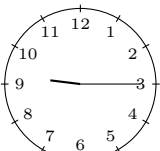
01/21/2019

Free on dw-math.com

Problem quickname: 2783

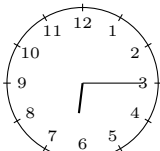
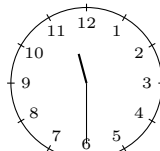
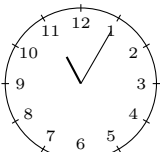
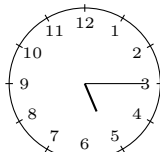
1)

Tell the time shown by the clock, for example "quarter past eight".

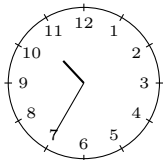
Quick:
2783a)  half past oneb)  a quarter to ninec)  half past threed)  a quarter past threee)  a quarter past fivef)  nine o'clockg)  eight o'clockh)  half past ninei)  half past eightj)  a quarter past nine

2)

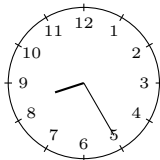
Tell the time shown by the clock, for example 08:15.

Quick:
2783a)  6:15.b)  11:30.c)  11:05.d)  5:15.

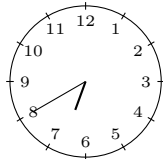
e) 10:35.



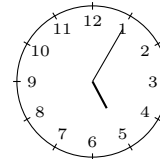
f) 8:25.



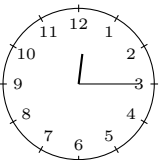
g) 6:40.



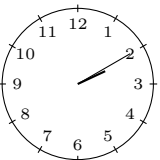
h) 5:05.



i) 0:15.



j) 2:10.

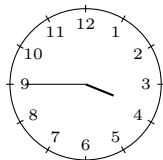


3)

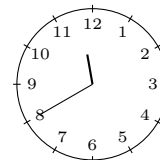
Tell the time shown by the clock, for example 08:15.

Quick:
2783

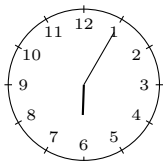
a) 3:45.



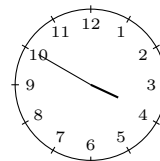
b) 11:40.



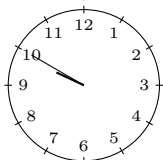
c) 6:05.



d) 3:50.



e) 9:50.

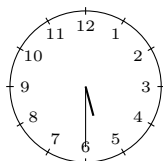


4)

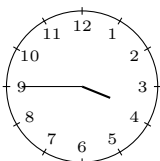
Tell the time shown by the clock, for example “quarter past eight”.

Quick:
2783

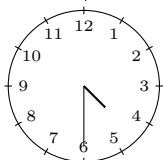
a) half past five



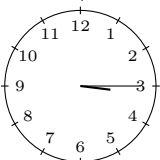
b) a quarter to four



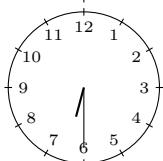
c) half past four



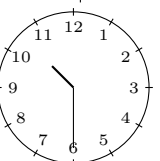
d) a quarter past three



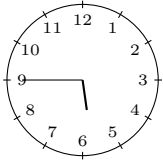
e) half past six



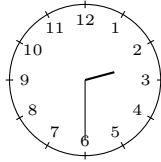
f) half past ten



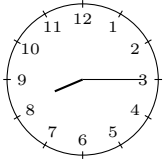
g) a quarter to six



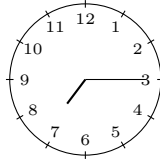
h) half past two



i) a quarter past eight



j) a quarter past seven



Good Luck!