

Worksheet

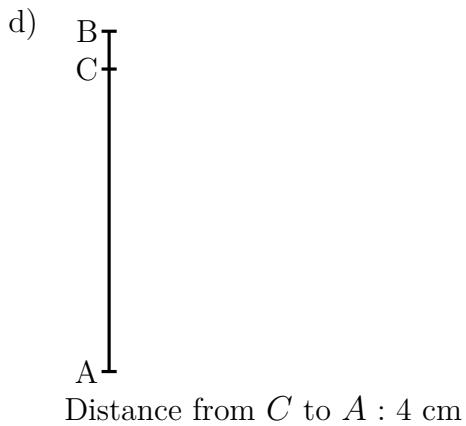
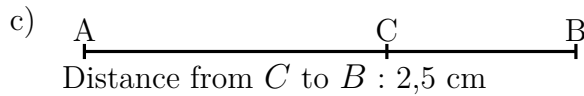
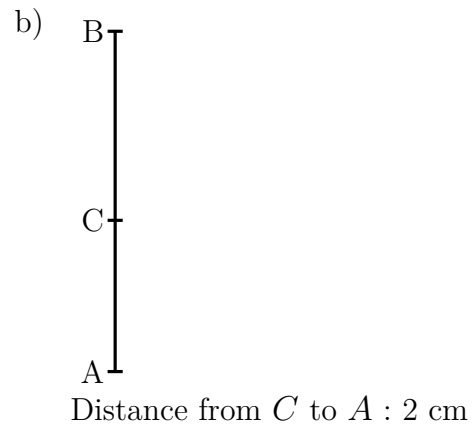
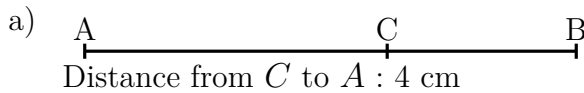
06/12/2019

Free on dw-math.com

Problem quickname: 4600

1)

Mark a new point C on the line segment with the indicated distance to the specified point.

Quick:
4600

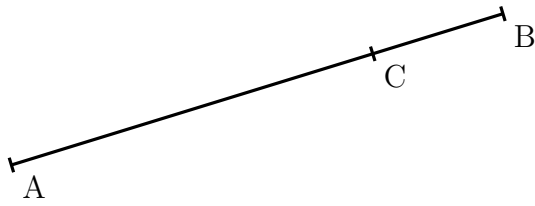
2)

Mark a new point C on the line segment with the indicated distance to the specified

Quick:
4600

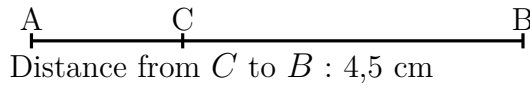
point.

a)



Distance from C to A : 5 cm

b)



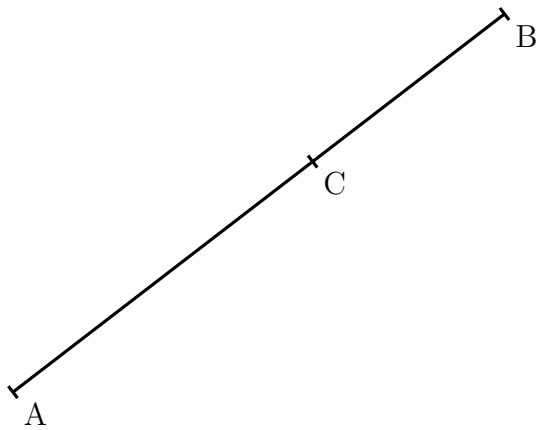
Distance from C to B : 4,5 cm

c)



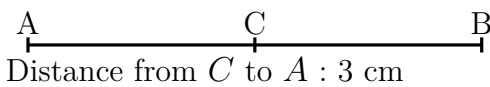
Distance from C to A : 3 cm

d)



Distance from C to A : 5 cm

e)



Distance from C to A : 3 cm

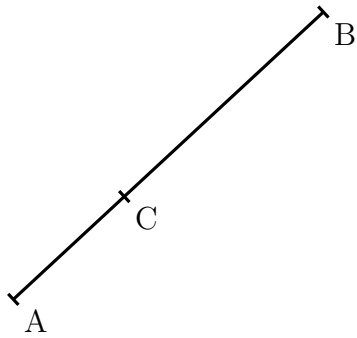
3)

Mark a new point C on the line segment with the indicated distance to the specified

Quick:
4600

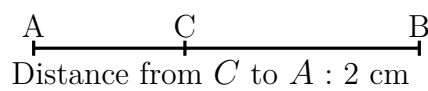
point.

a)



Distance from C to B : 3,6 cm

b)



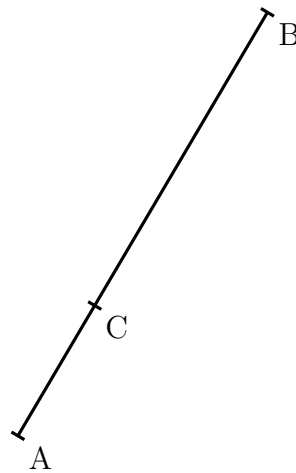
Distance from C to A : 2 cm

c)



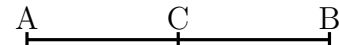
Distance from C to B : 1,6 cm

d)



Distance from C to B : 4,5 cm

e)



Distance from C to A : 2 cm

f)



Distance from C to B : 1,5 cm


4)

Mark a new point C on the line segment with the indicated distance to the specified

Quick:
4600

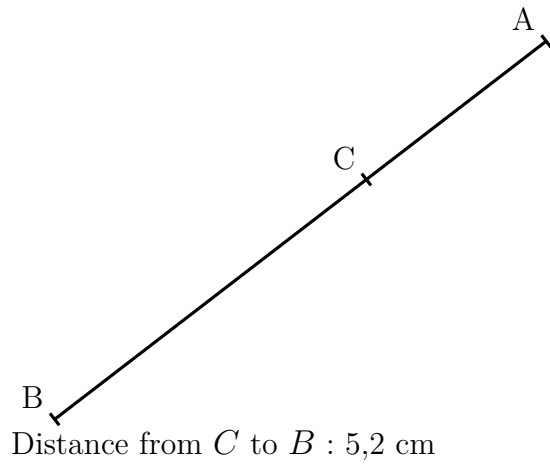
point.

a)



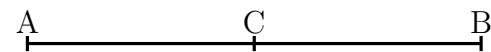
Distance from C to A : 4 cm

b)



Distance from C to B : 5,2 cm

c)



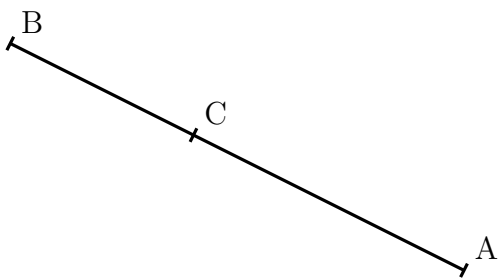
Distance from C to A : 3 cm

d)




Distance from C to A : 3 cm

e)



Distance from C to A : 4 cm

f)



Distance from C to B : 4,5 cm

Good Luck!