

Worksheet

05/07/2018

Free on dw-math.com

Problem quickname: 4788


1)

Measure the size of the angle.

Quick:
4788

a)  15 deg.

b)  7 deg.

c)  27 deg.

d)  22 deg.

e)  39 deg.

2)

Measure the size of the angle.

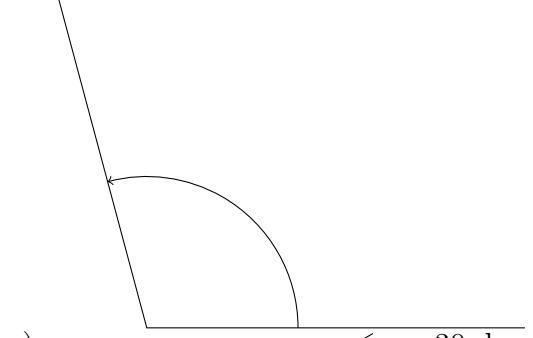
Quick:
4788

a)  125 deg.

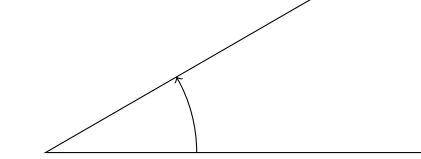
b)  25 deg.

c)  65 deg.

d) 105 deg.



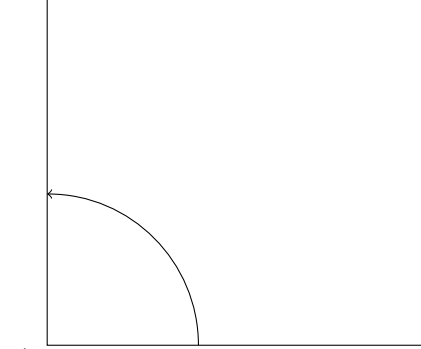
e) 30 deg.



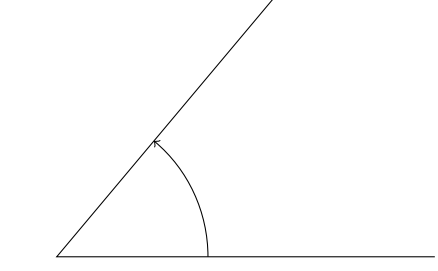
3)
Measure the size of the angle.

Quick:
4788

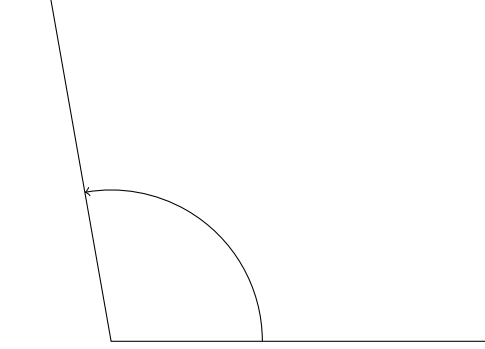
a) 90 deg.

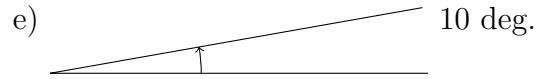
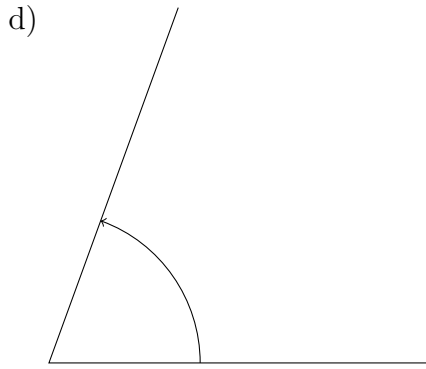


b) 50 deg.



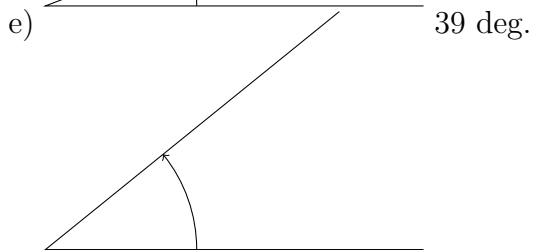
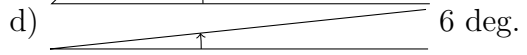
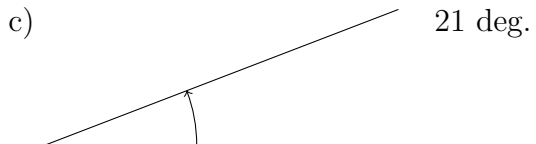
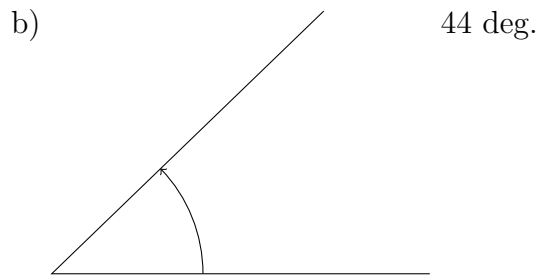
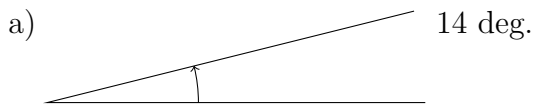
c) 100 deg.





4)
Measure the size of the angle.

Quick:
4788



Good Luck!