

Worksheet

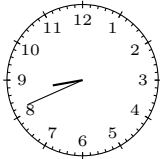
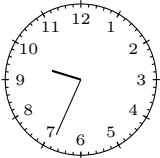
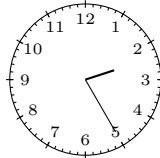
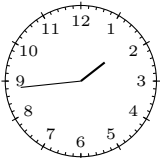
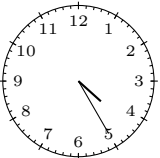
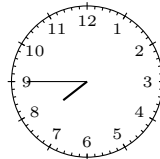
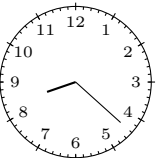
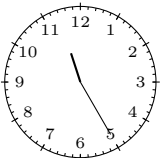
11/04/2018

Free on dw-math.com

Problem quickname: 5436

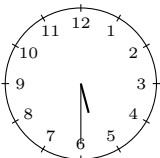
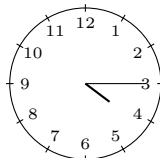
1)

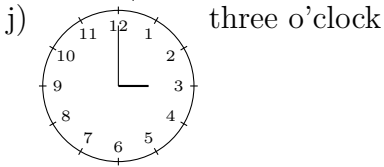
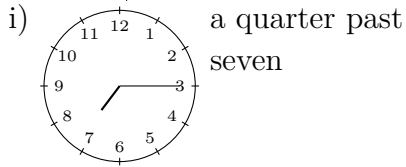
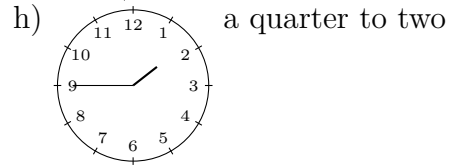
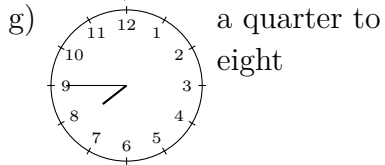
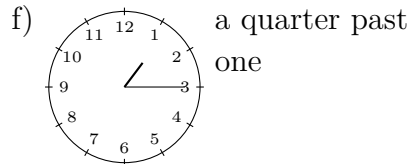
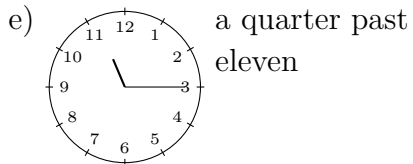
Draw the hands of the clock to show the time specified.

Quick:
5436a)  nineteen to nineb)  half past onec)  twenty-six to tend)  twenty-five past twoe)  sixteen to twof)  twenty-five past fourg)  eleven to tenh)  a quarter to eighti)  twenty-two past eightj)  twenty-five past eleven

2)

Draw the hands of the clock to show the time specified.

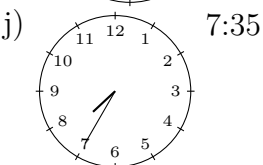
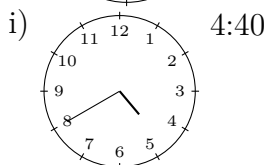
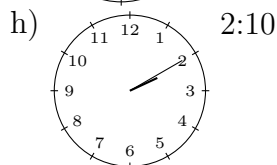
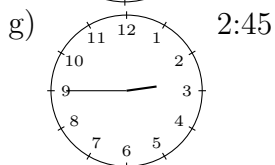
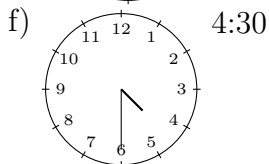
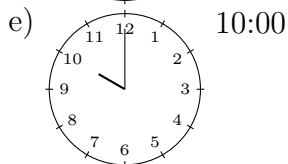
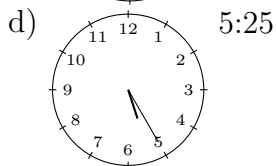
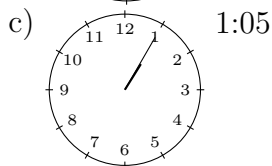
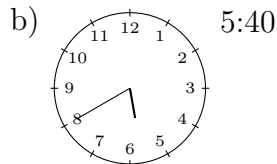
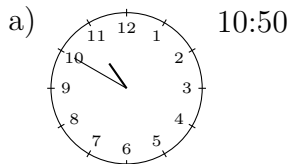
Quick:
5436a)  half past sevenb)  ten o'clockc)  half past fived)  a quarter past four



3)

Draw the hands of the clock to show the time specified.

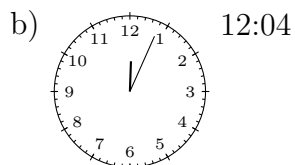
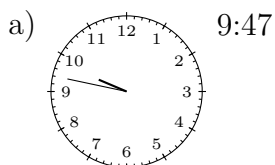
Quick:
5436



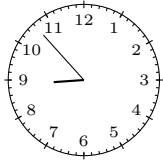
4)

Draw the hands of the clock to show the time specified.

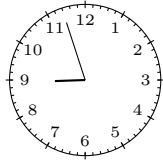
Quick:
5436



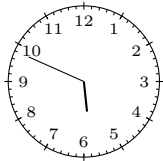
c) 8:53



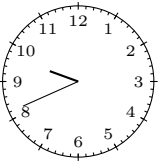
d) 8:57




e) 5:49



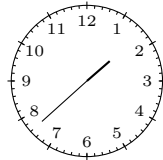
f) 9:41




g) 7:05



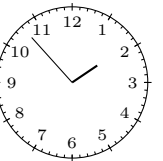
h) 1:38



i) 10:14



j) 1:53



Good Luck!