

Worksheet

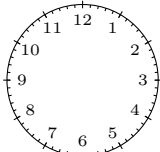
11/04/2018

Free on dw-math.com

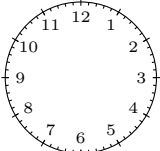
Problem quickname: 5436

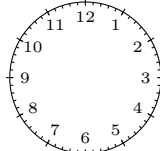
1)

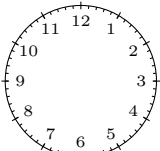
Draw the hands of the clock to show the time specified.

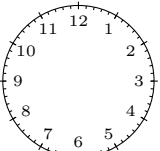
a)  nineteen to nine

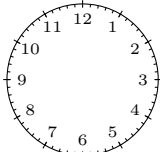
b)  half past one

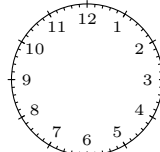
c)  twenty-six to ten


d)  twenty-five past two

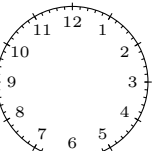
e)  sixteen to two

f)  twenty-five past four

g)  eleven to ten

h)  a quarter to eight

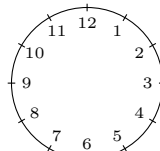
i)  twenty-two past eight

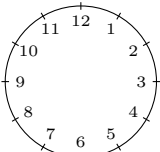
j)  twenty-five past eleven

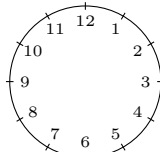
2)

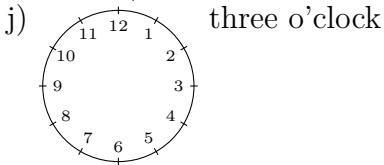
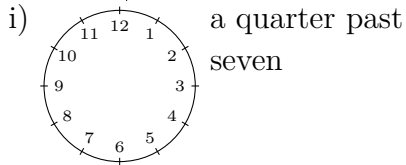
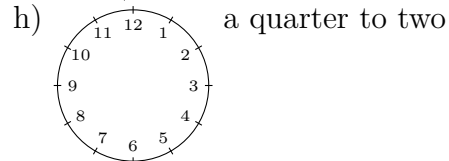
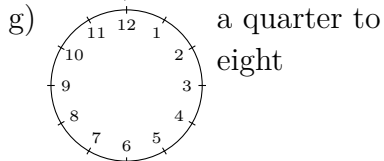
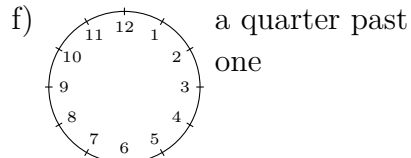
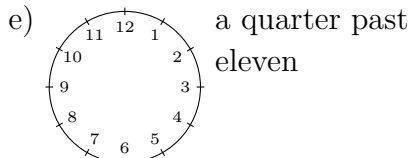
Draw the hands of the clock to show the time specified.

a)  half past seven

b)  ten o'clock

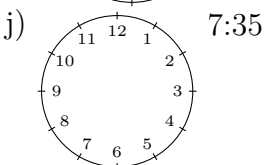
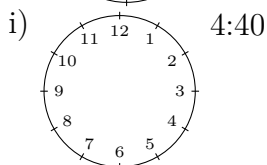
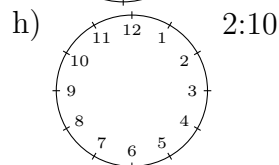
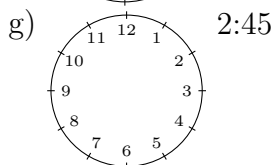
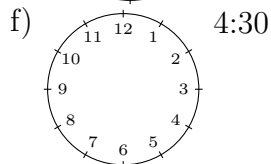
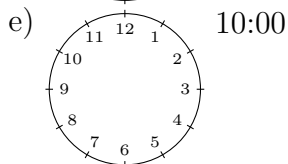
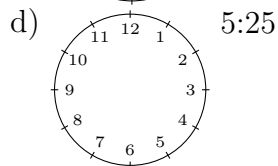
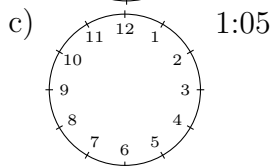
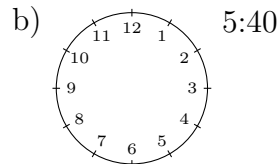
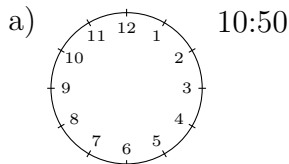
c)  half past five

d)  a quarter past four



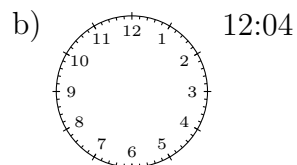
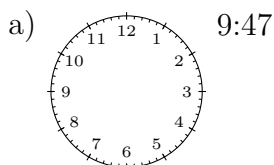
3)

Draw the hands of the clock to show the time specified.

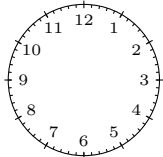


4)

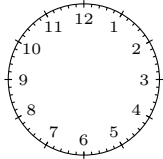
Draw the hands of the clock to show the time specified.



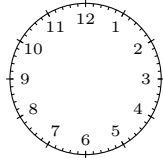
c) 8:53



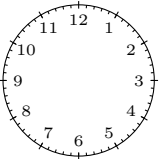
e) 5:49



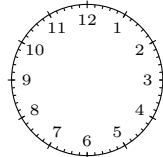
g) 7:05



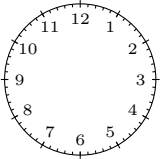
i) 10:14



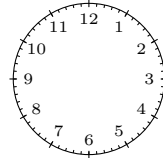
d) 8:57



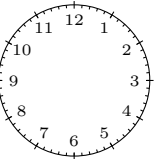
f) 9:41



h) 1:38



j) 1:53



Good Luck!