

# Worksheet

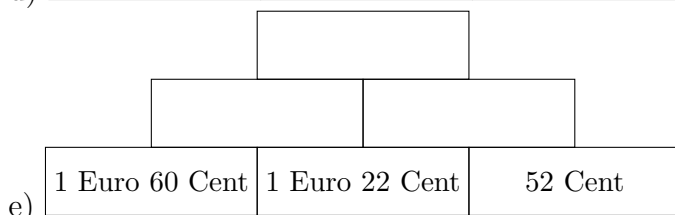

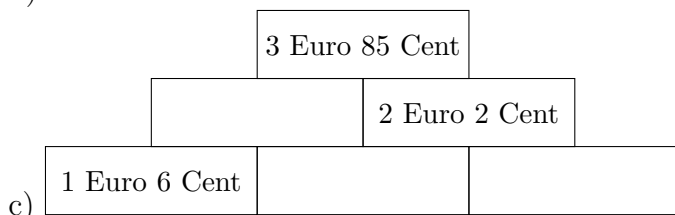
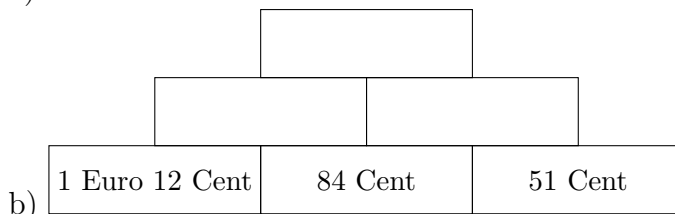
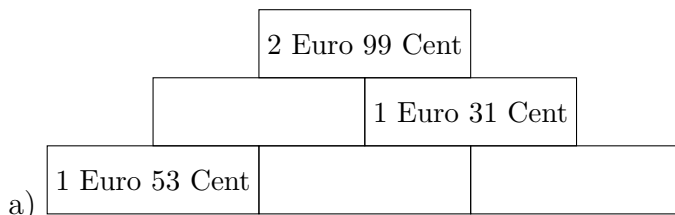
05/12/2019

Free on dw-math.com

Problem quickname: 5598

1)

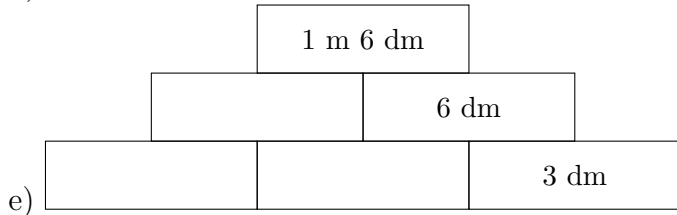

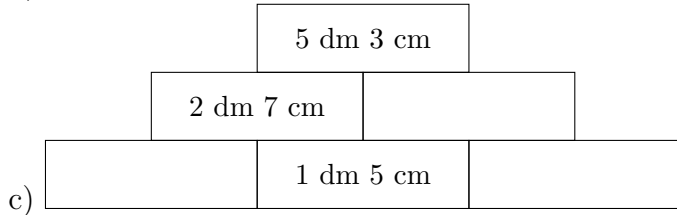
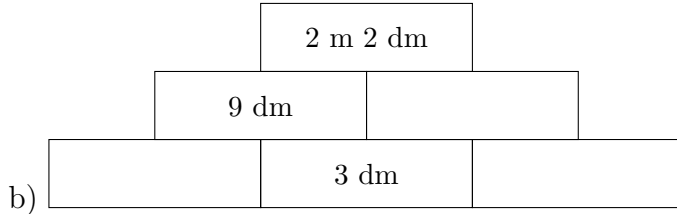
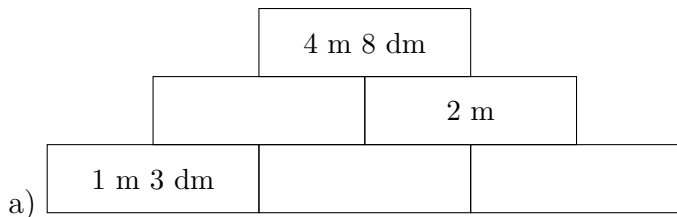
Fill in the blank boxes with the correct values. Every value is formed by adding the values left below and right below the box.



2)

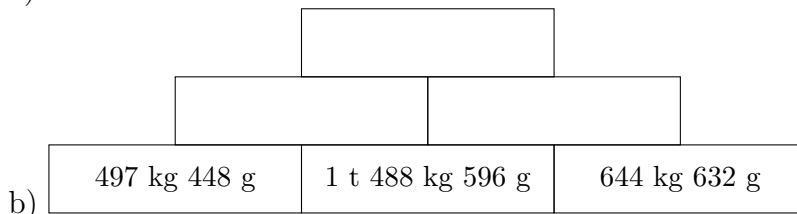
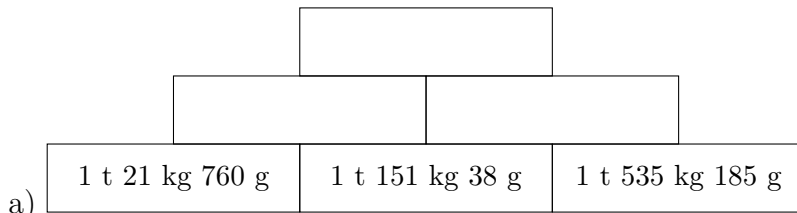
Fill in the blank boxes with the correct values. Every value is formed by adding the

values left below and right below the box.



3)

Fill in the blank boxes with the correct values. Every value is formed by adding the values left below and right below the box.



c) 952 kg 92 g	1 t 566 kg 895 g	1 t 294 kg 247 g

d) 24 kg 531 g	1 t 577 kg 986 g	729 kg 775 g

e) 735 kg 34 g	1 t 647 kg 886 g	1 t 294 kg 942 g

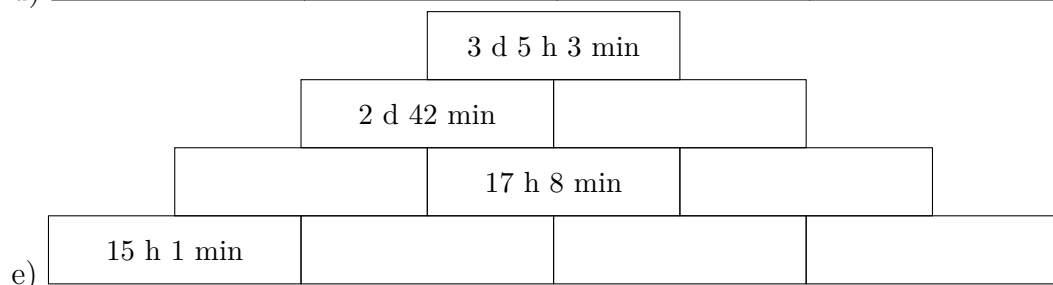
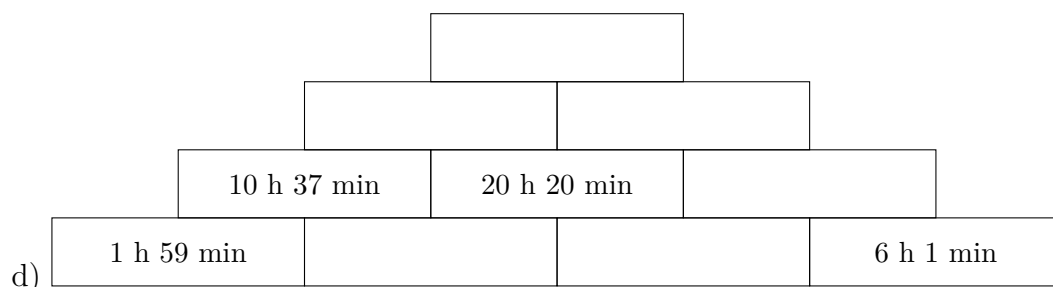
4)

Fill in the blank boxes with the correct values. Every value is formed by adding the values left below and right below the box.

	4 h 25 min 4 s			
	2 h 46 min 30 s			
		1 h 11 min 52 s	26 min 42 s	
a)			26 min 6 s	

	5 h 11 min 17 s		
		2 h 44 min 49 s	
		1 h 17 min 52 s	
b)			42 min 46 s

	2 h 4 s			
		58 min 20 s	1 h 13 min 3 s	
c)	46 min 22 s			



Good Luck!