

# Worksheet

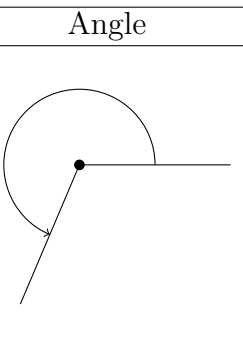
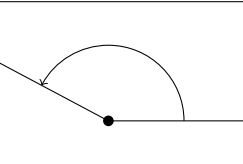
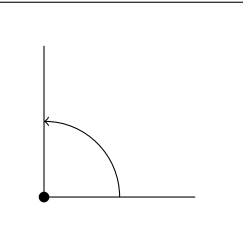
05/04/2020

Free on dw-math.com

Problem quickname: 6382

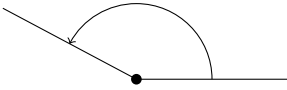
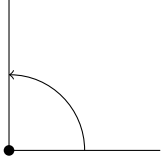
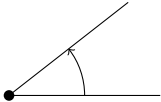
1)

Match each angle on the left side to the correct type on the right side.

| Angle |   | Type |              |
|-------|---|------|--------------|
| A     |    | 1    | obtuse angle |
| B     |   | 2    | right angle  |
| C     |  | 3    | reflex angle |

2)

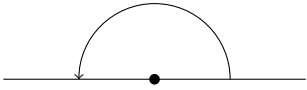
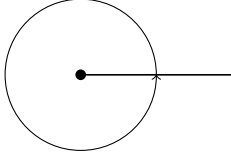
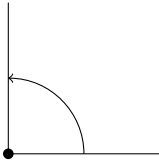
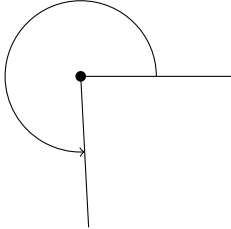
Match each angle on the left side to the correct type on the right side.

|   | Angle   |
|---|---|
| A |  |
| B |  |
| C |  |

|   | Type         |
|---|--------------|
| 1 | acute angle  |
| 2 | obtuse angle |
| 3 | right angle  |

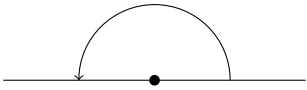
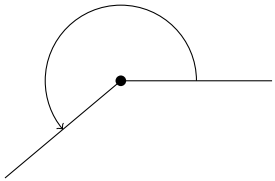
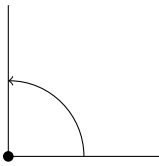
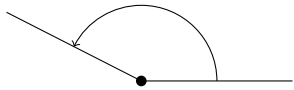
3)

Match each angle on the left side to the correct type on the right side.

| Angle |   | Type |                |
|-------|---|------|----------------|
| A     |    | 1    | full angle     |
| B     |    | 2    | reflex angle   |
| C     |    | 3    | straight angle |
| D     |  | 4    | right angle    |

4)

Match each angle on the left side to the correct type on the right side.

| Angle |   | Type |                |
|-------|---|------|----------------|
| A     |    | 1    | obtuse angle   |
| B     |    | 2    | right angle    |
| C     |    | 3    | straight angle |
| D     |  | 4    | reflex angle   |

Good Luck!