

# Worksheet

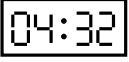

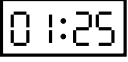
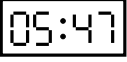

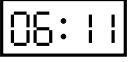
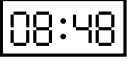
01/23/2019








Free on dw-math.com

Problem quickname: 6912

1)

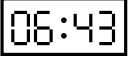




For every clock face shown in the first row, there is a corresponding clock face in the second row that shows the same time. Find these pairs!




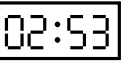

						
A	B	C	D	E	F	G

1	2	3	4	5	6	7
						

2)

For every clock face shown in the first row, there is a corresponding clock face in the second row that shows the same time. Find these pairs!

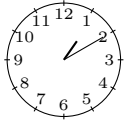
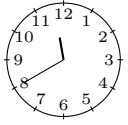

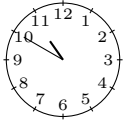
				
A	B	C	D	E





1	2	3	4	5
				

3)

For every clock face shown in the first row, there is a corresponding clock face in the

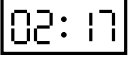
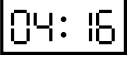

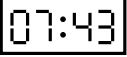
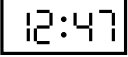
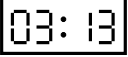

second row that shows the same time. Find these pairs!








			
A	B	C	D

1	2	3	4
			

4)

For every clock face shown in the first row, there is a corresponding clock face in the second row that shows the same time. Find these pairs!

						
A	B	C	D	E	F	G

1	2	3	4	5	6	7
						

Good Luck!