

# Worksheet

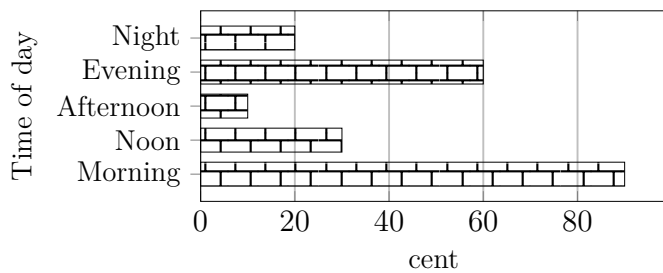
05/12/2020

Free on dw-math.com

Problem quickname: 9231

1)

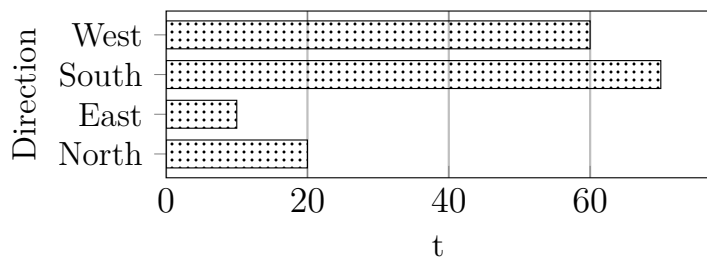
Create a table with two columns and headings. then put the values from the bar chart into the table.



2)

Read the numbers from the diagram to complete the table.

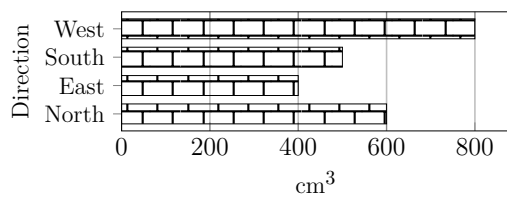
Direction	Weight(t)
North	
East	
South	
West	



3)

Read the numbers from the diagram to complete the table.

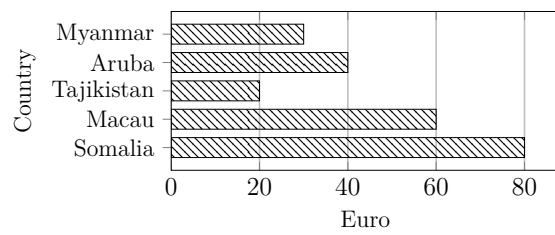
Direction	Volume(cm <sup>3</sup> )
North	
East	400
South	
West	800



4)

Read the numbers from the diagram to complete the table.

Country	Amount(Euro)
Somalia	
Macau	
Tajikistan	
Aruba	
Myanmar	30



Good Luck!