

Worksheet

01/21/2019

Free on dw-math.com

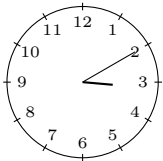
Problem quickname: 2783

1)

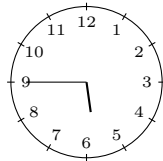
Tell the time shown by the clock, for example 08:15.

Quick:
2783

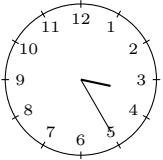
a) 3:10.



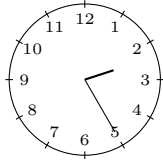
b) 5:45.



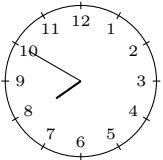
c) 3:25.



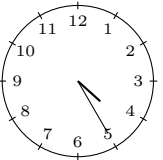
d) 2:25.



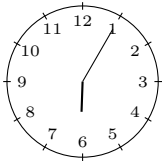
e) 7:50.



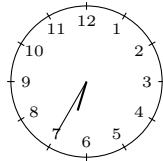
f) 4:25.



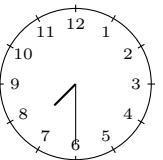
g) 6:05.



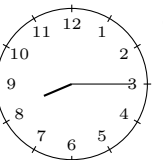
h) 6:35.



i) 7:30.



j) 8:15.

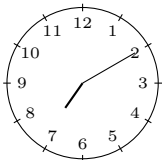


2)

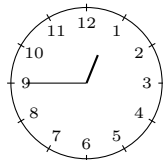
Tell the time shown by the clock, for example 08:15.

Quick:
2783

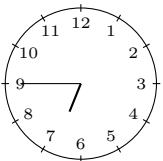
a) 7:10.



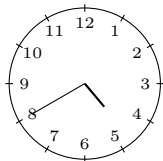
b) 0:45.



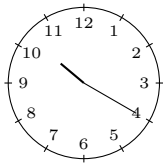
c) 6:45.



d) 4:40.



e) 10:20.

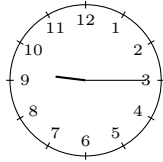


3)

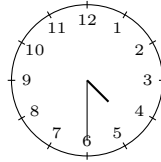
Tell the time shown by the clock, for example “quarter past eight”.

Quick:
2783

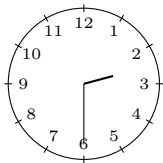
a) a quarter past nine



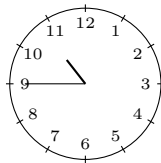
b) half past four



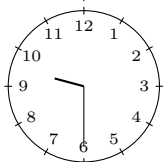
c) half past two



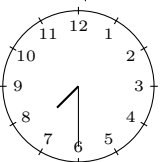
d) a quarter to eleven



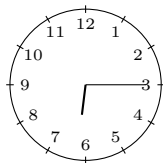
e) half past nine



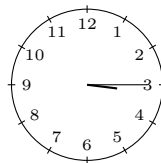
f) half past seven



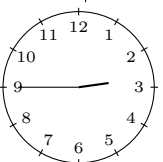
g) a quarter past six



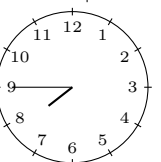
h) a quarter past three



i) a quarter to three



j) a quarter to eight

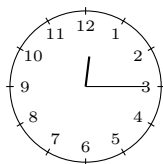


4)

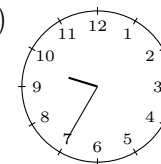
Tell the time shown by the clock, for example 08:15.

Quick:
2783

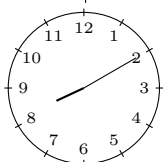
a) 0:15.



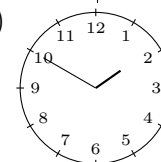
b) 9:35.



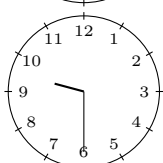
c) 8:10.



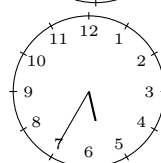
d) 1:50.



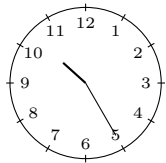
e) 9:30.



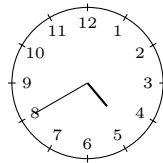
f) 5:35.



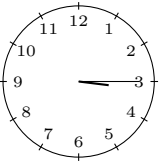
g) 10:25.



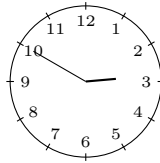
h) 4:40.



i) 3:15.



j) 2:50.



Good Luck!