

# Worksheet

11/03/2019

Free on dw-math.com

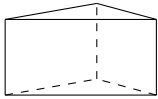
Problem quickname: 5978

1)

Name the geometric shape that is shown.

Quick:  
5978

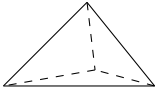
a) Shape: A prism



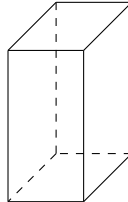
b) Shape: A cube, and a cuboid, too.



c) Shape: A tetrahedron



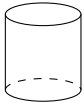
d) Shape: A cuboid



e) Shape: A pyramid



f) Shape: A cylinder

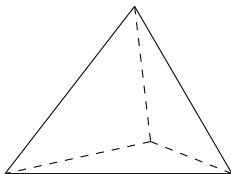


2)

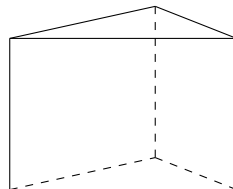
Name the geometric shape that is shown.

Quick:  
5978

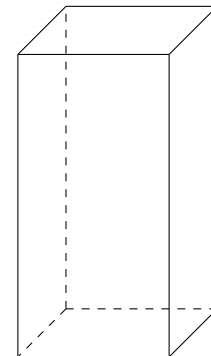
a) Shape: A tetrahedron



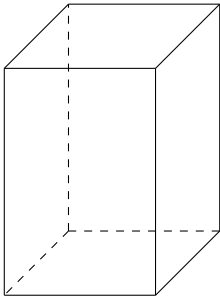
b) Shape: A prism



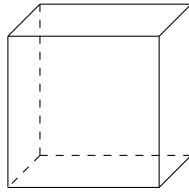
c) Shape: A cuboid



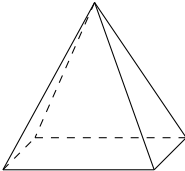
d) Shape: A cuboid



e) Shape: A cube, and a cuboid, too.



f) Shape: A pyramid

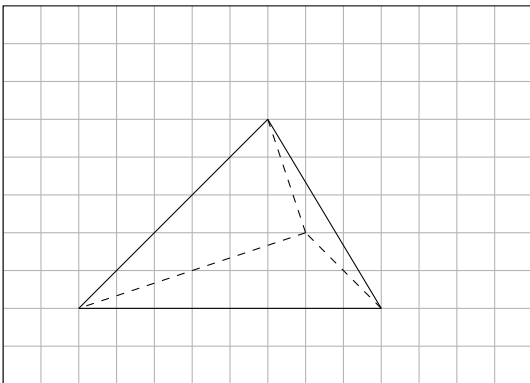


3)

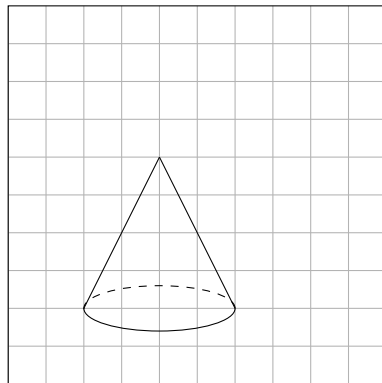
Name the geometric shape that is shown.

Quick:  
5978

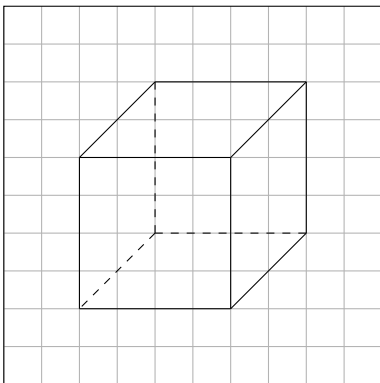
a) Shape: A tetrahedron



b) Shape: A cone



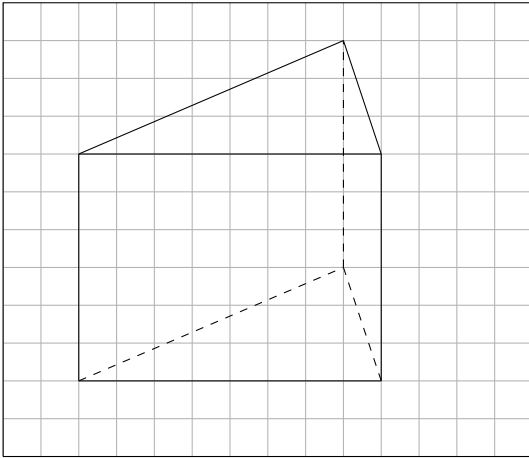
c) Shape: A cube, and a cuboid, too.



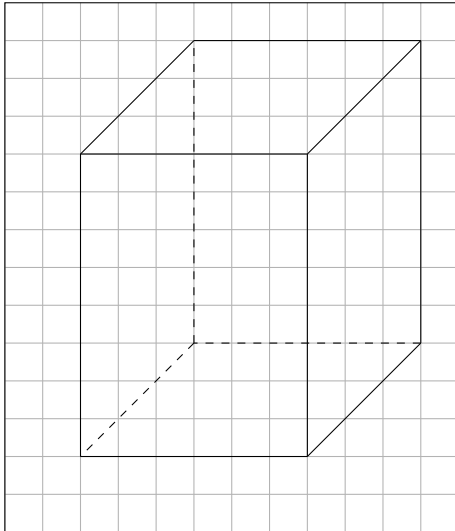
4)

Name the geometric shape that is shown.

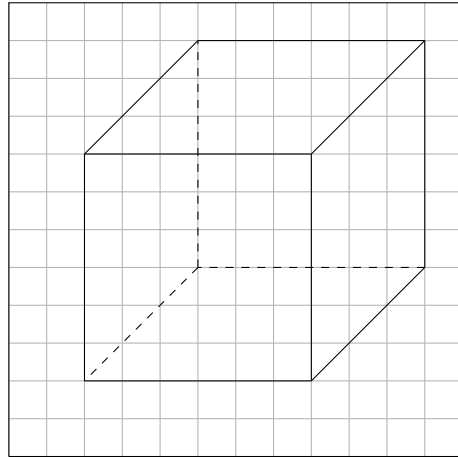
a) Shape: A prism



b) Shape: A cuboid



c) Shape: A cube, and a cuboid, too.



Good Luck!