

Worksheet

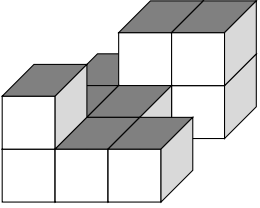
07/31/2018

Free on dw-math.com

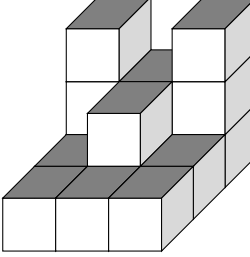
Problem quickname: 7569

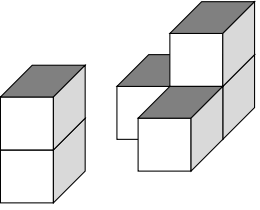
1)

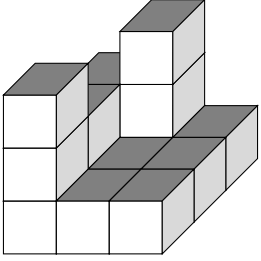
Create the plan for the cube building as shown in a).

a) 

1	2	2
1	1	0
2	1	1

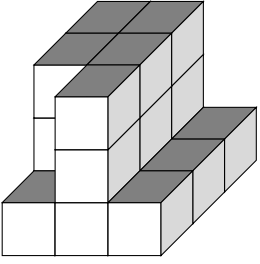
b) 

c) 

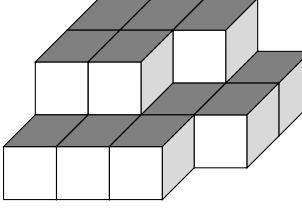
d) 

2)

Create the plan for the cube building as shown in a).

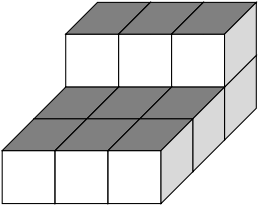
a) 

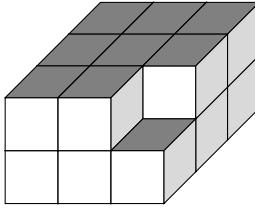
3	3	1	0
3	3	1	0
1	3	1	0

b) 

3)

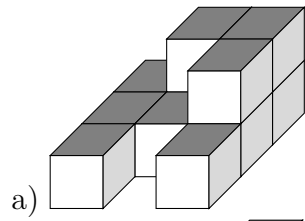
Create the plan for the cube building.

a) 

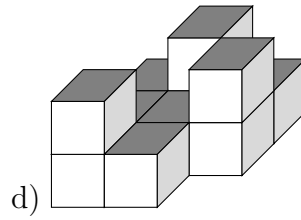
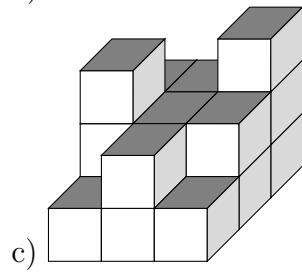
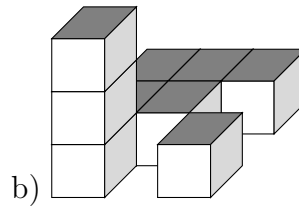
b) 

4)

Create the plan for the cube building as shown in a).



1	2	2
1	1	2
1	0	1



Good Luck!