

Worksheet

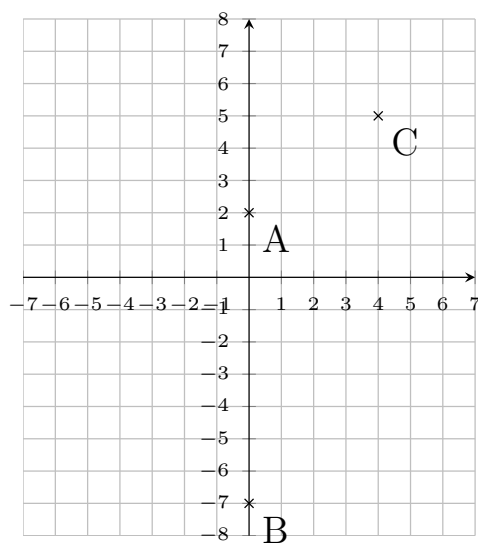
05/12/2019

Free on dw-math.com

Problem quickname: 7812

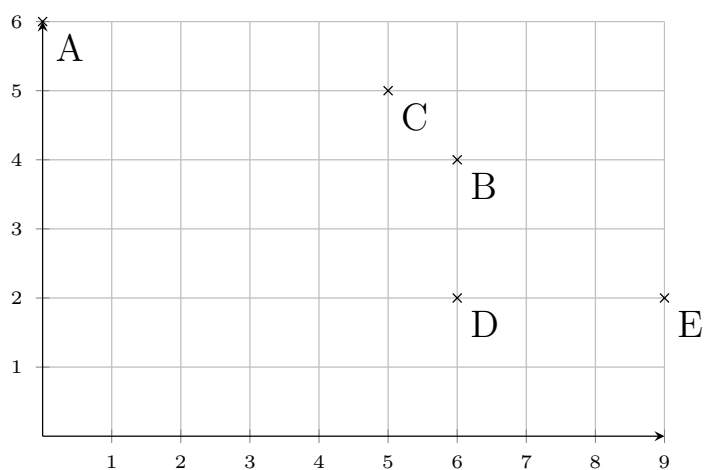
1)

Draw a suitable coordinate plane and mark the points given.

Quick:
7812 $A(0|2)$, $B(0|-7)$, $C(4|5)$

2)

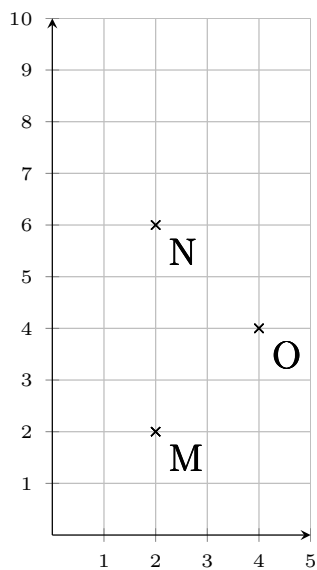
Draw a suitable coordinate plane and mark the points given.

Quick:
7812 $A(0|6)$, $B(6|4)$, $C(5|5)$, $D(6|2)$, $E(9|2)$

3)

Quick:
7812

Mark the points on the coordinate plane.

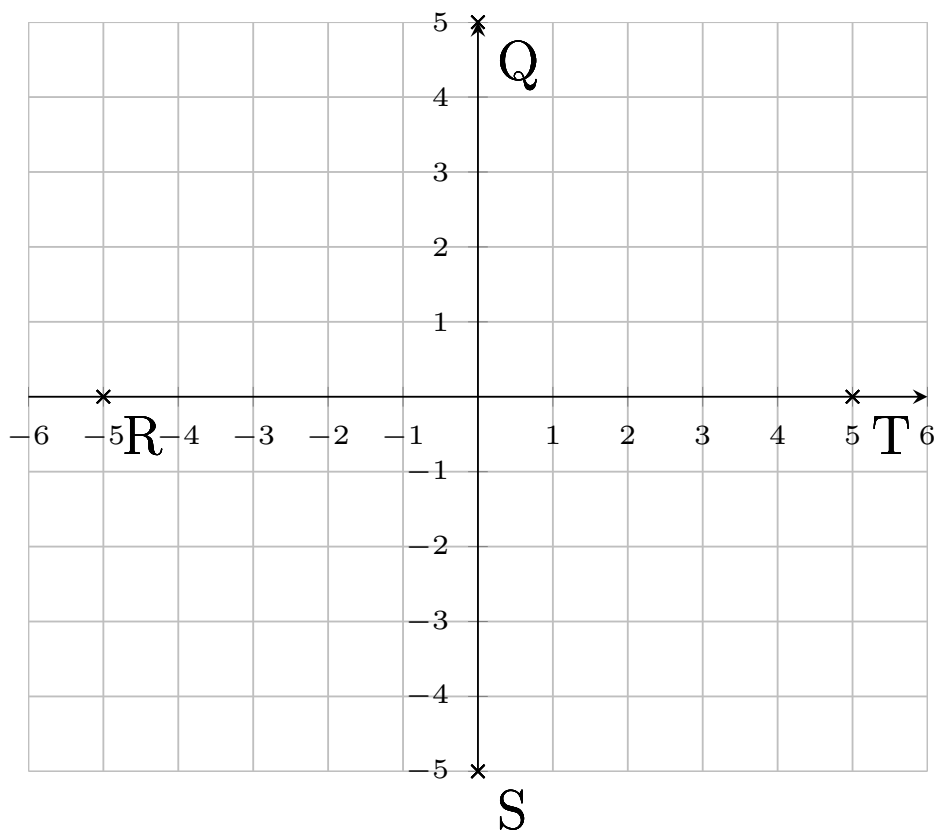


M(2|2), N(2|6), O(4|4)

4)

Quick:
7812

Mark the points on the coordinate plane.



$Q(0|5)$, $R(-5|0)$, $S(0|-5)$, $T(5|0)$

Good Luck!