

Worksheet

01/23/2019

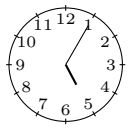



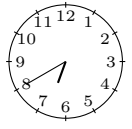
Free on dw-math.com

Problem quickname: 8346

1)

Match the clock faces with the corresponding time specification.


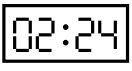
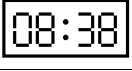
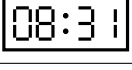


Quick:
8346

Clock face			Time specification
	A	→	2 five past five
	B	→	5 half past ten
	C	→	1 a quarter to two
	D	→	3 a quarter past twelve
	E	→	4 twenty to seven

2)







Match the clock display with the corresponding time specification.

Quick:
8346

Clock face			Time specification
	A	→	5 nine past one
	B	→	6 twenty-four past two
	C	→	1 twenty-two to nine
	D	→	3 twenty-nine to nine
	E	→	2 eight to eleven
	F	→	4 twenty-six past four



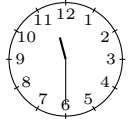



3)

Match the clock faces with the corresponding time specification.

Clock face		→		Time specification
	A	→	3	eleven past eight
	B	→	6	twenty-one past nine
	C	→	5	two past three
	D	→	1	seventeen past six
	E	→	2	twenty-eight to seven
	F	→	4	a quarter past nine

4)

Match the clock faces with the corresponding time specification.

Clock face			Time specification
	A	→	3 half past one
	B	→	6 half past four
	C	→	5 half past eleven
	D	→	1 twelve o'clock
	E	→	2 half past five
	F	→	4 ten o'clock

Good Luck!