

# Worksheet

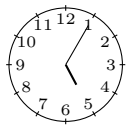



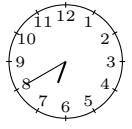
01/23/2019

Free on dw-math.com

Problem quickname: 8346


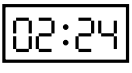
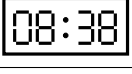



1)

Match the clock faces with the corresponding time specification.

Clock face			Time specification
	A	1	a quarter to two
	B	2	five past five
	C	3	a quarter past twelve
	D	4	twenty to seven
	E	5	half past ten







2)

Match the clock display with the corresponding time specification.

Clock face			Time specification
	A	1	twenty-two to nine
	B	2	eight to eleven
	C	3	twenty-nine to nine
	D	4	twenty-six past four
	E	5	nine past one
	F	6	twenty-four past two

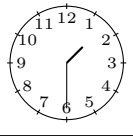
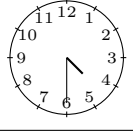
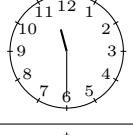
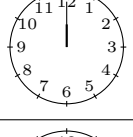
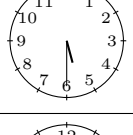

3)

Match the clock faces with the corresponding time specification.

Clock face			Time specification
	A	1	seventeen past six
	B	2	twenty-eight to seven
	C	3	eleven past eight
	D	4	a quarter past nine
	E	5	two past three
	F	6	twenty-one past nine

4)

Match the clock faces with the corresponding time specification.

Clock face			Time specification
	A	1	twelve o'clock
	B	2	half past five
	C	3	half past one
	D	4	ten o'clock
	E	5	half past eleven
	F	6	half past four

Good Luck!